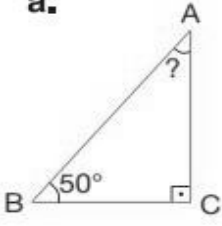


1 Aşağıdaki noktalı yeri tamamlayınız.

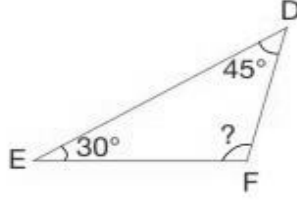
Her üçgenin iç açılarının ölçülerinin toplamı dir.

Aşağıdaki üçgenlerde ölçüsü verilmeyen açıların ölçülerini bulunuz.

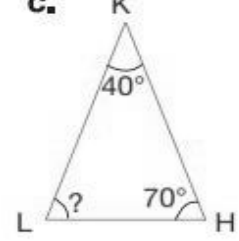
a.



b.

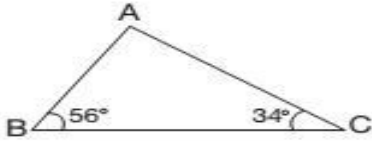


c.

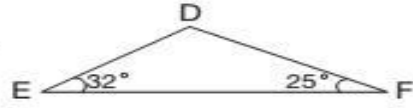


2 Aşağıdaki üçgenlerde ölçüsü verilmeyen açıların ölçülerini bulunuz. Daha sonra bu üçgenleri açı ölçülerine göre sınıflandırınız.

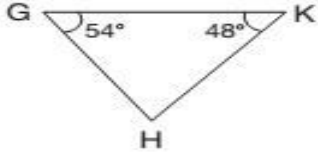
a.



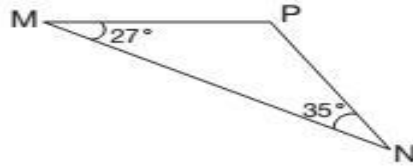
b.



c.

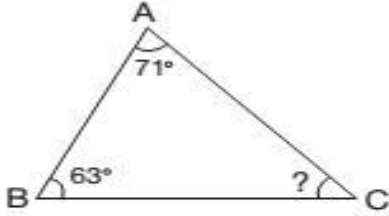


ç.

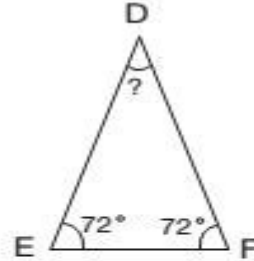


3 Aşağıdaki üçgenlerde ölçüsü verilmeyen açıların ölçülerini bulunuz.

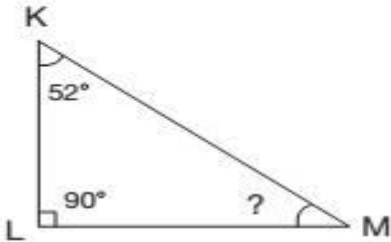
a.



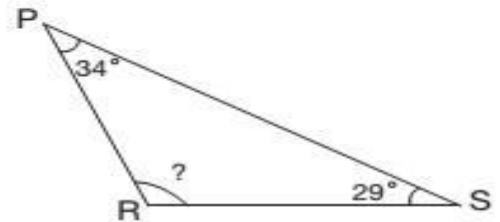
b.



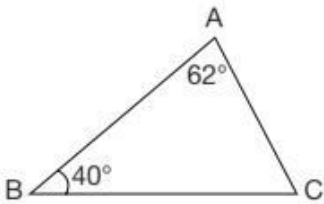
c.



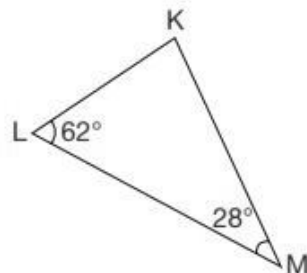
ç.



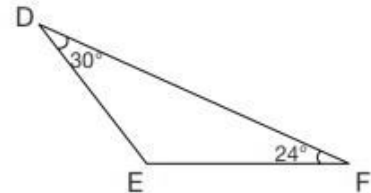
4 Aşağıdaki üçgenlerin bilinmeyen 3. açılarını bulup sınıflandırınız



.....



.....



.....