


KESİRLERİN SAYI DOĞRUSU ÜZERİNDE GÖSTERİLMESİ



Adı Soyadı:.....

Aşağıdaki kesirleri sayı doğrusu üzerinde gösteriniz.

$$\frac{3}{5}$$



$$\frac{1}{4}$$



$$\frac{5}{6}$$



$$\frac{5}{3}$$



$$\frac{7}{4}$$



$$\frac{10}{3}$$




$$\frac{8}{6}$$




$$2\frac{4}{5}$$




$$1\frac{2}{4}$$



$$2\frac{3}{5}$$




$$3\frac{2}{3}$$



Aşağıdaki kesirleri sayı doğrusu üzerinde gösteriniz.


$\frac{2}{6}$




$\frac{5}{4}$




$\frac{8}{3}$



$2\frac{2}{3}$



$1\frac{1}{4}$



Sayı doğrusu üzerinde verilen kesirleri yazınız.

