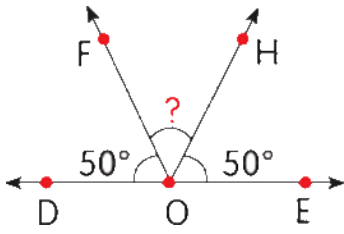
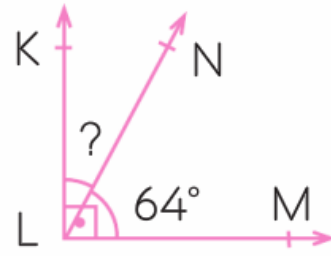


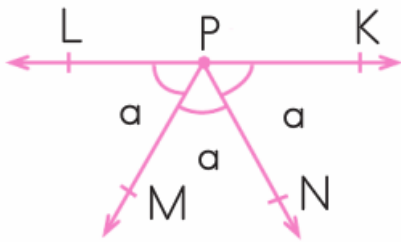
AÇILARLA İLGİLİ ÖRNEK SORULAR



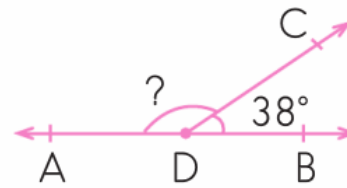
Yandaki şekle göre $s(\widehat{FOH})$ kaç derecedir?



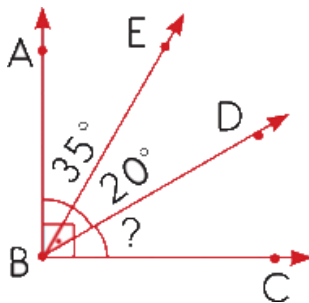
$s(\widehat{KLN}) = \dots\dots\dots$



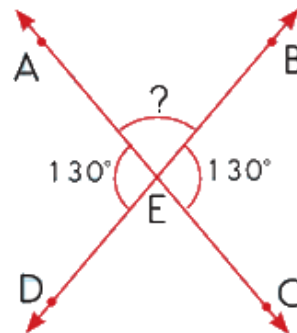
$s(\widehat{LPM}) = \dots\dots\dots$



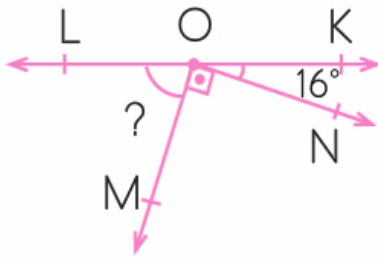
$s(\widehat{ADC}) = \dots\dots\dots$



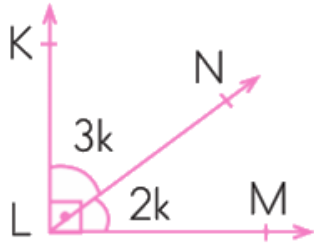
$s(\widehat{DBC}) = ?$



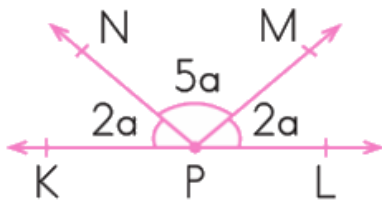
$s(\widehat{AEB}) = ?$



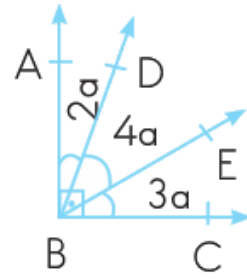
$$s(\widehat{LOM}) = \dots\dots\dots$$



$$s(\widehat{NLM}) = \dots\dots\dots$$

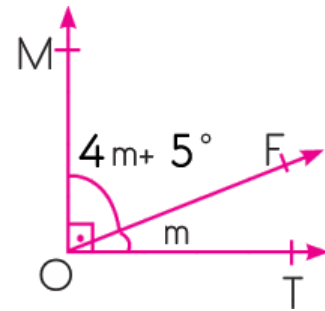


$$s(\widehat{NPM}) = \dots\dots\dots$$



Yukarıdaki Şekilde $4a$ ile gösterilen DBE açısı kaç derecedir?

Yandaki şekle göre komşu olan iki açıdan küçüğü kaç derecedir?



Yandaki şekle göre BMK açısı kaç derecedir?

