

## 3. Sınıf Zihinden Çıkarma İşlemi

Aşağıdaki işlemleri zihinden yapınız.

$$\begin{array}{r} 627 \\ - 215 \\ \hline ? \end{array}$$

$$\begin{array}{r} 627 \\ - 200 \\ \hline 427 \end{array}$$

$$\begin{array}{r} 427 \\ - 10 \\ \hline 417 \end{array}$$

$$\begin{array}{r} 417 \\ - 5 \\ \hline 412 \end{array}$$

İşlemi zihinden yaparken önce yüzlük çıkarılır, sonra onluk çıkarılır ve daha sonra birlikler çıkarılır.

$$865 - 143 = ?$$

$$782 - 220 = ?$$

Muhammet ÖZENÇ

$$587 - 124 = ?$$

$$769 - 257 = ?$$


Muhammet ÖZENÇ

$$951 - 321 = ?$$

$$765 - 423 = ?$$

## 3. Sınıf Zihinden Çıkarma İşlemi

Aşağıdaki çıkarma işlemlerini yapınız.



$$\begin{array}{r} 485 \\ - 254 \\ \hline \end{array}$$

O



$$\begin{array}{r} 802 \\ - 266 \\ \hline \end{array}$$

C



$$\begin{array}{r} 754 \\ - 389 \\ \hline \end{array}$$

E

$$\begin{array}{r} 602 \\ - 254 \\ \hline \end{array}$$

H

$$\begin{array}{r} 635 \\ - 199 \\ \hline \end{array}$$

U

$$\begin{array}{r} 612 \\ - 254 \\ \hline \end{array}$$

K

$$\begin{array}{r} 633 \\ - 454 \\ \hline \end{array}$$


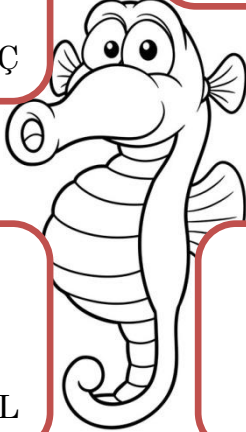
R

$$\begin{array}{r} 817 \\ - 244 \\ \hline \end{array}$$

Ö

$$\begin{array}{r} 500 \\ - 213 \\ \hline \end{array}$$

Ç



$$\begin{array}{r} 717 \\ - 259 \\ \hline \end{array}$$

L

$$\begin{array}{r} 309 \\ - 254 \\ \hline \end{array}$$

Z

$$\begin{array}{r} 955 \\ - 188 \\ \hline \end{array}$$

İ

$$\begin{array}{r} 466 \\ - 299 \\ \hline \end{array}$$

D

348

365

179

287

231

536

436

358

573

55

365

458

167

767

179