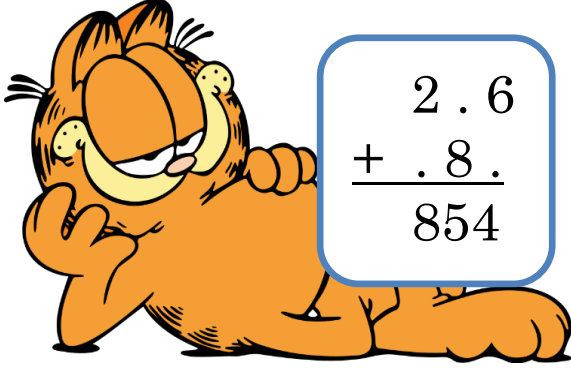
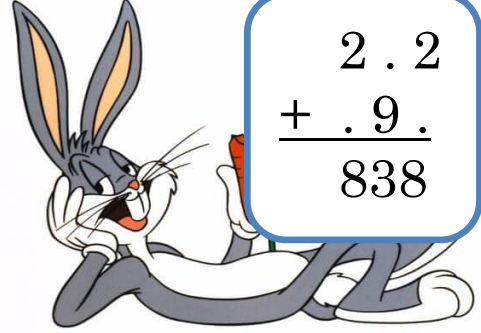


## 3. Sınıf Verilmeyenli Toplama İşlemi

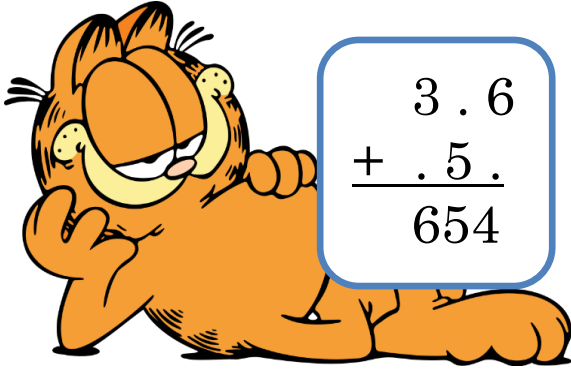
Aşağıdaki işlemleri yapınız.



$$\begin{array}{r} 2.6 \\ + .8. \\ \hline 854 \end{array}$$

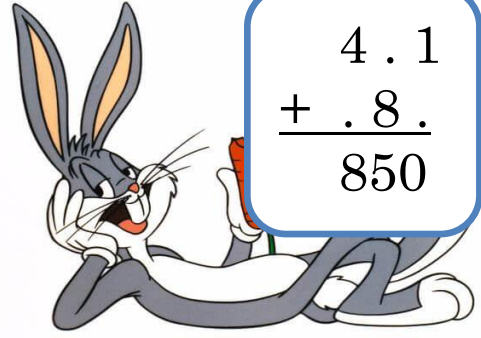


$$\begin{array}{r} 2.2 \\ + .9. \\ \hline 838 \end{array}$$

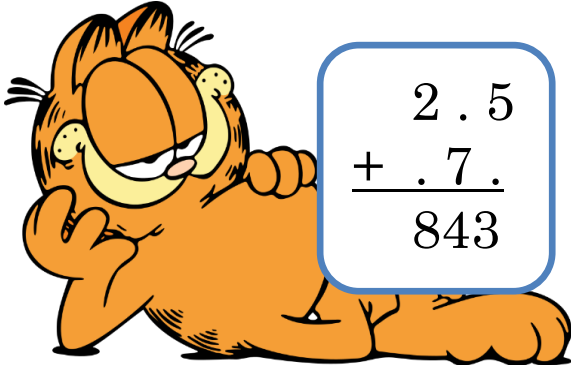


$$\begin{array}{r} 3.6 \\ + .5. \\ \hline 654 \end{array}$$

Muhammet ÖZENÇ




$$\begin{array}{r} 4.1 \\ + .8. \\ \hline 850 \end{array}$$

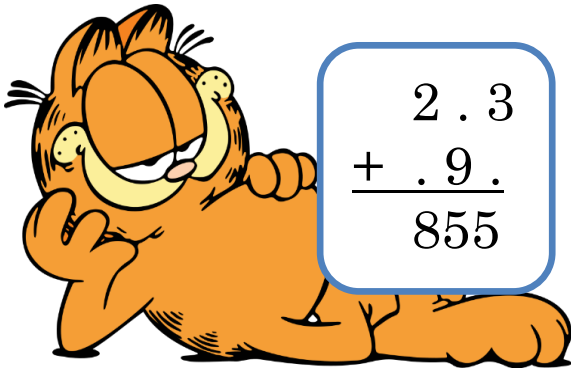


$$\begin{array}{r} 2.5 \\ + .7. \\ \hline 843 \end{array}$$

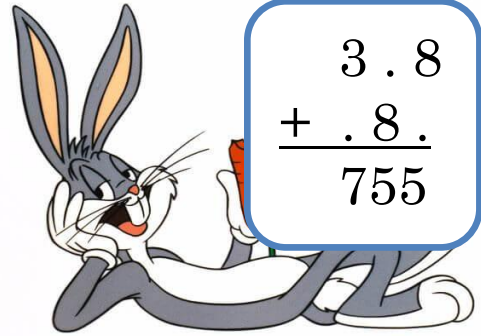
Muhammet ÖZENÇ



$$\begin{array}{r} 5.6 \\ + .8. \\ \hline 857 \end{array}$$

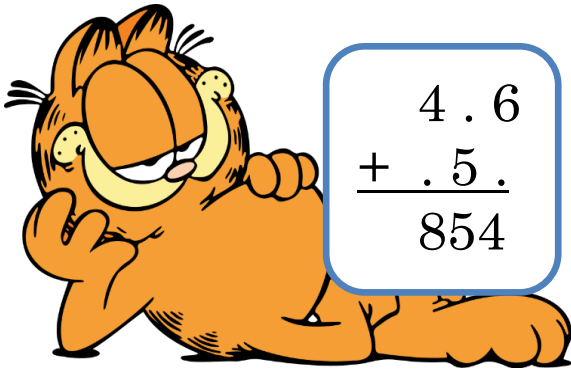
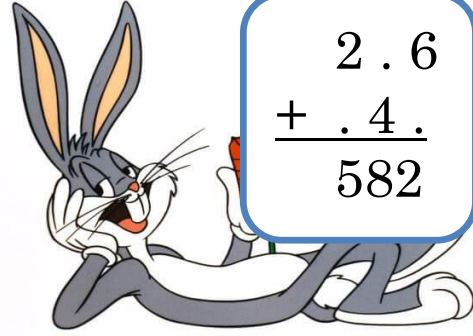
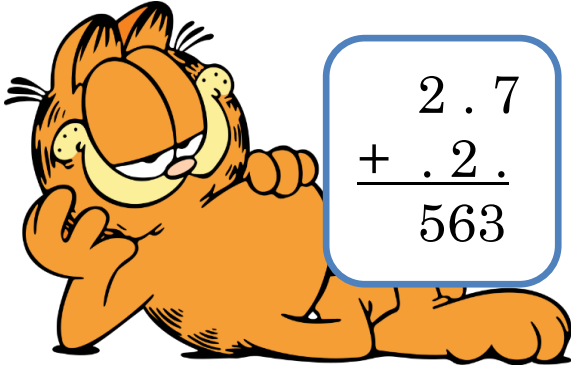


$$\begin{array}{r} 2.3 \\ + .9. \\ \hline 855 \end{array}$$

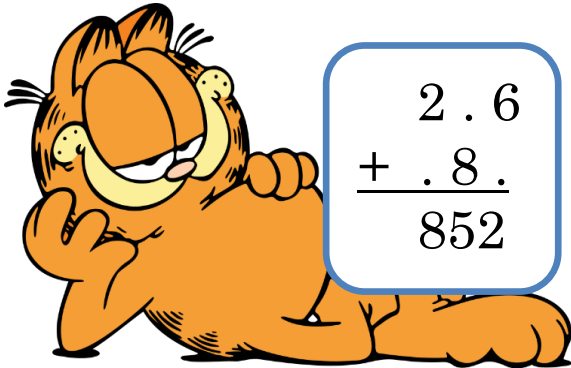



$$\begin{array}{r} 3.8 \\ + .8. \\ \hline 755 \end{array}$$

## 3. Sınıf Verilmeyenli Toplama İşlemi



Muhammet ÖZENÇ



Muhammet ÖZENÇ

