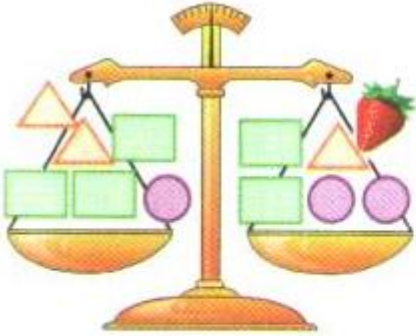
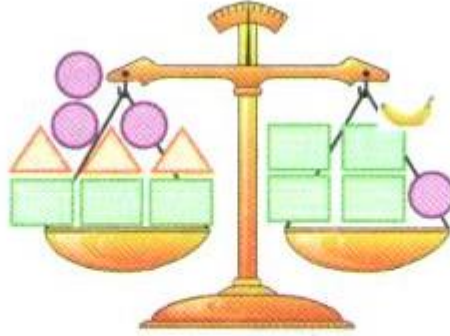
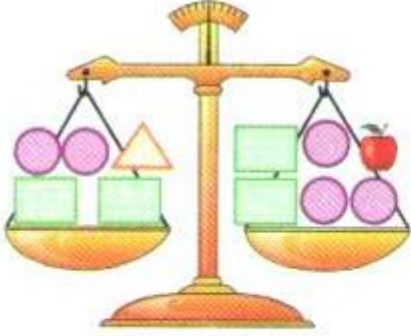
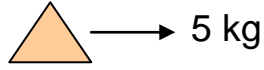
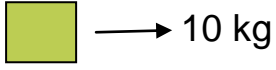


Ad ve Soyad:.....

TARTMA

apodran

*Eşit kollu terazilerin kefeleri dengededir. Buna göre meyvelerde belirtilen ağırlıkları bulunuz.



*Eşit kollu terazilerin kefelerini dengede tutabilmek için belirtilen şekillerden uygun olanını çiziniz.

