


2. Sınıf Eldeli Toplama İşlemi

Aşağıdaki toplama işlemlerini yapınız.
Sonucu tek sayı olanları maviye, sonucu çift sayı olanları kırmızıya boyayınız.


$$\begin{array}{r} \text{○} \\ 25 \\ + 36 \\ \hline \end{array}$$




$$\begin{array}{r} \text{○} \\ 48 \\ + 35 \\ \hline \end{array}$$




$$\begin{array}{r} \text{○} \\ 27 \\ + 34 \\ \hline \end{array}$$




$$\begin{array}{r} \text{○} \\ 25 \\ + 38 \\ \hline \end{array}$$




$$\begin{array}{r} \text{○} \\ 19 \\ + 35 \\ \hline \end{array}$$




$$\begin{array}{r} \text{○} \\ 28 \\ + 37 \\ \hline \end{array}$$



$$\begin{array}{r} \text{○} \\ 25 \\ + 45 \\ \hline \end{array}$$




$$\begin{array}{r} \text{○} \\ 26 \\ + 38 \\ \hline \end{array}$$




2. Sınıf Eldeli Toplama İşlemi


$$\begin{array}{r} \text{○} \\ 22 \\ + 59 \\ \hline \end{array}$$




$$\begin{array}{r} \text{○} \\ 34 \\ + 36 \\ \hline \end{array}$$




$$\begin{array}{r} \text{○} \\ 35 \\ + 46 \\ \hline \end{array}$$




$$\begin{array}{r} \text{○} \\ 47 \\ + 36 \\ \hline \end{array}$$




$$\begin{array}{r} \text{○} \\ 45 \\ + 48 \\ \hline \end{array}$$



$$\begin{array}{r} \text{○} \\ 25 \\ + 39 \\ \hline \end{array}$$



$$\begin{array}{r} \text{○} \\ 28 \\ + 49 \\ \hline \end{array}$$



$$\begin{array}{r} \text{○} \\ 37 \\ + 36 \\ \hline \end{array}$$

