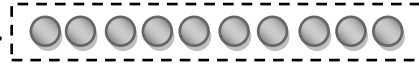


\* 1 destede aynı türden 10 tane nesne bulunur.



1 deste

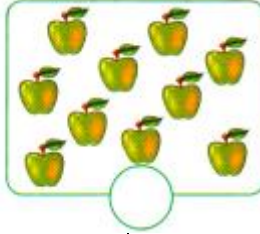

\* 1 düzinede aynı türden 12 tane nesne bulunur.



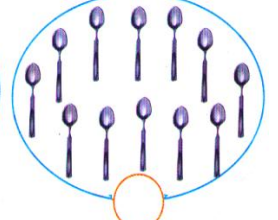
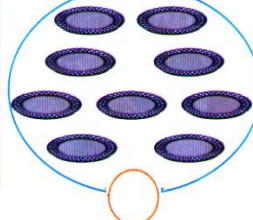

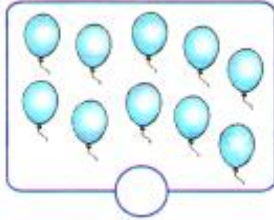

1 düzine

### ALİŞTIRMALAR

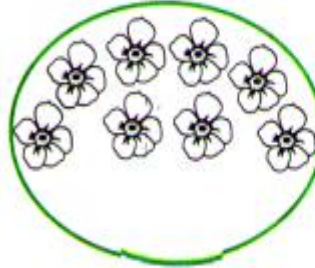
\* Aşağıdaki nesne gruplarından **deste** olanlarının altındaki yuvarlağı boyayınız.



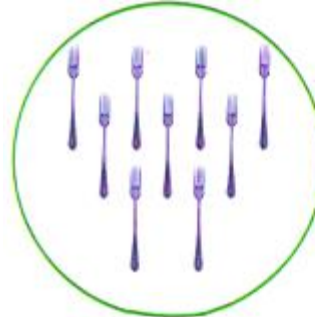
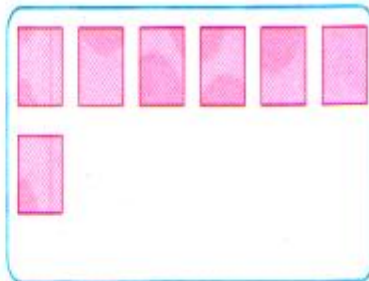
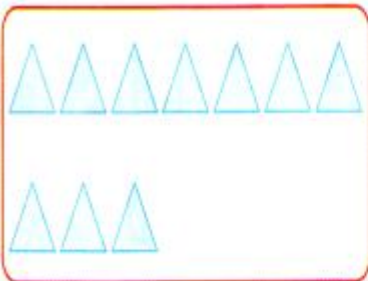
\* Aşağıdaki nesne gruplarından **düzine** olanlarının altındaki yuvarlağı boyayınız.






\* Aşağıdaki nesne gruplarını **1 desteye** tamamlayın.




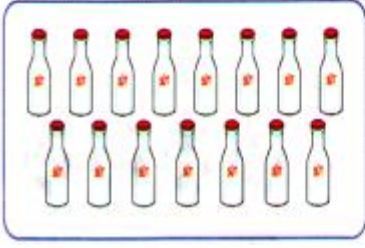
\* Aşağıdaki nesne gruplarını **1 düzineye** tamamlayın.



\* Aşağıdaki nesne gruplarının **1 destesini** ayırınız.



\*Aşağıdaki nesne gruplarının 1 düzinesini ayırınız.



\*Aşağıdaki kutuya bir deste elma çiziniz.



\*Aşağıdaki kutuya bir düzine çiçek çiziniz.




\*Aşağıdaki kutuya bir düzine yıldız çiziniz.




\*Aşağıdaki kutuya bir deste kalp çiziniz.



\*Aşağıdaki portakalların 1 destesini boyayınız.



\*Aşağıdaki armutların 1 düzinesini boyayınız.



\*Papatyaların eksik olan yapraklarını 1 desteye tamamlayınız.



\*Papatyaların eksik olan yapraklarını 1 düzineye tamamlayınız.



\*Vazodaki çiçekleri 1 desteye tamamlayınız.



\*Vazodaki çiçekleri 1 düzineye tamamlayınız.

