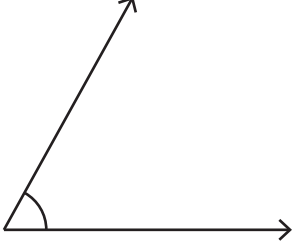


Adı Soyadı :

Tahmin ve Ölçüm

Aşağıda verilen açıları önce tahmin ediniz. Sonra ölçerek ölçüm sonucunu yazınız.

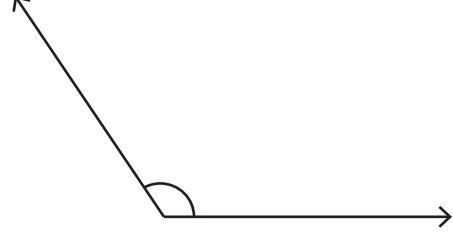
1)



Tahmin : _____

Ölçüm : _____

2)



Tahmin : _____

Ölçüm : _____

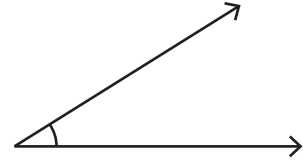
3)



Tahmin : _____

Ölçüm : _____

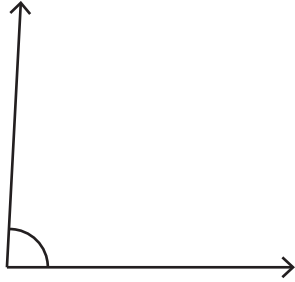
4)



Tahmin : _____

Ölçüm : _____

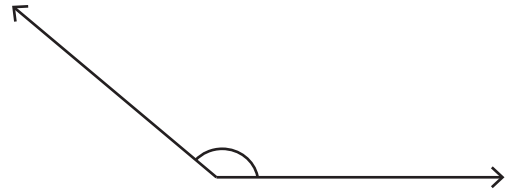
5)



Tahmin : _____

Ölçüm : _____

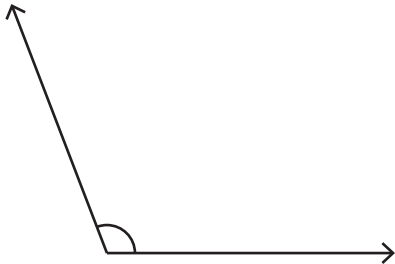
6)



Tahmin : _____

Ölçüm : _____

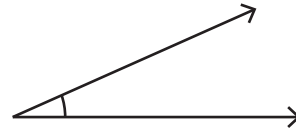
7)



Tahmin : _____

Ölçüm : _____

8)



Tahmin : _____

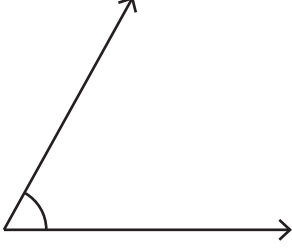
Ölçüm : _____

Adı Soyadı :

Tahmin ve Ölçüm

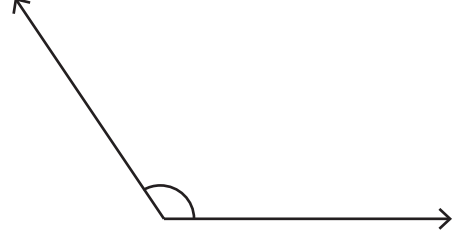
Aşağıda verilen açıları önce tahmin ediniz. Sonra ölçerek ölçüm sonucunu yazınız.

1)



Tahmin : 57° - 65°
Ölçüm : 61°

2)



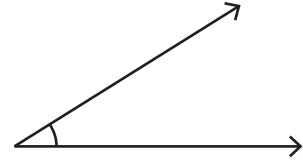
Tahmin : 120° - 128°
Ölçüm : 124°

3)



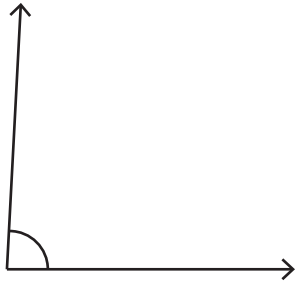
Tahmin : 161° - 169°
Ölçüm : 165°

4)



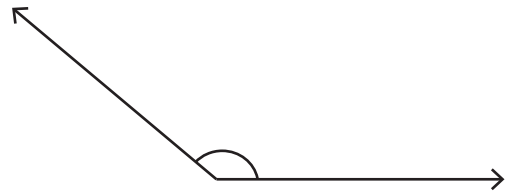
Tahmin : 28° - 36°
Ölçüm : 32°

5)



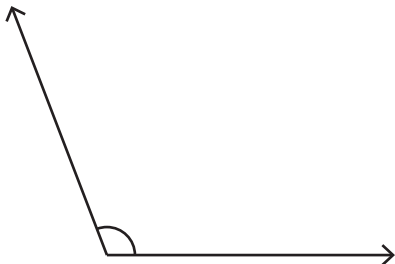
Tahmin : 83° - 91°
Ölçüm : 87°

6)



Tahmin : 136° - 144°
Ölçüm : 140°

7)



Tahmin : 107° - 115°
Ölçüm : 111°

8)



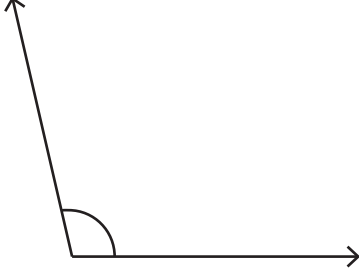
Tahmin : 20° - 28°
Ölçüm : 24°

Adı Soyadı :

Tahmin ve Ölçüm

Aşağıda verilen açılırları önce tahmin ediniz. Sonra ölçerek ölçüm sonucunu yazınız.

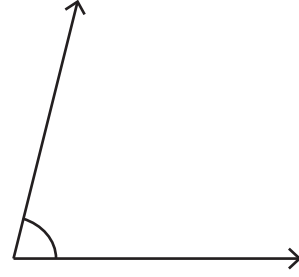
1)



Tahmin : _____

Ölçüm : _____

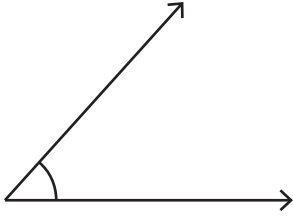
2)



Tahmin : _____

Ölçüm : _____

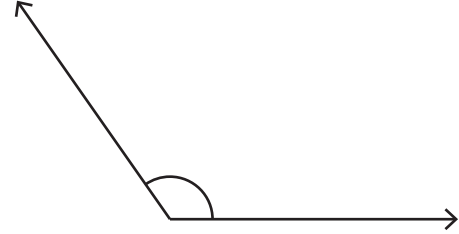
3)



Tahmin : _____

Ölçüm : _____

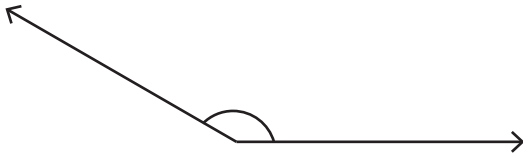
4)



Tahmin : _____

Ölçüm : _____

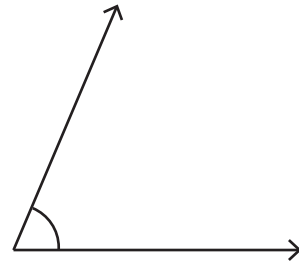
5)



Tahmin : _____

Ölçüm : _____

6)



Tahmin : _____

Ölçüm : _____

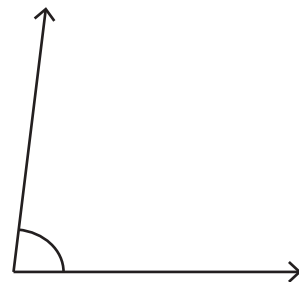
7)



Tahmin : _____

Ölçüm : _____

8)



Tahmin : _____

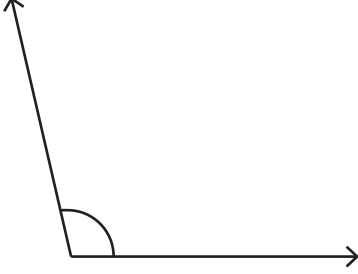
Ölçüm : _____

Adı Soyadı :

Tahmin ve Ölçüm

Aşağıda verilen açıları önce tahmin ediniz. Sonra ölçerek ölçüm sonucunu yazınız.

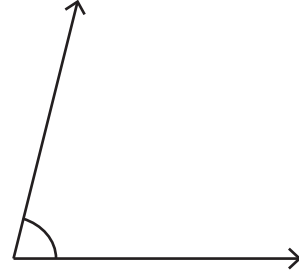
1)



Tahmin : 99° - 107°

Ölçüm : 103°

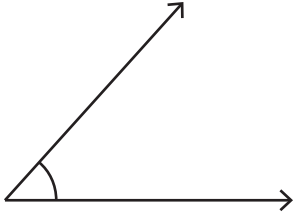
2)



Tahmin : 72° - 80°

Ölçüm : 76°

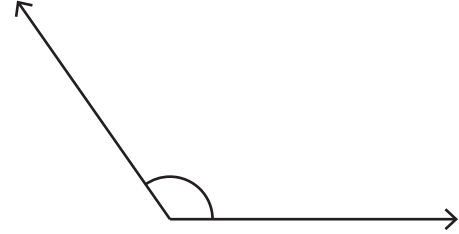
3)



Tahmin : 44° - 52°

Ölçüm : 48°

4)



Tahmin : 121° - 129°

Ölçüm : 125°

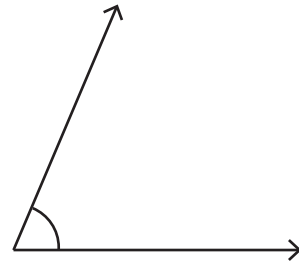
5)



Tahmin : 146° - 154°

Ölçüm : 150°

6)



Tahmin : 63° - 71°

Ölçüm : 67°

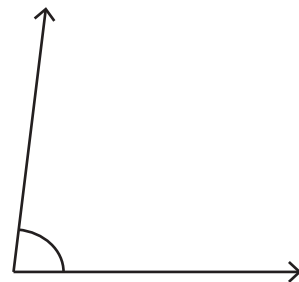
7)



Tahmin : 170° - 178°

Ölçüm : 174°

8)



Tahmin : 79° - 87°

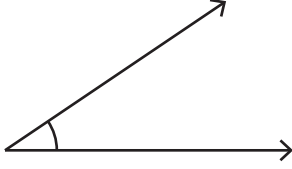
Ölçüm : 83°

Adı Soyadı :

Tahmin ve Ölçüm

Aşağıda verilen açılırları önce tahmin ediniz. Sonra ölçerek ölçüm sonucunu yazınız.

1)



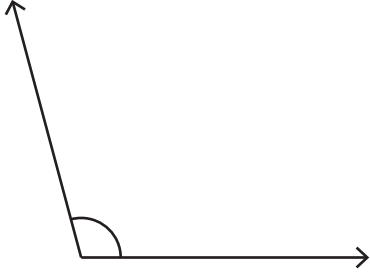
Tahmin : _____
Ölçüm : _____

2)



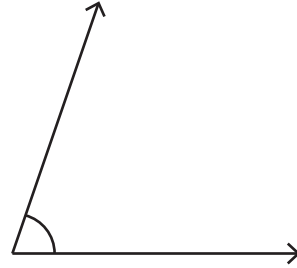
Tahmin : _____
Ölçüm : _____

3)



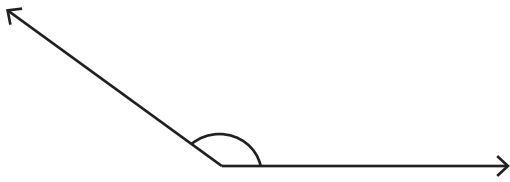
Tahmin : _____
Ölçüm : _____

4)



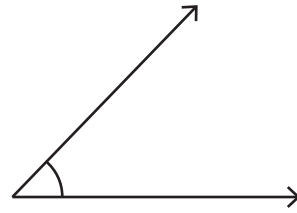
Tahmin : _____
Ölçüm : _____

5)



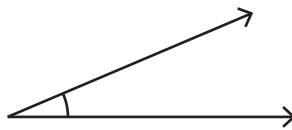
Tahmin : _____
Ölçüm : _____

6)



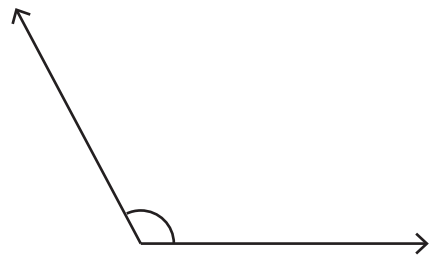
Tahmin : _____
Ölçüm : _____

7)



Tahmin : _____
Ölçüm : _____

8)



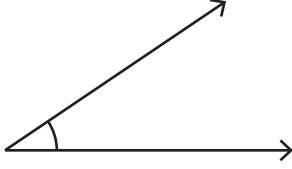
Tahmin : _____
Ölçüm : _____

Adı Soyadı :

Tahmin ve Ölçüm

Aşağıda verilen açları önce tahmin ediniz. Sonra ölçerek ölçüm sonucunu yazınız.

1)



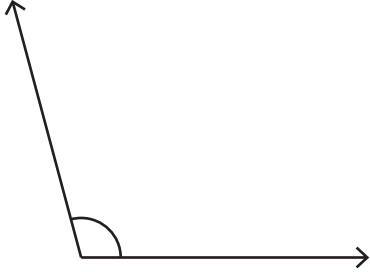
Tahmin : 30° - 38°
Ölçüm : 34°

2)



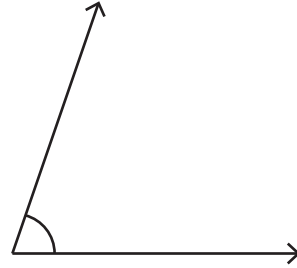
Tahmin : 163° - 171°
Ölçüm : 167°

3)



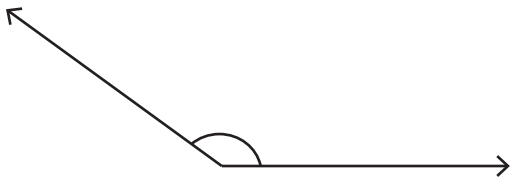
Tahmin : 101° - 109°
Ölçüm : 105°

4)



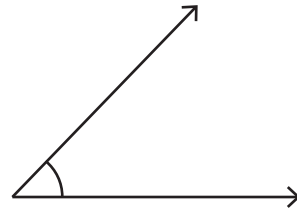
Tahmin : 67° - 75°
Ölçüm : 71°

5)



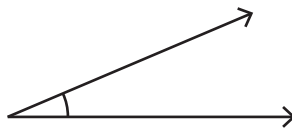
Tahmin : 140° - 148°
Ölçüm : 144°

6)



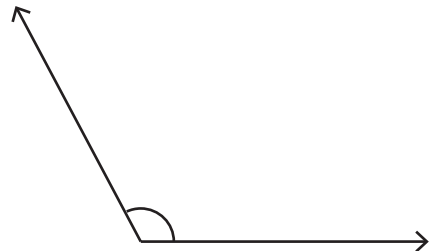
Tahmin : 42° - 50°
Ölçüm : 46°

7)



Tahmin : 19° - 27°
Ölçüm : 23°

8)



Tahmin : 114° - 122°
Ölçüm : 118°