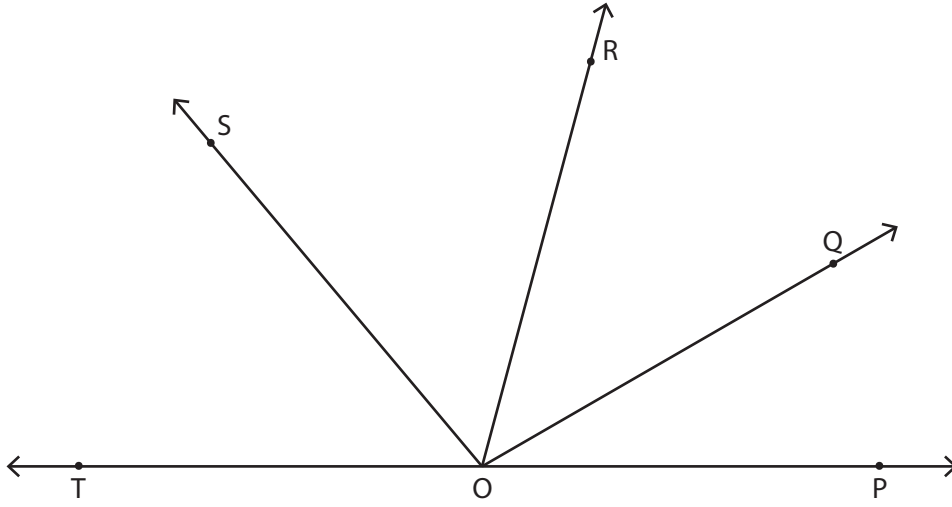


Adı Soyadı :

Açılar - Çoklu Işıklar

Açıölçer kullanarak verilen açılar ölçüsünü bulun.

1)



a) $\widehat{POQ} =$ _____

d) $\widehat{POR} =$ _____

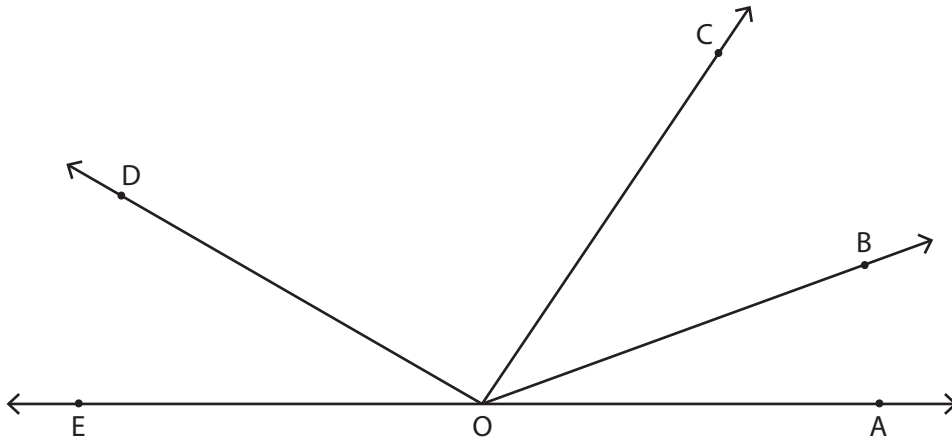
b) $\widehat{QOR} =$ _____

e) $\widehat{POS} =$ _____

c) $\widehat{ROS} =$ _____

f) $\widehat{ROT} =$ _____

2)



a) $\widehat{AOC} =$ _____

d) $\widehat{COE} =$ _____

b) $\widehat{BOD} =$ _____

e) $\widehat{DOE} =$ _____

c) $\widehat{AOB} =$ _____

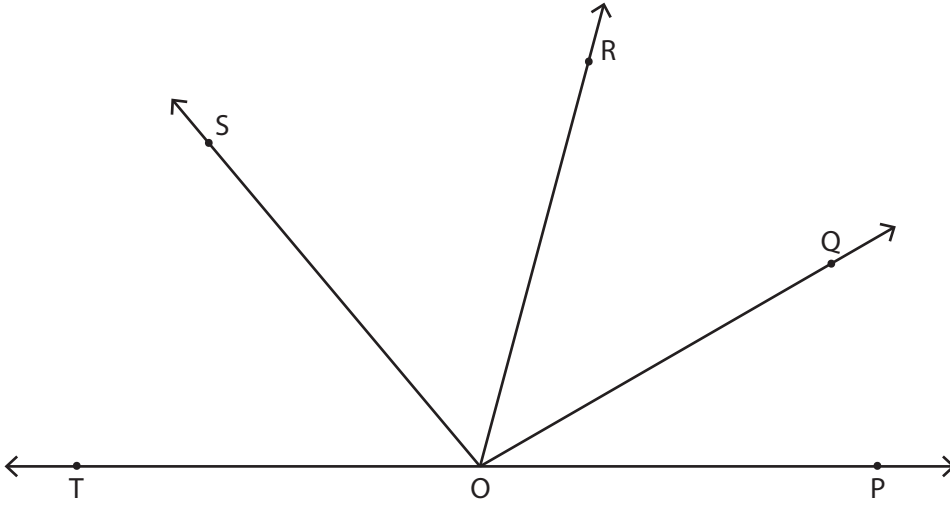
f) $\widehat{AOD} =$ _____

Adı Soyadı :

Açılar - Çoklu Işınlar

Açıölçer kullanarak verilen açılar ölçüsünü bulun.

1)



a) $\widehat{AOC} = 30^\circ$

d) $\widehat{POR} = 75^\circ$

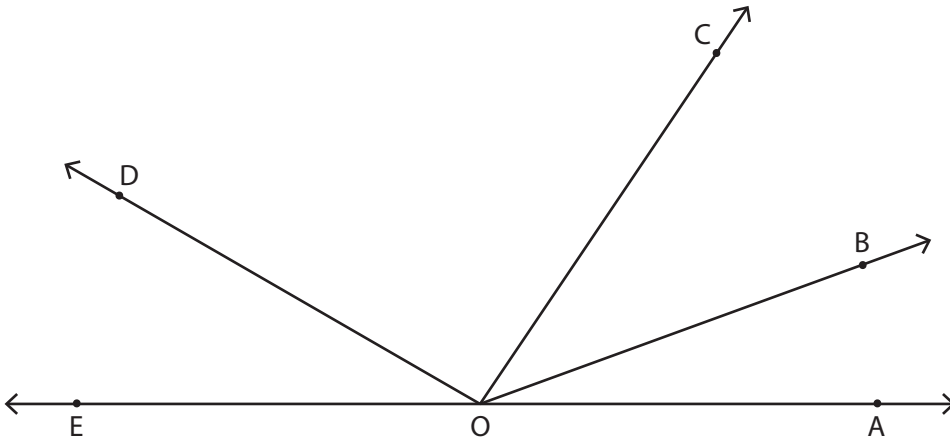
b) $\widehat{BOD} = 45^\circ$

e) $\widehat{POS} = 130^\circ$

c) $\widehat{AOB} = 55^\circ$

f) $\widehat{ROT} = 105^\circ$

2)



a) $\widehat{AOC} = 56^\circ$

d) $\widehat{COE} = 124^\circ$

b) $\widehat{BOD} = 130^\circ$

e) $\widehat{DOE} = 30^\circ$

c) $\widehat{AOB} = 20^\circ$

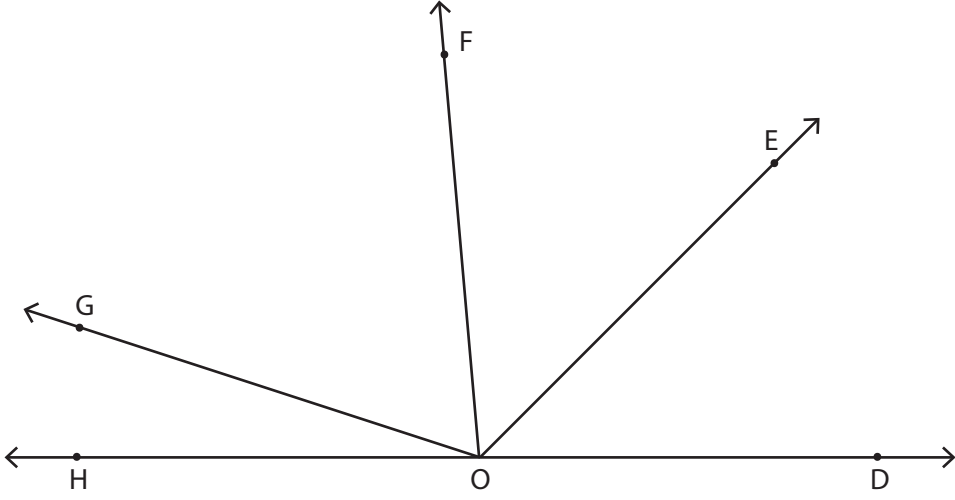
f) $\widehat{AOD} = 150^\circ$

Adı Soyadı :

Açılar - Çoklu Işınlar

Açıölçer kullanarak verilen açılar ölçüsünü bulun.

1)



a) $\widehat{DOE} =$ _____

d) $\widehat{EOF} =$ _____

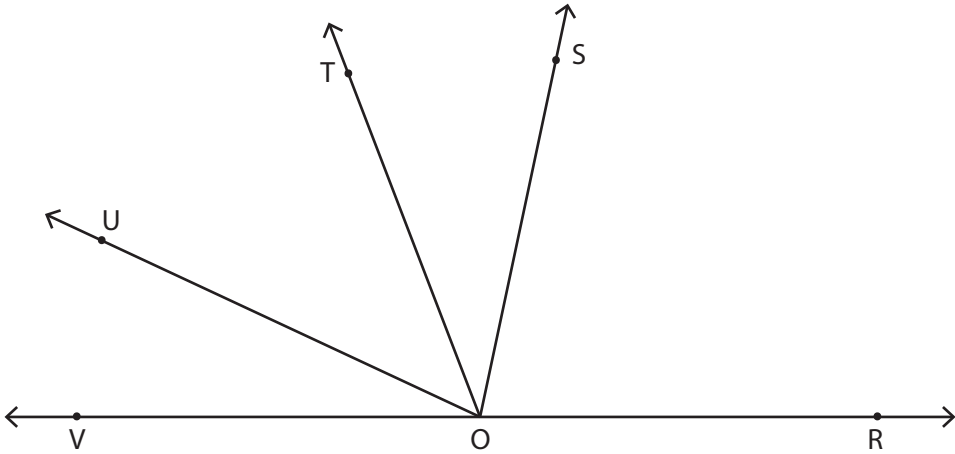
b) $\widehat{FOG} =$ _____

e) $\widehat{DOF} =$ _____

c) $\widehat{FOH} =$ _____

f) $\widehat{EOG} =$ _____

2)



a) $\widehat{SOT} =$ _____

d) $\widehat{ROS} =$ _____

b) $\widehat{TOV} =$ _____

e) $\widehat{SOV} =$ _____

c) $\widehat{ROT} =$ _____

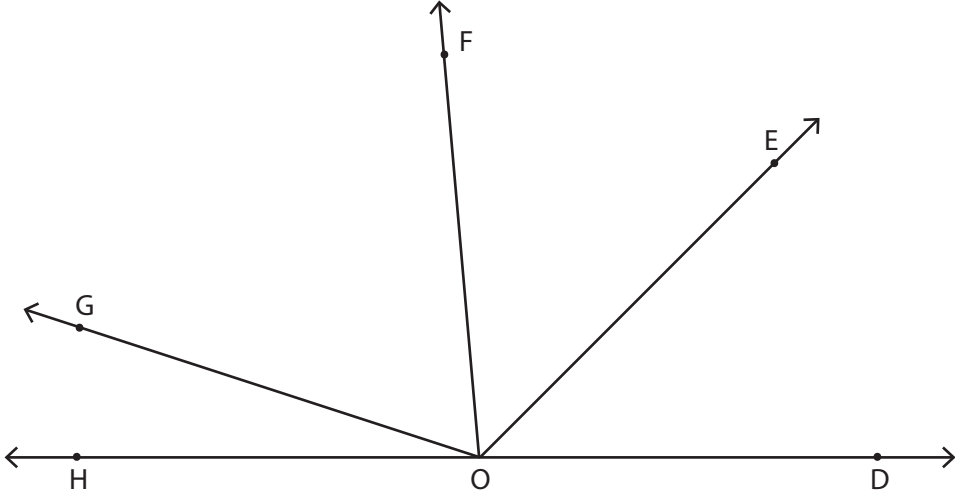
f) $\widehat{ROU} =$ _____

Adı Soyadı :

Açılar - Çoklu Işınlar

Açıölçer kullanarak verilen açılar ölçüsünü bulun.

1)



a) $\widehat{DOE} = 45^\circ$

d) $\widehat{EOF} = 50^\circ$

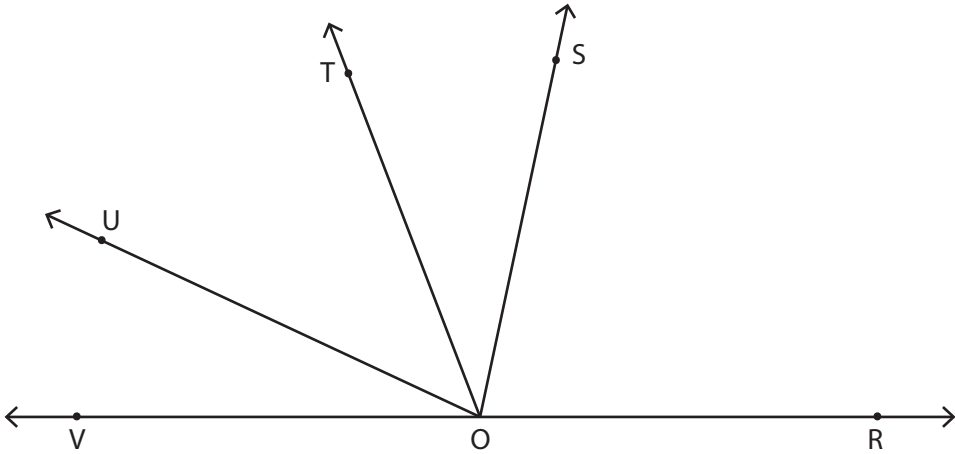
b) $\widehat{FOG} = 67^\circ$

e) $\widehat{DOF} = 95^\circ$

c) $\widehat{FOH} = 85^\circ$

f) $\widehat{EOG} = 117^\circ$

2)



a) $\widehat{SOT} = 33^\circ$

d) $\widehat{ROS} = 78^\circ$

b) $\widehat{TOV} = 69^\circ$

e) $\widehat{SOV} = 102^\circ$

c) $\widehat{ROT} = 111^\circ$

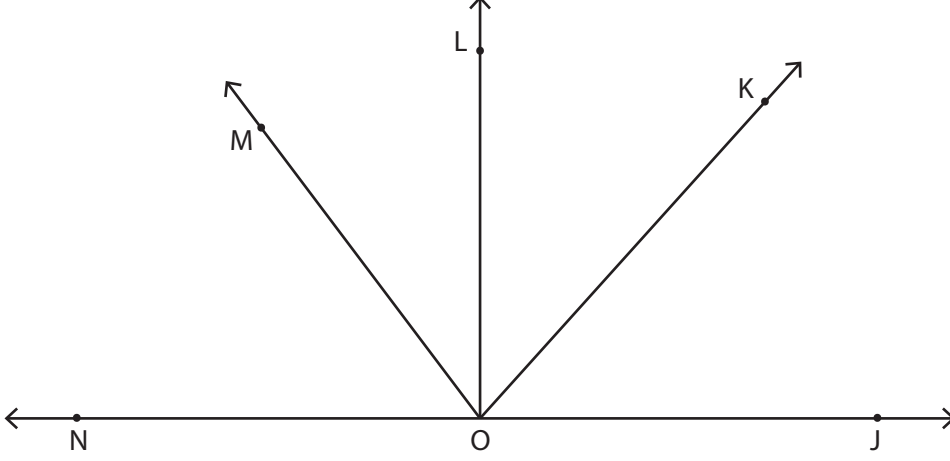
f) $\widehat{ROU} = 155^\circ$

Adı Soyadı :

Açılar - Çoklu Işıklar

Açıölçer kullanarak verilen açılar ölçüsünü bulun.

1)



a) $\widehat{JOM} = \underline{\hspace{2cm}}$

d) $\widehat{KOM} = \underline{\hspace{2cm}}$

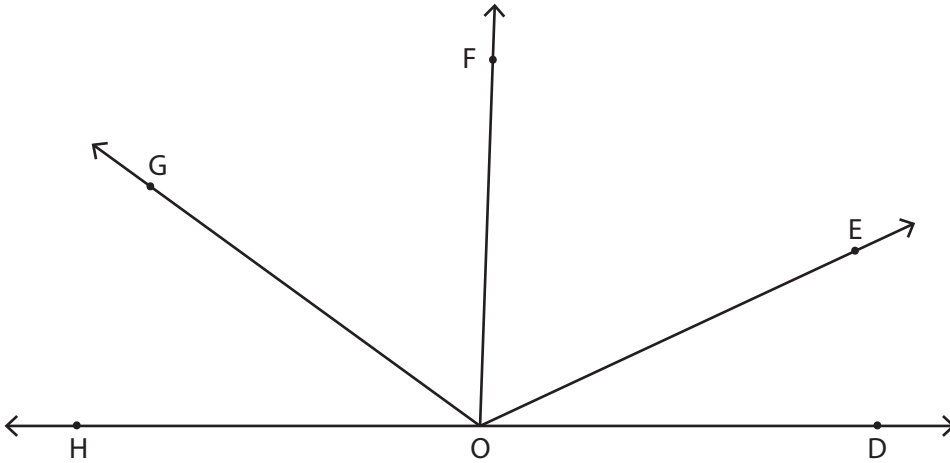
b) $\widehat{MON} = \underline{\hspace{2cm}}$

e) $\widehat{LON} = \underline{\hspace{2cm}}$

c) $\widehat{JOK} = \underline{\hspace{2cm}}$

f) $\widehat{KOL} = \underline{\hspace{2cm}}$

2)



a) $\widehat{EOF} = \underline{\hspace{2cm}}$

d) $\widehat{FOH} = \underline{\hspace{2cm}}$

b) $\widehat{DOG} = \underline{\hspace{2cm}}$

e) $\widehat{DOH} = \underline{\hspace{2cm}}$

c) $\widehat{DOE} = \underline{\hspace{2cm}}$

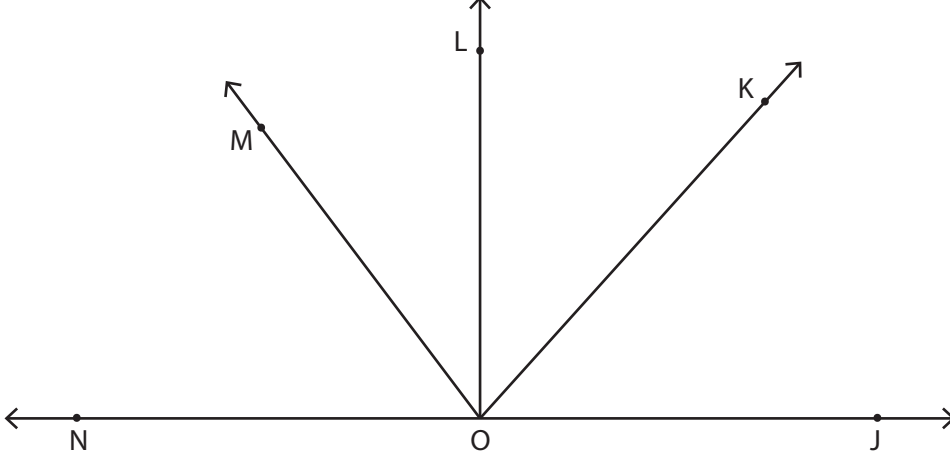
f) $\widehat{GOH} = \underline{\hspace{2cm}}$

Adı Soyadı :

Açılar - Çoklu Işınlar

Açıölçer kullanarak verilen açılar ölçüsünü bulun.

1)



a) $\widehat{JOM} = 127^\circ$

d) $\widehat{KOM} = 79^\circ$

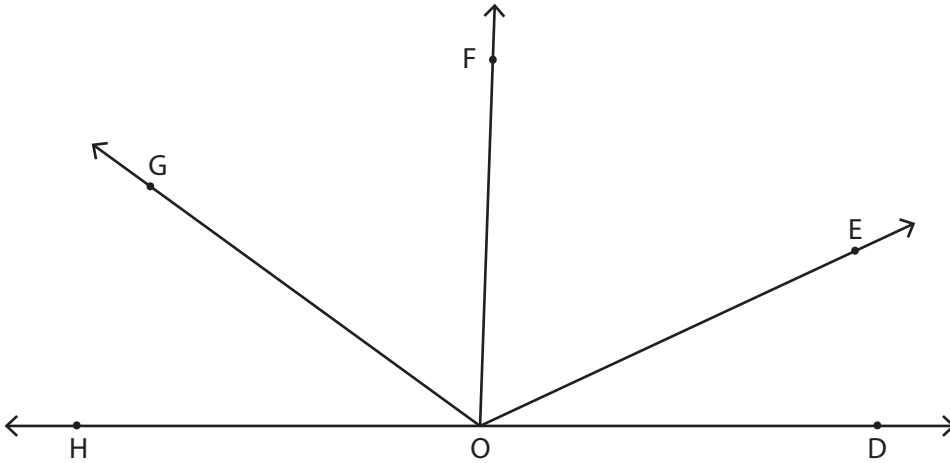
b) $\widehat{MON} = 53^\circ$

e) $\widehat{LON} = 90^\circ$

c) $\widehat{JOK} = 48^\circ$

f) $\widehat{KOL} = 42^\circ$

2)



a) $\widehat{EOF} = 63^\circ$

d) $\widehat{FOH} = 92^\circ$

b) $\widehat{DOG} = 144^\circ$

e) $\widehat{DOH} = 180^\circ$

c) $\widehat{DOE} = 25^\circ$

f) $\widehat{GOH} = 36^\circ$