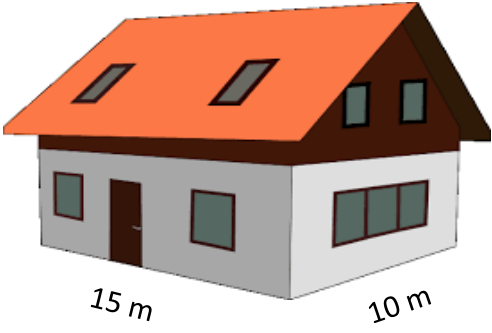


# ÇEVRE HESAPLAMA


Verilen şekillerin çevresini bulunuz.



Çevre = .....




Çevre = .....



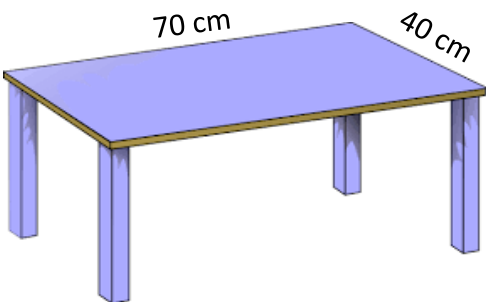
Çevre = .....



Çevre = .....



Çevre = .....



Çevre = .....



Çevre = .....

124 cm



77 cm

Çevre = .....

200 cm



145

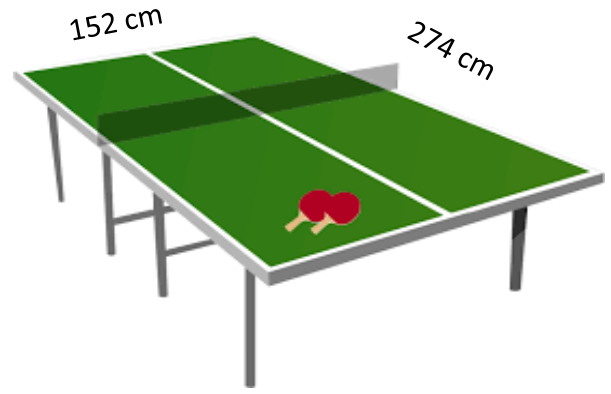
Çevre = .....



2 m

3 m

Çevre = .....

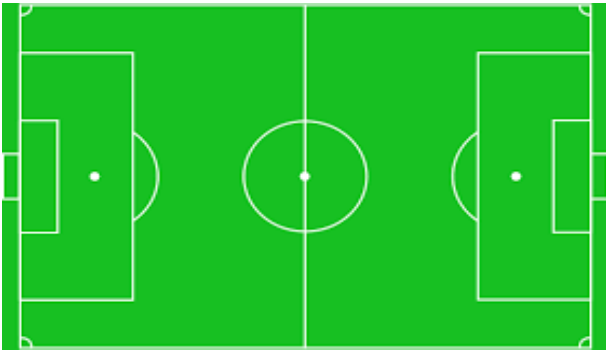


152 cm

274 cm

Çevre = .....

120 m



90 m

Çevre = .....



28 m

15 m

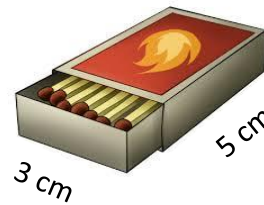
Çevre = .....



80 cm

60 cm

Çevre = .....



3 cm

5 cm

Çevre = .....

