

















Adı:.....
Soyadı:.....

2. SINIF MATEMATİK
"Zihinden Toplama İşlemleri"

ETKİNLİK
-2-

Aşağıdaki işlemleri örnekteki şekilde zihinden yapınız.

 $42 + 33 =$ $40+30=70$ $2+3=5$ $70+5=75$	 $28 + 13 =$	 $45 + 56 =$	 $66 + 43 =$
 $74 + 65 =$	 $88 + 32 =$	 $67 + 34 =$	 $55 + 45 =$
 $94 + 87 =$	 $91 + 75 =$	 $28 + 77 =$	 $69 + 39 =$
 $46 + 28 =$	 $61 + 46 =$	 $88 + 36 =$	 $18 + 24 =$