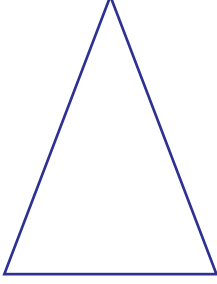


Adı Soyadı:


## Şekillerde Simetri

Şekillerin üzerine simetri çizgisini çiziniz.

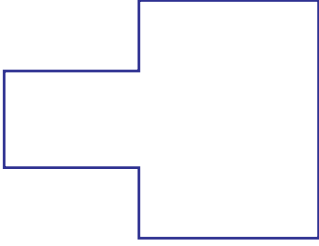
1)



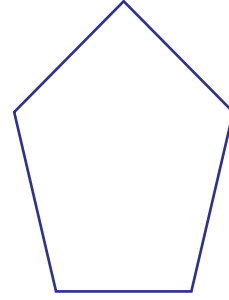
2)




3)



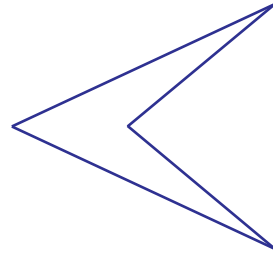
4)



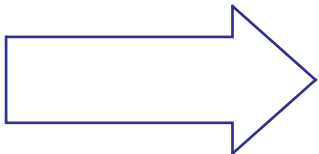
5)




6)



7)



8)

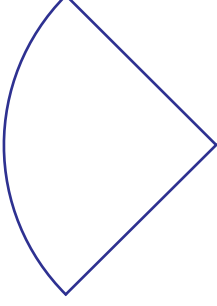


Adı Soyadı:

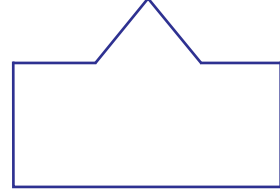
## Şekillerde Simetri

Şekillerin üzerine simetri çizgisini çiziniz.

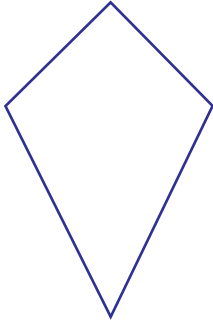
1)



2)



3)



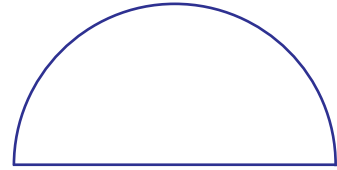
4)



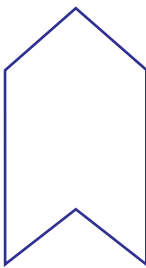
5)



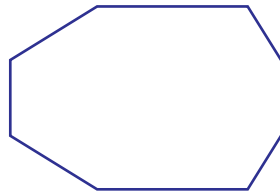
6)



7)



8)



Adı Soyadı:

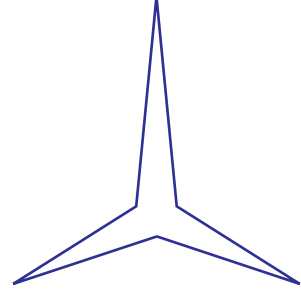
## Şekillerde Simetri

Şekillerin üzerine simetri çizgisini çiziniz.


1)



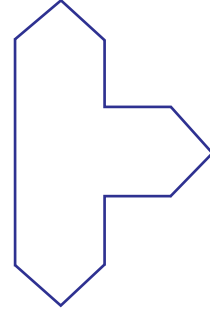
2)



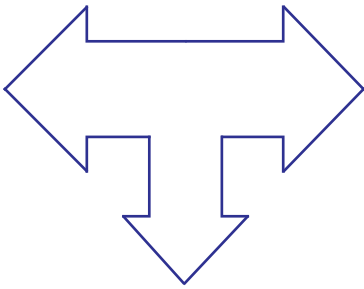
3)



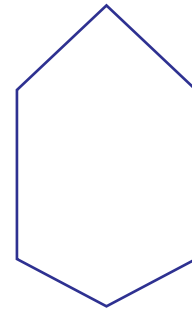
4)



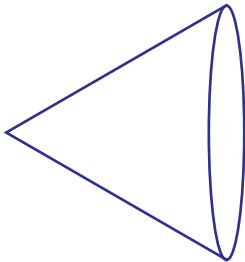
5)



6)



7)



8)

