


Onluk ve Birlik

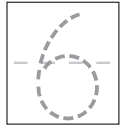
Aşağıdaki nesnelerle gösterilen sayıların kaç onluk ve kaç birlikten oluştuğunu örnekteki gibi yazalım.



Onluk




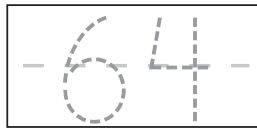
Birlik



onluk



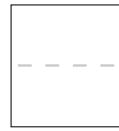
birlik



onluk



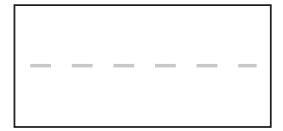
birlik



onluk



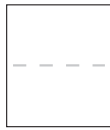
birlik



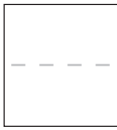
onluk




birlik



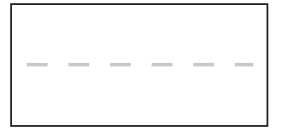
onluk



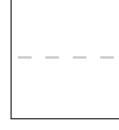
birlik



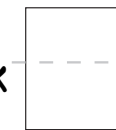
onluk




birlik



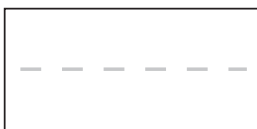
onluk



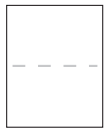
birlik




onluk




birlik



onluk



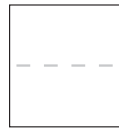
birlik



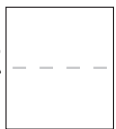
onluk



birlik



onluk



birlik

