

İLKOKUL1.com

1. SINIF

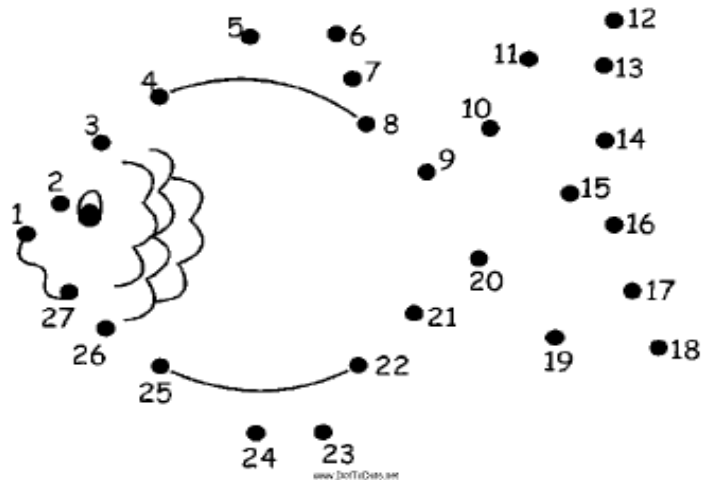
1. DÖNEM TATİL KİTABI

**2. DÖNEMDEN İTİBAREN FACEBOOK GRUBUMUZDA
GÜNLÜK ÖDEV PAYLAŞIMLARI YAPMAYA BAŞLAYACAĞIZ!**

Facebook Grubumuza Bekliyoruz! Aşağıdaki linli tıklayıp katılabilirsiniz.





<https://www.facebook.com/groups/240819559676490/?fref=ts>



HANIM KIZI

1 KIZI



Aşağıdaki soruları yanıtlayalım.

Adın nedir? →

Soyadın nedir? →

Annenin adı nedir? →

Babanın adı nedir? →

En sevdiğin yemek nedir? →

En sevdiğin renk hangisi? →

En sevdiğin arkadaşın kim? →


Hangi takımı tutuyorsun? →

Kardeşin var mı? →


Kaç yaşındasın? →

En sevdiğin ders hangisi? →


Kaç tane olduklarını aşağıdan işaretleyelim.



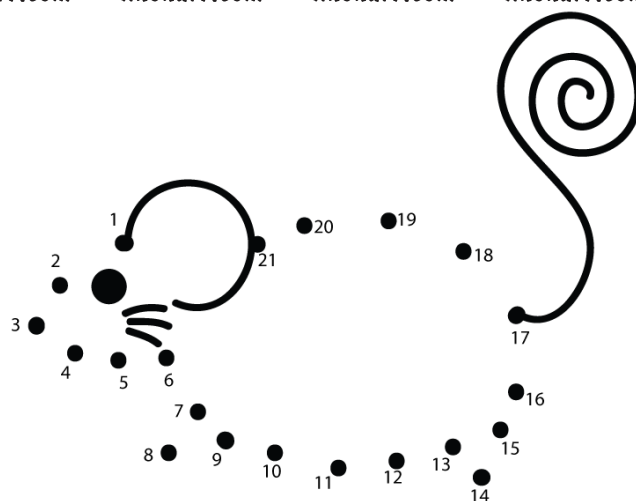
2 6 4



2 1 7



0 8 2



KAR YAĞDI

1. Kar ne renktir?

[illegible]

--

--

[illegible]

Aşağıdaki ayıcıkları sayalım.
Ayıcıkların sayısını doğru bir şekilde eşleştirelim.



Yedi

İki

Sekiz

Bir

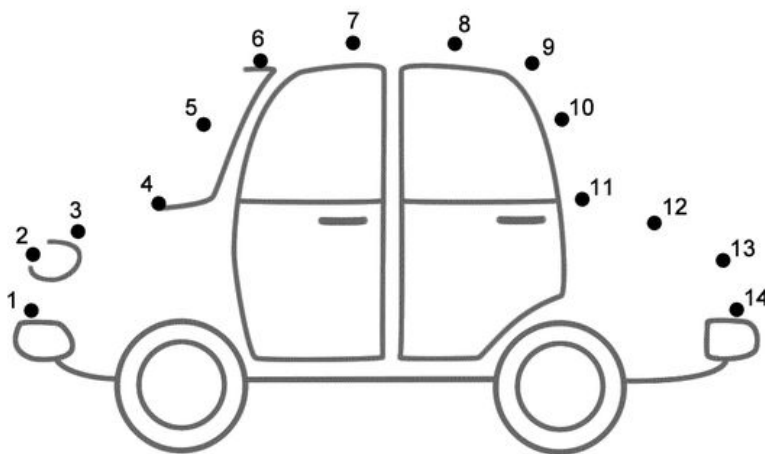
Dört

Altı

Üç

Beş

Dokuz



KOMSU, KOMSU

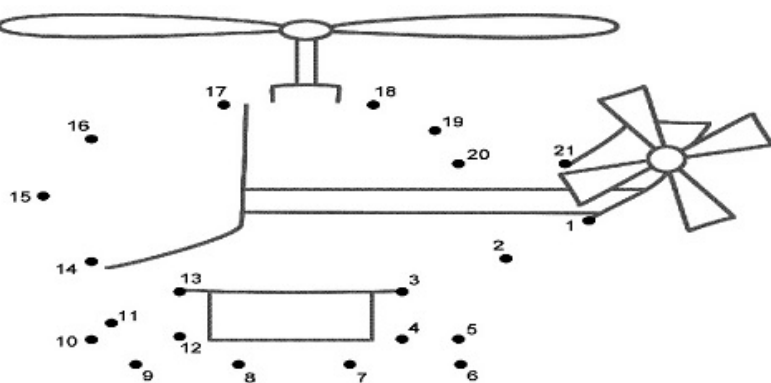
- Komşu, komşu!
- Hu, hu!
- Oğlun geldi mi?
- Geldi
- Ne getirdi?
- İnci, boncuk.
- Kime, kime?
- Sana, bana.
- Başka kime?
- Kara kediye
- Kara kedi nerede?
- Ağaca çıktı
- Ağaç nerede?
- Balta kesti
- Balta nerede?
- Suya düştü.
- Su nerede?
- İnek içti.
- İnek nerede?
- Dağa kaçtı.
- Dağ nerede?
- Yandı, bitti kül oldu.



Beşerli sayma tablomuzu doldurmamıza
yardım eder misin?

5				25
30				50
55				75
80				100





TATIL QLDU

Alya ilk defa karne aldı. Karnesini annesine ve babasına gösterdi. Annesi ve babası çok sevindi. Abisi Çınar da çok sevindi. Dedesi Alya'yı parka götürdü

1. Alya ne almış?

[illegible]

2. Alya karnesini kime gösterdi?

[illegible]

3. Alya'nın abisinin adı nedir?


[illegible]

4. Dedesi Alya'yı nereye götürmüştü?

--

Aşağıdaki işlemleri yapalım.

 +  =



Aşağıdaki şiiri okuyalım.
Ardından soruları yanıtlayalım.

KEDİM

Bir kedim var minicik.
Koşar fare peşinde,
Sabahtan başlar öğlene,
Oynar bütün gün benimle.

Yorulmak nedir bilmez.
Bana hiç fırsat vermez.
Yatma vakti geldiği zaman,
Benden önce yatağa girmez


1. Kedi, neyin peşinde koşuyormuş?

--	--

2. Kedi, öğlene kadar ne yapıyormuş?

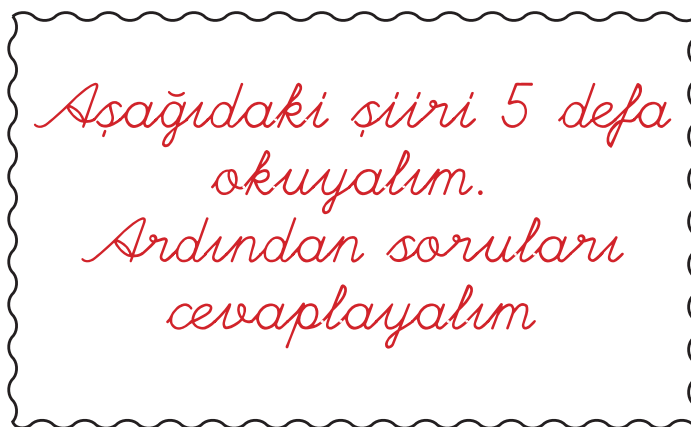
[illegible]

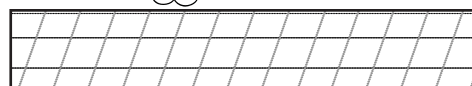
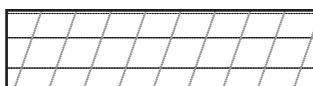
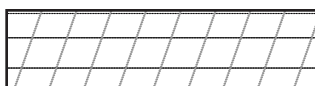
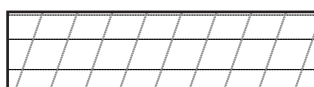

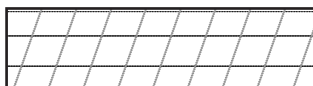
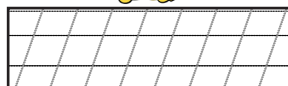
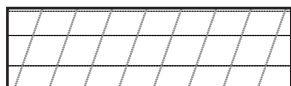
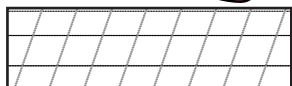
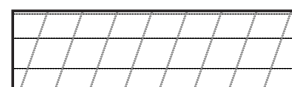
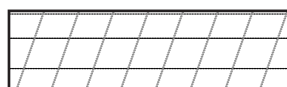
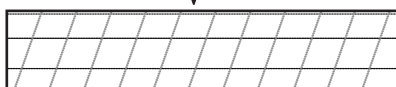
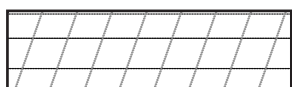
3. Kedi neden yatağa girmiyormuş?



Aşağıdaki boşlukları dolduralım

1	2		4		6		8		10
11		13		15		17		19	20
21	22		24		26		28		30
31		33		35		37		39	40
41	42		44		46		48		50
51		53		55		57		59	60
61	62		64		66		68		70
71		73		75		77		79	80
81	82		84		86		88		90
91		93		95		97		99	100





Aşağıdaki boşlukları dolduralım.
Sonrasında ikişerli sayalım

2		6		10		14			20
22	24		28		32			38	40
42		46		50		54			60
62	64		68		72		76		80
82		86		90		94		98	100

Aşağıdaki boşlukları dolduralım.
Sonrasında beşerli sayalım


5		15		25		35			50
55			70		80		90		100

Aşağıdaki boşlukları dolduralım.
Sonrasında onarlı sayalım

10		30		50		70			100
----	--	----	--	----	--	----	--	--	-----



Yakalarsam birakmam



C) Temiz olmak

Aşağıdaki toplama işlemlerini yapalım.
Cevap kadar yıldızı boyayalım.

$$1 + 1 =$$

$$2 + 1 =$$

$$2 + 2 =$$

$$3 + 1 =$$

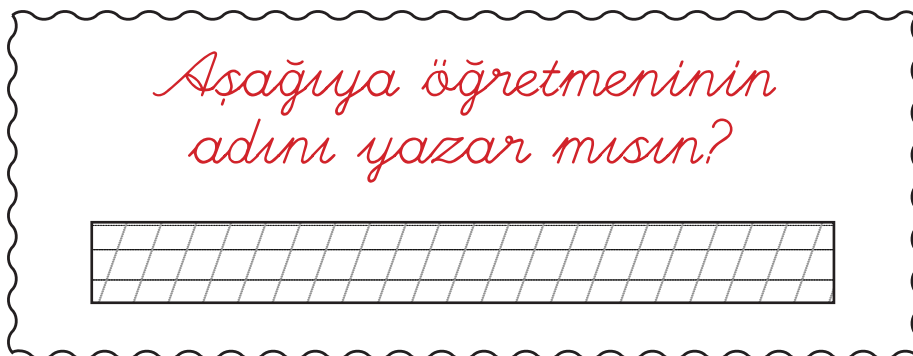
$$3 + 2 =$$

$$3 + 3 =$$

$$4 + 1 =$$



$$4 + 2 =$$

$$4 + 3 =$$




Tekerlemeyi takılmadan okuyana kadar tekrarlayalım.
Ardından defterimize el yazısıyla yazalım.

Cumartesi balım.



Tek tek tekerleme,
Üstü kaymak şekerleme.
Dereye düşme çok soğuk,
Söyle bana çarçabuk.

Maymunu muza ulařtırmamıza yardımcı olur musun?



Aşağıdaki onluk ve birlik tablolarını örnekteki gibi dolduralım.



onluk	birlik
1	2
On iki	

onluk	birlik
1	4
.....	

onluk	birlik
.....
On altı	

onluk	birlik
.....
On yedi	

onluk	birlik
1	9
.....	

onluk	birlik
1	5
.....	

onluk	birlik
.....
On bir	

onluk	birlik
1	0
.....	

onluk	birlik
1	3
.....	

onluk	birlik
1	2
.....	

onluk	birlik
1	8
.....	

onluk	birlik
.....
On Dokuz	

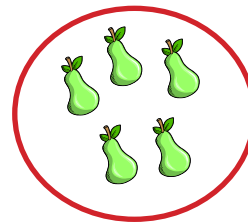
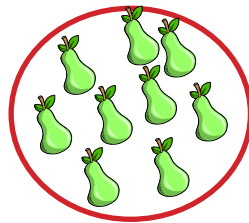
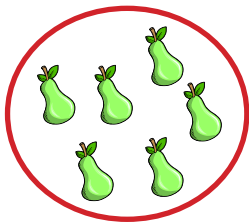
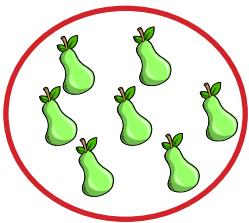
onluk	birlik
1	7
.....	

onluk	birlik
.....
On iki	



onluk	birlik
.....
On beş	

onluk	birlik
1	1
.....	





Nesne sayısı en çok olan grubu işaretleyelim.



Nesne sayısı en az olan grubu işaretleyelim.



Nesne sayısı eşit olanları eşleştirelim.



Nesne sayısı 10 dan az olan nesneleri boyayalım.



Renkler

2= mavi

3= sarı

4= kırmızı

5= siyah

6= mor

Toplama İşlemlerini Yapalım.

Ardından yan taraftaki renklere
göre resmimizi boyayalım.





Tamer, okul çantasını kontrol ettikten sonra evden çıktı. Apart-
manın bahçesinde arkadaşı Ufuk'u bekledi. Birlikte yola çıktılar.
Okula geç kalmamak için hızlı hızlı yürüdüler. Ders zili çalma-
dan sınıflarına girdiler.

--	--

--


--	--





















--

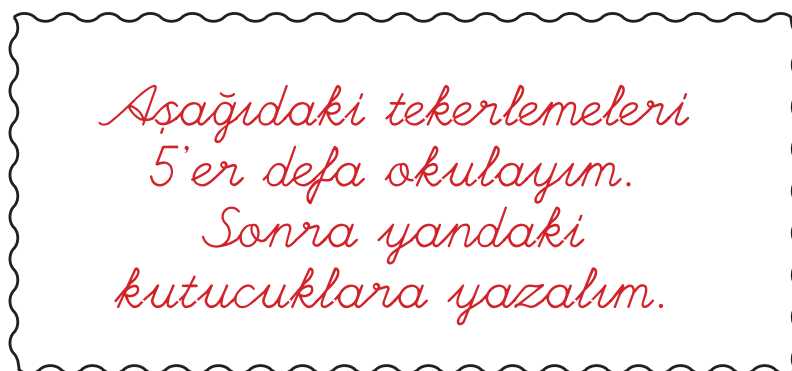
[illegible]

Aşağıdaki saatlerin kaç
gösterdiğini yandaki
örnekteki gibi yazalım.


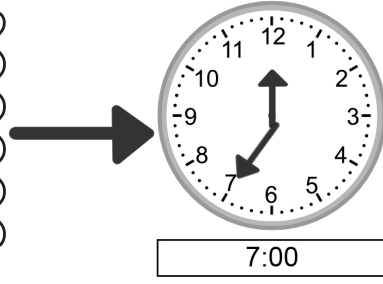


08:00




[illegible]


Aşağıdaki saatler kaç gösteriyorsa örnekteki gibi çizelim.




6:00




12:00




3:00




11:00




10:00




7:00




5:00




4:00




1:00




8:00




2:00




9:00




4:00




11:00




6:00




7:00




1:00



7:00



6:00



7:00

Aşağıdaki işlemleri yapalım.

[illegible]

İLKOKUL1.com