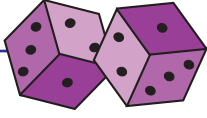
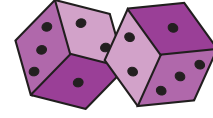


Adı Soyadı :



Zar Toplama



Zarlardaki noktaları sayın ve onları toplayın.

1)  +  +  =

2)  +  +  =

3)  +  +  =

4)  +  +  =

5)  +  +  =

6)  +  +  =

7)  +  +  =

8)  +  +  =

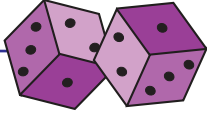
9)  +  +  =

10)  +  +  =

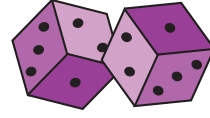
11)  +  +  =

12)  +  +  =

Adı Soyadı :



Zar Toplama



Zarlardaki noktaları sayın ve onları toplayın.

1)  +  +  =

2)  +  +  =

3)  +  +  =

4)  +  +  =

5)  +  +  =

6)  +  +  =

7)  +  +  =

8)  +  +  =

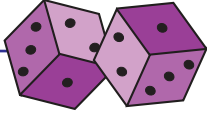
9)  +  +  =

10)  +  +  =

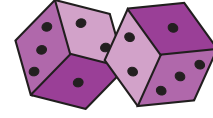
11)  +  +  =

12)  +  +  =

Adı Soyadı :



Zar Toplama



Zarlardaki noktaları sayın ve onları toplayın.

1)  +  +  =

2)  +  +  =

3)  +  +  =

4)  +  +  =

5)  +  +  =

6)  +  +  =

7)  +  +  =

8)  +  +  =

9)  +  +  =

10)  +  +  =

11)  +  +  =

12)  +  +  =