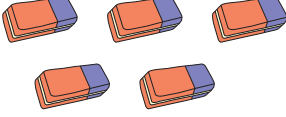


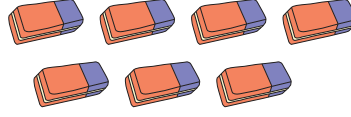
# TOPLAMA İŞLEMİ

Aşağıda verilen nesnelerin sayılarını altlarına yazarak toplayınız.

1)



+



+

=

\_\_\_\_\_

\_\_\_\_\_

\_\_\_\_\_

2)



+



+

=

\_\_\_\_\_


\_\_\_\_\_

\_\_\_\_\_

3)



+



+


=

\_\_\_\_\_

\_\_\_\_\_

\_\_\_\_\_

4)



+



+

=

\_\_\_\_\_

\_\_\_\_\_

\_\_\_\_\_

5)



+



+

=

\_\_\_\_\_

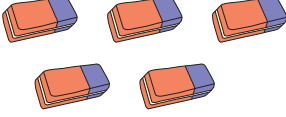
\_\_\_\_\_

\_\_\_\_\_

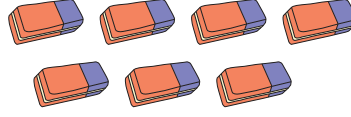
# TOPLAMA İŞLEMİ

Aşağıda verilen nesnelerin sayılarını altlarına yazarak toplayınız.

1)



+

5

+

7

=

12

2)



+

8

+

9


=

17

3)



+

6


+

14

=

20

4)



+

7

+

2

=

9

5)



+

1

+

4


=

5


# TOPLAMA İŞLEMİ

Aşağıda verilen nesnelerin sayılarını altlarına yazarak toplayınız.

1)



+



+

=

\_\_\_\_\_


\_\_\_\_\_

\_\_\_\_\_

2)



+



+


=

\_\_\_\_\_


\_\_\_\_\_

\_\_\_\_\_

3)



+



+

=

\_\_\_\_\_

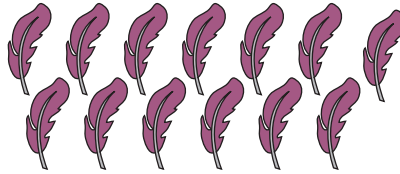
\_\_\_\_\_

\_\_\_\_\_

4)



+



+


=

\_\_\_\_\_


\_\_\_\_\_

\_\_\_\_\_

5)



+



+

=

\_\_\_\_\_


\_\_\_\_\_

\_\_\_\_\_


# TOPLAMA İŞLEMİ

Aşağıda verilen nesnelerin sayılarını altlarına yazarak toplayınız.

1)



+

4


+

4


=

8

2)



+

7


+

6


=

13

3)



+

11

+

8

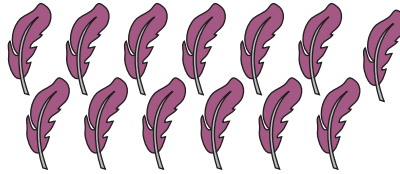
=

19

4)



+

5


+

13


=

18

5)



+

4

+

6



=



10



Adı Soyadı:


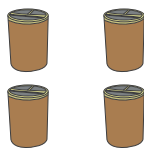
## TOPLAMA İŞLEMİ



Aşağıda verilen nesnelerin sayılarını altlarına yazarak toplayınız.

1)  +   
\_\_\_\_\_ + \_\_\_\_\_ = \_\_\_\_\_

2)  +   
\_\_\_\_\_ + \_\_\_\_\_ = \_\_\_\_\_



3)  +   
\_\_\_\_\_ + \_\_\_\_\_ = \_\_\_\_\_

4)  +   
\_\_\_\_\_ + \_\_\_\_\_ = \_\_\_\_\_



5)  +   
\_\_\_\_\_ + \_\_\_\_\_ = \_\_\_\_\_

# TOPLAMA İŞLEMİ



Aşağıda verilen nesnelerin sayılarını altlarına yazarak toplayınız.

1)  +  =


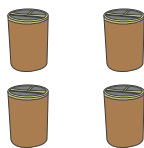
12 + 8 = 20

2)  +  =



3 + 13 = 16

3)  +  =

9 + 5 = 14

4)  +  =

7 + 4 = 11

5)  +  =

5 + 10 = 15