

Adı Soyadı :



Her sorunda eksik olan terimi bulunuz.

$$\begin{array}{r} 1) \quad 5 \\ + \quad \square \\ \hline 11 \end{array}$$

$$\begin{array}{r} 2) \quad \square \\ + \quad 7 \\ \hline 9 \end{array}$$

$$\begin{array}{r} 3) \quad 8 \\ + \quad \square \\ \hline 12 \end{array}$$

$$\begin{array}{r} 4) \quad \square \\ + \quad 5 \\ \hline 6 \end{array}$$

$$\begin{array}{r} 5) \quad \square \\ + \quad 2 \\ \hline 5 \end{array}$$

$$\begin{array}{r} 6) \quad 6 \\ + \quad \square \\ \hline 14 \end{array}$$

$$\begin{array}{r} 7) \quad 4 \\ + \quad \square \\ \hline 7 \end{array}$$

$$\begin{array}{r} 8) \quad \square \\ + \quad 9 \\ \hline 18 \end{array}$$

$$\begin{array}{r} 9) \quad 7 \\ + \quad \square \\ \hline 13 \end{array}$$

$$\begin{array}{r} 10) \quad \square \\ + \quad 5 \\ \hline 8 \end{array}$$

$$\begin{array}{r} 11) \quad 9 \\ + \quad \square \\ \hline 10 \end{array}$$

$$\begin{array}{r} 12) \quad \square \\ + \quad 4 \\ \hline 6 \end{array}$$

$$\begin{array}{r} 13) \quad \square \\ + \quad 7 \\ \hline 15 \end{array}$$

$$\begin{array}{r} 14) \quad \square \\ + \quad 0 \\ \hline 5 \end{array}$$

$$\begin{array}{r} 15) \quad 5 \\ + \quad \square \\ \hline 7 \end{array}$$

$$\begin{array}{r} 16) \quad \square \\ + \quad 9 \\ \hline 16 \end{array}$$


$$\begin{array}{r} 17) \quad 1 \\ + \quad \square \\ \hline 3 \end{array}$$

$$\begin{array}{r} 18) \quad \square \\ + \quad 6 \\ \hline 10 \end{array}$$


$$\begin{array}{r} 19) \quad 8 \\ + \quad \square \\ \hline 11 \end{array}$$

$$\begin{array}{r} 20) \quad \square \\ + \quad 5 \\ \hline 10 \end{array}$$

Adı Soyadı :



# TOPLAMA



Her sorunda eksik olan terimi bulunuz.

$$\begin{array}{r} 1) \quad \square \\ + \quad 8 \\ \hline 17 \end{array}$$

$$\begin{array}{r} 2) \quad 1 \\ + \quad \square \\ \hline 7 \end{array}$$

$$\begin{array}{r} 3) \quad \square \\ + \quad 5 \\ \hline 9 \end{array}$$

$$\begin{array}{r} 4) \quad 7 \\ + \quad \square \\ \hline 10 \end{array}$$

$$\begin{array}{r} 5) \quad 6 \\ + \quad \square \\ \hline 12 \end{array}$$

$$\begin{array}{r} 6) \quad \square \\ + \quad 4 \\ \hline 11 \end{array}$$

$$\begin{array}{r} 7) \quad 8 \\ + \quad \square \\ \hline 8 \end{array}$$

$$\begin{array}{r} 8) \quad \square \\ + \quad 3 \\ \hline 5 \end{array}$$

$$\begin{array}{r} 9) \quad \square \\ + \quad 1 \\ \hline 10 \end{array}$$

$$\begin{array}{r} 10) \quad \square \\ + \quad 8 \\ \hline 12 \end{array}$$

$$\begin{array}{r} 11) \quad 6 \\ + \quad \square \\ \hline 9 \end{array}$$

$$\begin{array}{r} 12) \quad 7 \\ + \quad \square \\ \hline 15 \end{array}$$

$$\begin{array}{r} 13) \quad 0 \\ + \quad \square \\ \hline 9 \end{array}$$

$$\begin{array}{r} 14) \quad 8 \\ + \quad \square \\ \hline 13 \end{array}$$

$$\begin{array}{r} 15) \quad \square \\ + \quad 3 \\ \hline 6 \end{array}$$

$$\begin{array}{r} 16) \quad 3 \\ + \quad \square \\ \hline 7 \end{array}$$

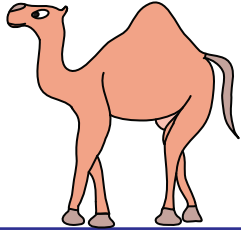
$$\begin{array}{r} 17) \quad \square \\ + \quad 4 \\ \hline 10 \end{array}$$

$$\begin{array}{r} 18) \quad 2 \\ + \quad \square \\ \hline 11 \end{array}$$


$$\begin{array}{r} 19) \quad \square \\ + \quad 5 \\ \hline 14 \end{array}$$

$$\begin{array}{r} 20) \quad 4 \\ + \quad \square \\ \hline 4 \end{array}$$

Adı Soyadı :



# TOPLAMA



Her sorunda eksik olan terimi bulunuz.

$$\begin{array}{r} 1) \quad 5 \\ + \quad \square \\ \hline 6 \end{array}$$

$$\begin{array}{r} 2) \quad \square \\ + \quad 9 \\ \hline 12 \end{array}$$

$$\begin{array}{r} 3) \quad 6 \\ + \quad \square \\ \hline 8 \end{array}$$

$$\begin{array}{r} 4) \quad \square \\ + \quad 7 \\ \hline 11 \end{array}$$

$$\begin{array}{r} 5) \quad \square \\ + \quad 3 \\ \hline 5 \end{array}$$

$$\begin{array}{r} 6) \quad 8 \\ + \quad \square \\ \hline 16 \end{array}$$

$$\begin{array}{r} 7) \quad \square \\ + \quad 1 \\ \hline 10 \end{array}$$

$$\begin{array}{r} 8) \quad 3 \\ + \quad \square \\ \hline 9 \end{array}$$

$$\begin{array}{r} 9) \quad 1 \\ + \quad \square \\ \hline 8 \end{array}$$

$$\begin{array}{r} 10) \quad 5 \\ + \quad \square \\ \hline 14 \end{array}$$

$$\begin{array}{r} 11) \quad \square \\ + \quad 0 \\ \hline 7 \end{array}$$

$$\begin{array}{r} 12) \quad \square \\ + \quad 4 \\ \hline 13 \end{array}$$

$$\begin{array}{r} 13) \quad \square \\ + \quad 5 \\ \hline 8 \end{array}$$

$$\begin{array}{r} 14) \quad \square \\ + \quad 1 \\ \hline 3 \end{array}$$

$$\begin{array}{r} 15) \quad 6 \\ + \quad \square \\ \hline 15 \end{array}$$

$$\begin{array}{r} 16) \quad \square \\ + \quad 7 \\ \hline 10 \end{array}$$

$$\begin{array}{r} 17) \quad 4 \\ + \quad \square \\ \hline 6 \end{array}$$

$$\begin{array}{r} 18) \quad \square \\ + \quad 7 \\ \hline 14 \end{array}$$

$$\begin{array}{r} 19) \quad 8 \\ + \quad \square \\ \hline 11 \end{array}$$

$$\begin{array}{r} 20) \quad \square \\ + \quad 4 \\ \hline 9 \end{array}$$