

20 İÇİNDE TOPLAMA İŞLEMİ

20 İÇİNDE TOPLAMA İŞLEMİ

A

Aşağıdaki açıklamayı güzelce okuyalım. Açıklamaya uygun şekilde işlemlerimizi yapalım.

$$8 + 5 = \boxed{\dots\dots\dots}$$

Büyük sayının üstüne diğer sayı kadar sayalım.

8 → 9 10 11 12 13

$$9 + 7 = \boxed{\dots\dots\dots}$$

9 →
... ..

$$8 + 6 = \boxed{\dots\dots\dots}$$

8 →

$$10 + 8 = \boxed{\dots\dots\dots}$$

10 →
... ..

B

Aşağıdaki işlemlerini zihinden yapınız. Eşleştiriniz.

$$6+4$$

18

$$8+3$$

18

$$8+6$$

14

$$9+5$$

15

$$7+7$$

14

$$8+5$$

9

$$8+7$$

14

$$9+6$$

11

$$9+0$$

11

$$6+5$$

13

$$8+5$$

10

$$10+8$$

18



20 İÇİNDE TOPLAMA İŞLEMİ

20 İÇİNDE TOPLAMA İŞLEMİ

A

Aşağıdaki toplama işlemlerini yapalım.

$$2 + 0 = \boxed{\dots\dots\dots} \quad 3 + 1 = \boxed{\dots\dots\dots}$$

$$2 + 1 = \boxed{\dots\dots\dots} \quad 3 + 2 = \boxed{\dots\dots\dots}$$

$$2 + 2 = \boxed{\dots\dots\dots} \quad 3 + 3 = \boxed{\dots\dots\dots}$$

$$4 + 4 = \boxed{\dots\dots\dots} \quad 5 + 5 = \boxed{\dots\dots\dots}$$

$$4 + 3 = \boxed{\dots\dots\dots} \quad 5 + 4 = \boxed{\dots\dots\dots}$$

$$4 + 2 = \boxed{\dots\dots\dots} \quad 5 + 3 = \boxed{\dots\dots\dots}$$

$$6 + 6 = \boxed{\dots\dots\dots} \quad 7 + 6 = \boxed{\dots\dots\dots}$$

$$6 + 5 = \boxed{\dots\dots\dots} \quad 7 + 5 = \boxed{\dots\dots\dots}$$

$$6 + 4 = \boxed{\dots\dots\dots} \quad 7 + 4 = \boxed{\dots\dots\dots}$$

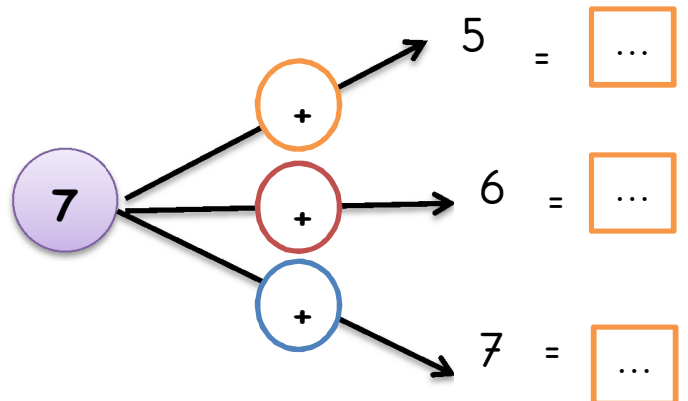
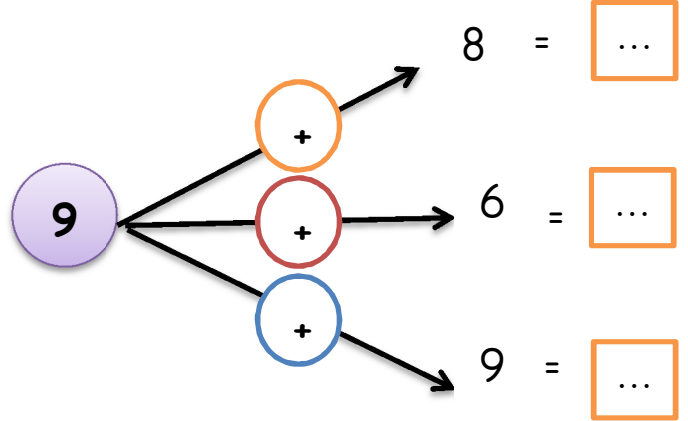
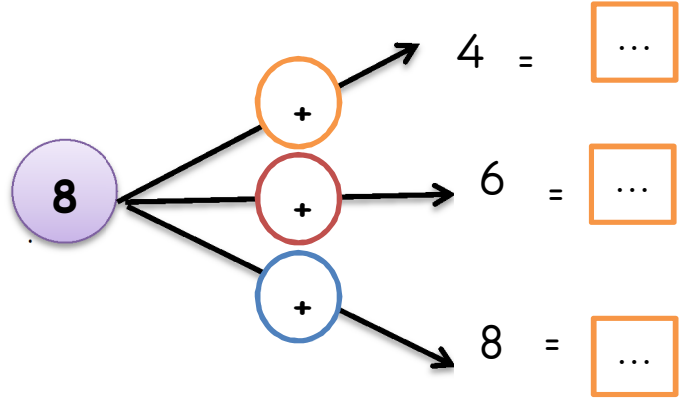
$$8 + 6 = \boxed{\dots\dots\dots} \quad 9 + 6 = \boxed{\dots\dots\dots}$$

$$8 + 5 = \boxed{\dots\dots\dots} \quad 9 + 7 = \boxed{\dots\dots\dots}$$

$$8 + 7 = \boxed{\dots\dots\dots} \quad 9 + 8 = \boxed{\dots\dots\dots}$$

B

Aşağıdaki toplama işlemlerini yapalım.



MATEMATİK 20 İÇİNDE TOPLAMA İŞLEMİ

A

Aşağıdaki açıklamayı güzelce okuyalım. Açıklamaya uygun şekilde işlemlerimizi yapalım.

5	6	8
4	3	5
+ 3	+ 4	+ 2
.....

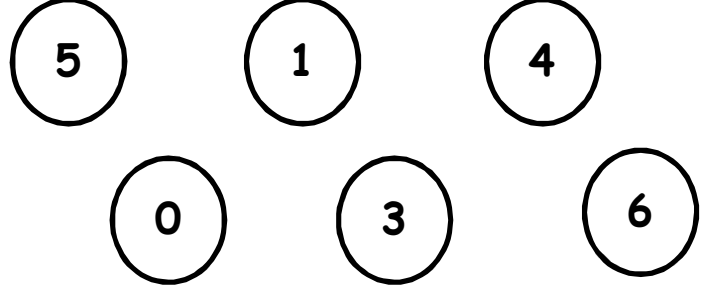
6	7	9
1	6	5
+ 7	+ 5	+ 4
.....

9	6	8
6	6	5
+ 3	+ 6	+ 2
.....

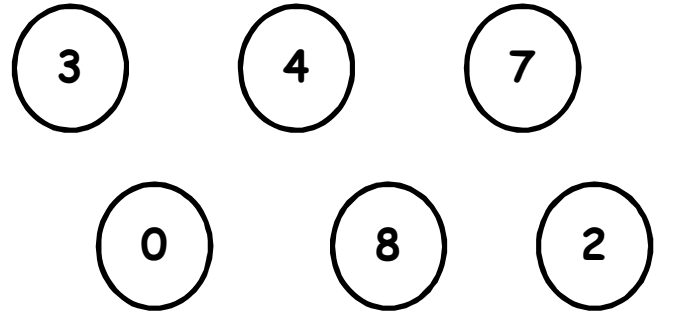
7	5	8
4	3	7
+ 4	+ 4	+ 3
.....

B

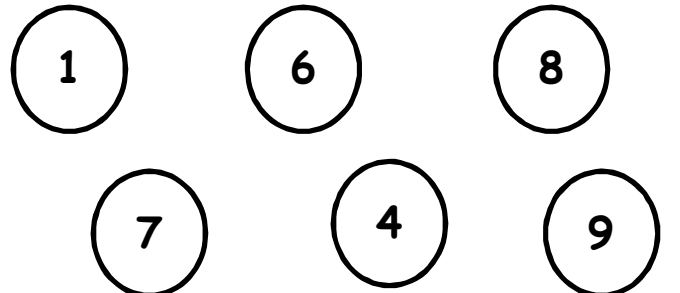
1. Aşağıdaki sayılardan toplamaları "8" olan iki sayıyı sarıya boyalım.



2. Aşağıdaki sayılardan toplamaları "9" olan iki sayıyı pembeye boyalım.



3. Aşağıdaki sayılardan toplamaları "12" olan iki sayıyı maviye boyalım.



20 İÇİNDE TOPLAMA İŞLEMİ

C

Aşağıdaki açıklamayı güzelce okuyalım. Açıklamaya uygun şekilde işlemlerimizi yapalım.

8	7	6
4	3	5
+ 2	+ 4	+ 0
.....

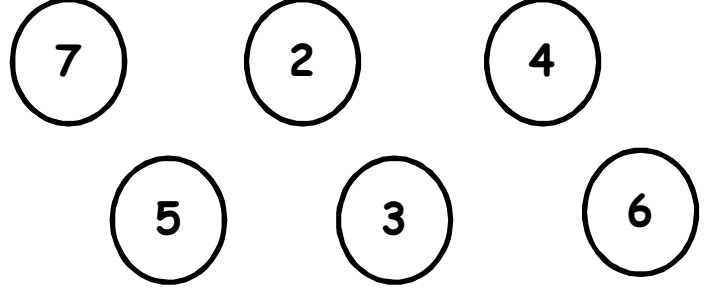
9	8	6
4	5	4
+ 7	+ 5	+ 4
.....

9	7	7
6	4	5
+ 3	+ 6	+ 2
.....

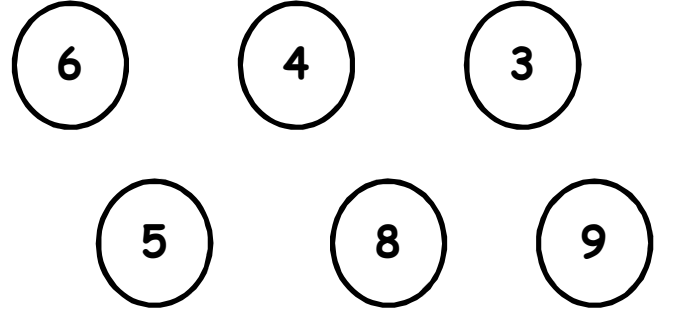
8	7	6
5	3	7
+ 4	+ 4	+ 5
.....

D

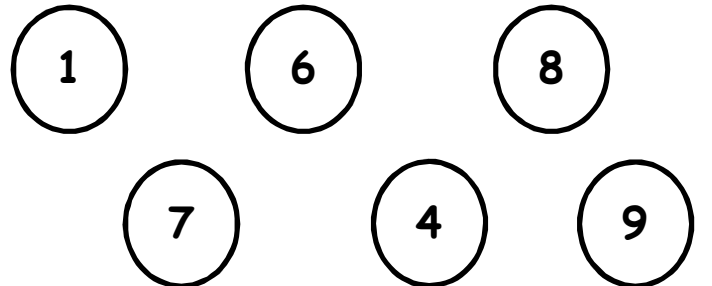
4. Aşağıdaki sayılardan toplamları "13" olan iki sayıyı pembeye boyalım.



5. Aşağıdaki sayılardan toplamları "15" olan iki sayıyı kırmızıya boyalım.



6. Aşağıdaki sayılardan toplamları "11" olan iki sayıyı yeşile boyalım.



A

Aşağıdaki toplama işlemlerinde verilmeyen sayıları bulup yazalım.

$$6 + \boxed{\dots\dots} = 9$$

$$+ \quad 5$$

$$\boxed{\dots\dots} + 4 = \boxed{\dots\dots}$$

$$8 + \boxed{\dots\dots} = 10$$

$$+ \quad 6$$

$$\boxed{\dots\dots} + 6 = \boxed{\dots\dots}$$

$$5 + \boxed{\dots\dots} = 11$$

$$+ \quad 3$$

$$\boxed{\dots\dots} + 8 = \boxed{\dots\dots}$$

$$9 + \boxed{\dots\dots} = 13$$

$$+ \quad 7$$

$$\boxed{\dots\dots} + 4 = \boxed{\dots\dots}$$

B

Aşağıdaki toplama işlemlerini zihinden yapalım .
Toplamları 20 olanları boyayalım .

$$9 + 6 + 4 = \dots\dots\dots$$

$$7 + 5 + 6 = \dots\dots\dots$$

$$10 + 6 + 4 = \dots\dots\dots$$

$$13 + 5 + 2 = \dots\dots\dots$$


























C

Sınıfımızda 14 kişiydik.
Sınıfımıza 5 kişi daha geldi.
Sınıfta kaç kişi olduk?

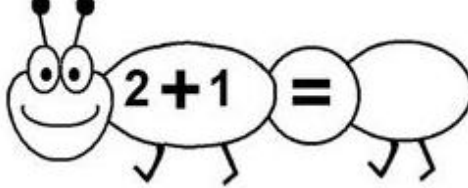
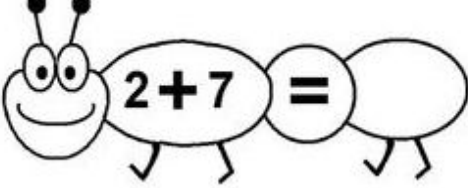
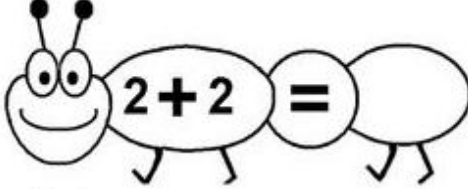
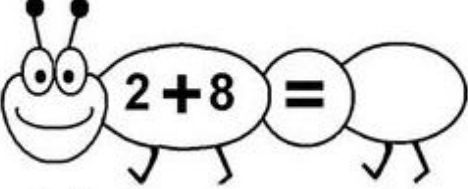
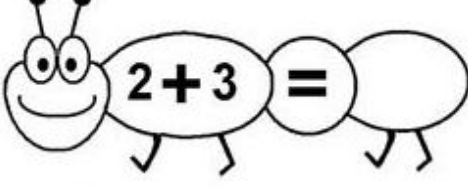
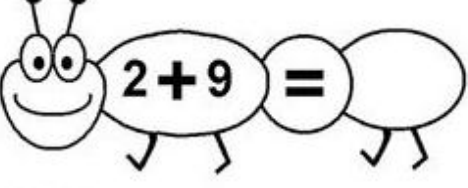
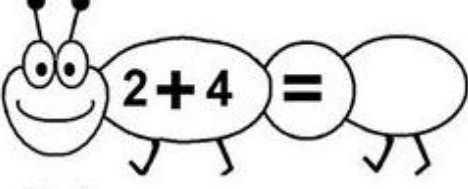
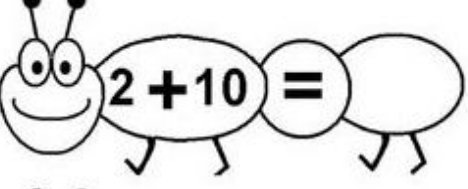
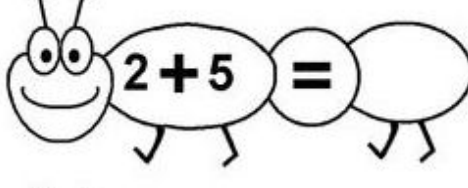
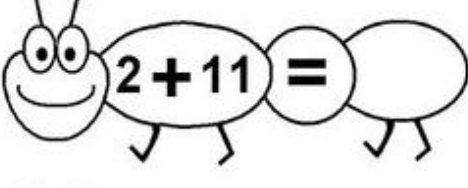

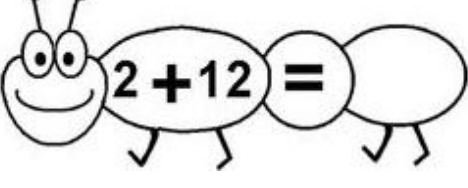
D

Sınıfımızda 6 erkek var.
Kızlar erkeklerden 3 fazla olduğuna göre sınıfımızda toplam kaç kişi vardır?

A-Toplamları bulalım gösterilen sayı kadar olanları boyayalım

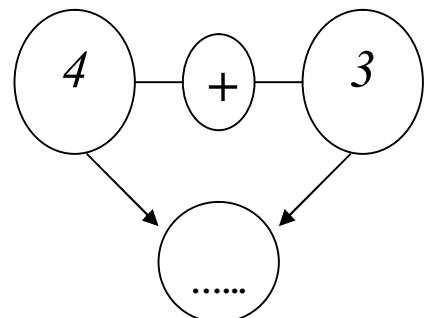
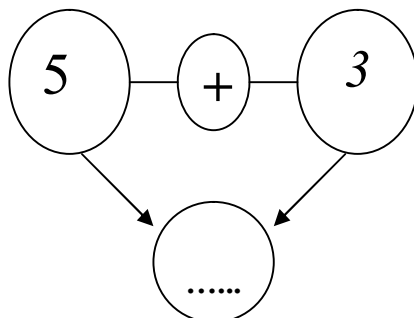
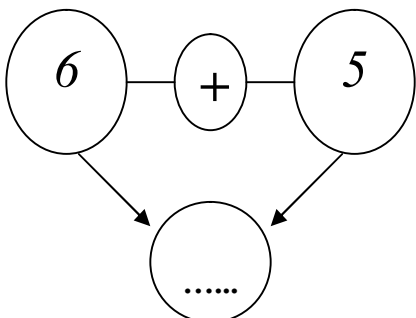
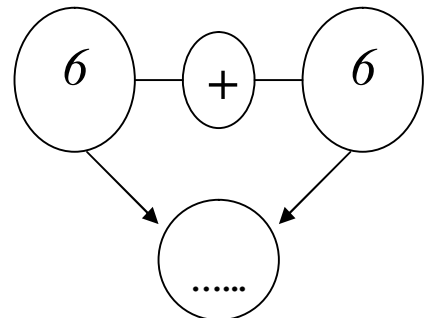
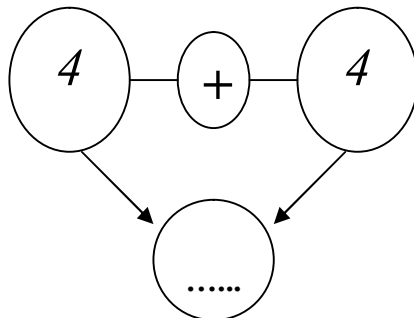
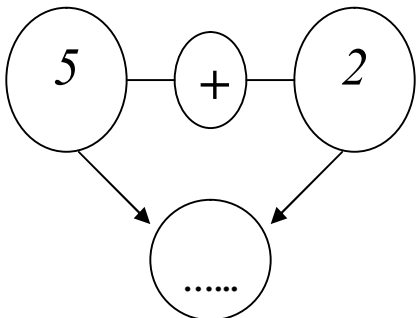
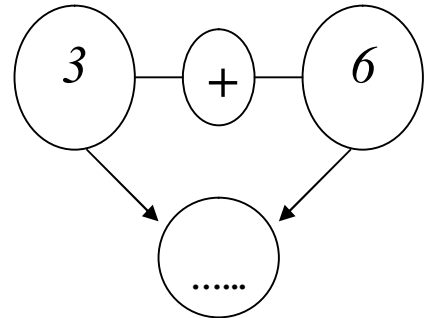
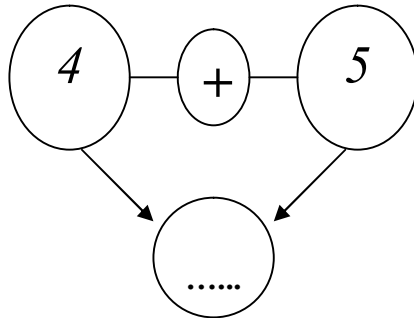
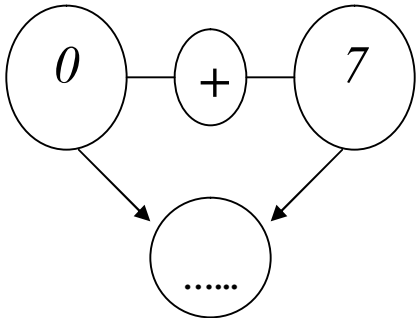
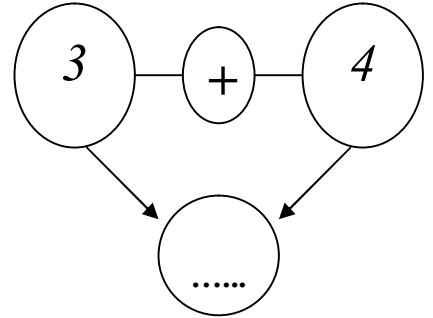
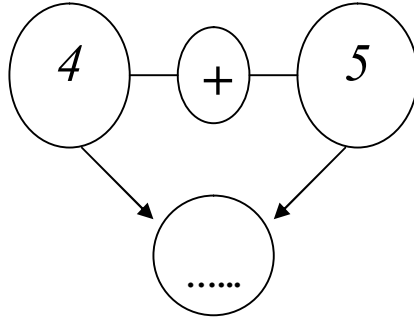
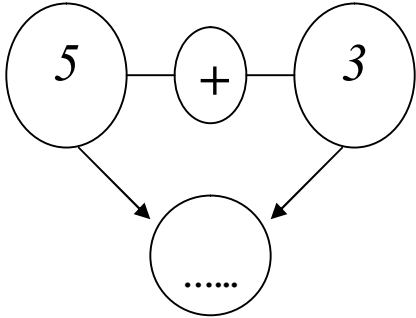
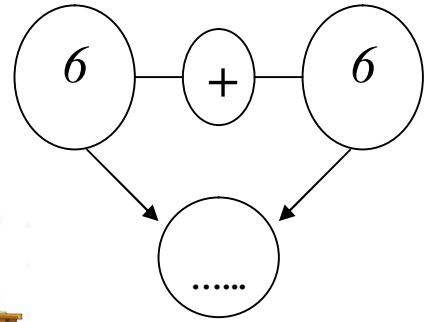
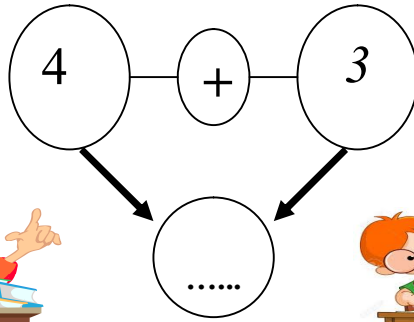
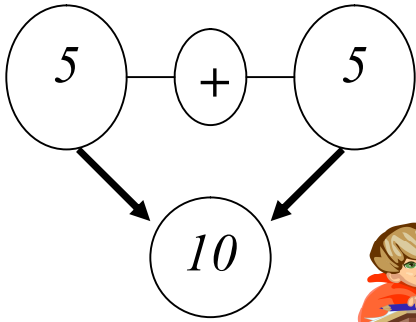
B-Aşağıdaki toplama işlemlerini yapalım.

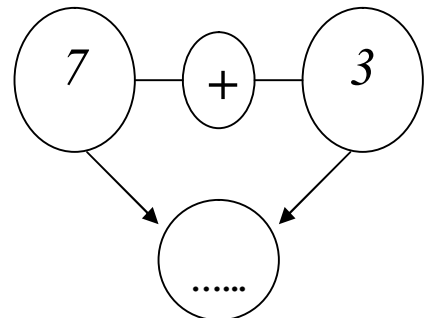
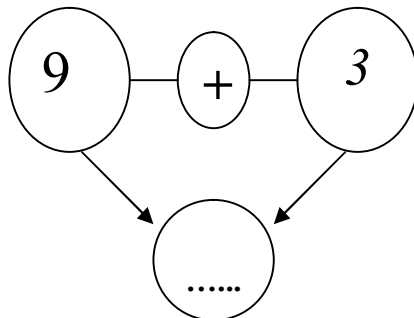
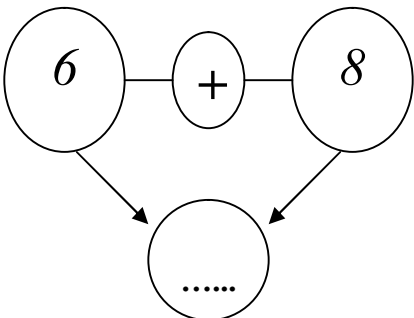
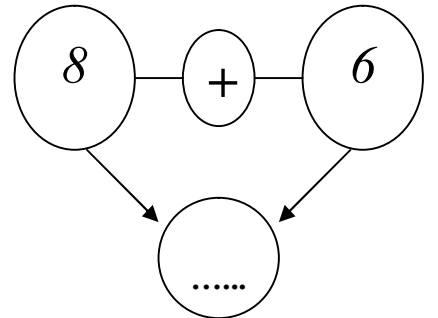
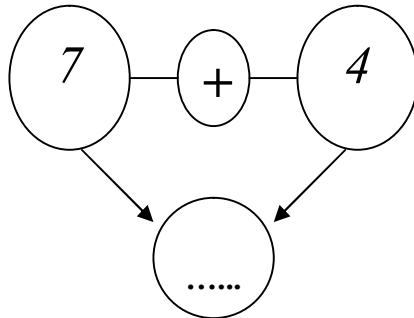
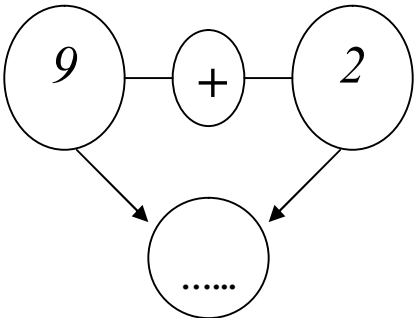
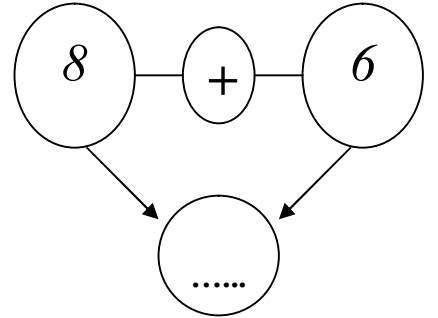
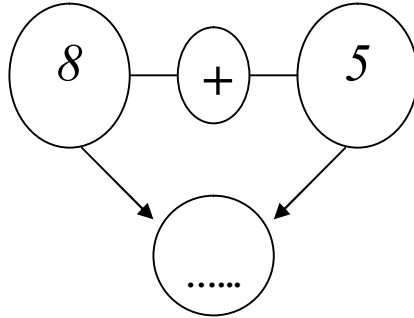
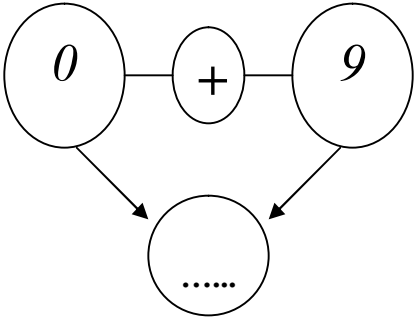
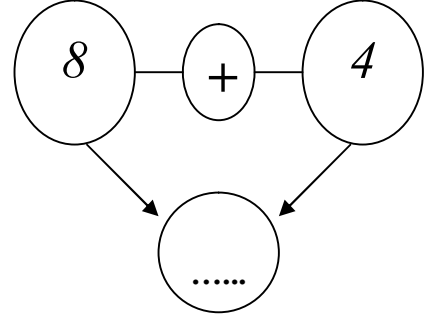
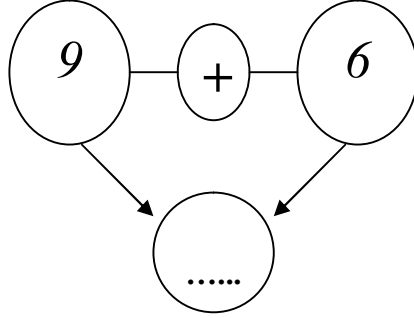
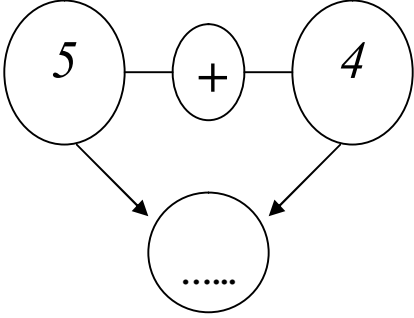
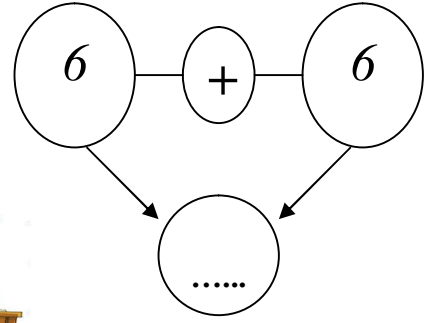
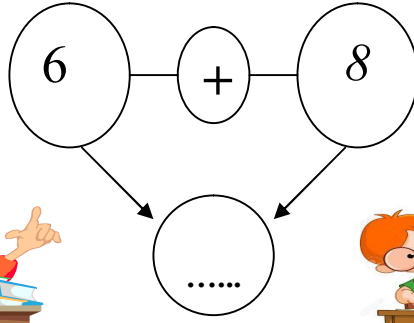
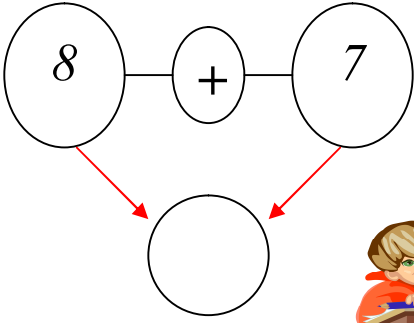
Günün sözü: Oturarak başarıya ulaşan tek canlı tavuktur.



MATEMATİK TOPLAMA İŞLEMİ ETKİNLİKLERİ



MATEMATİK TOPLAMA İŞLEMİ ETKİNLİKLERİ



MATEMATİK TOPLAMA İŞLEMİ ETKİNLİKLERİ

