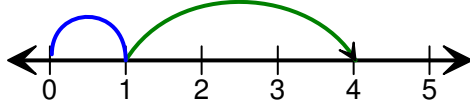


Adı Soyadı:

TOPLAMA

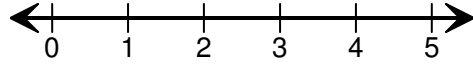
Verilen işlemi sayı doğrusunda gösteriniz.

1)



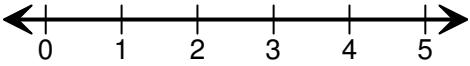
$$1 + 3 = \boxed{4}$$

2)



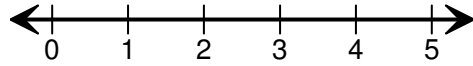
$$2 + 2 = \boxed{}$$

3)



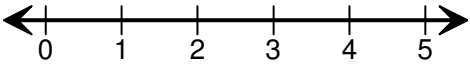
$$3 + 2 = \boxed{}$$

4)



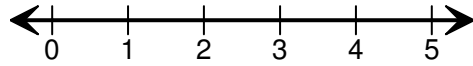
$$1 + 1 = \boxed{}$$

5)



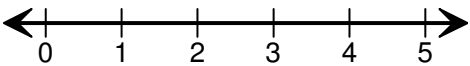
$$2 + 1 = \boxed{}$$

6)



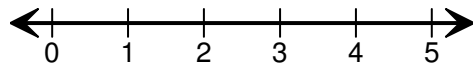
$$3 + 1 = \boxed{}$$

7)



$$1 + 4 = \boxed{}$$

8)



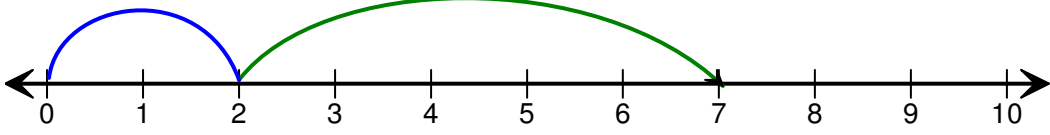
$$2 + 3 = \boxed{}$$

Adı Soyadı:

TOPLAMA

Verilen işlemi sayı doğrusunda gösteriniz.

1)



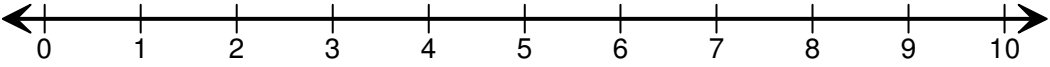
$$2 + 5 = \boxed{7}$$

2)



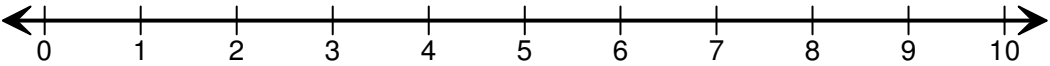
$$7 + 2 = \boxed{}$$

3)



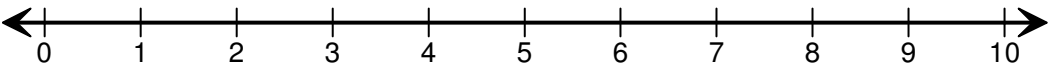
$$1 + 6 = \boxed{}$$

4)



$$3 + 3 = \boxed{}$$

5)



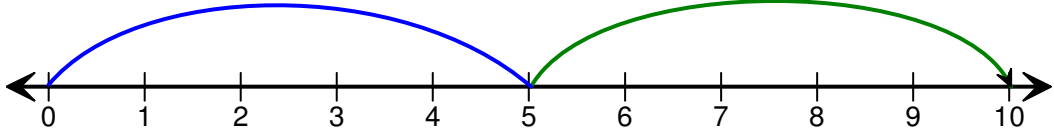
$$6 + 4 = \boxed{}$$

Adı Soyadı:

TOPLAMA

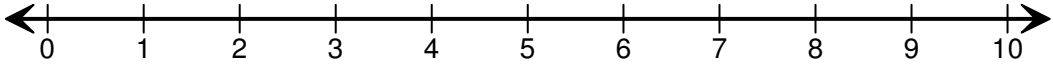
Verilen işlemi sayı doğrusunda gösteriniz.

1)



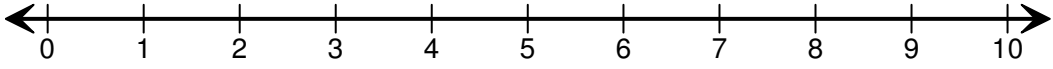
$$5 + 5 = \boxed{10}$$

2)



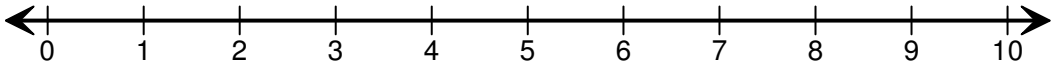
$$4 + 3 = \boxed{}$$

3)



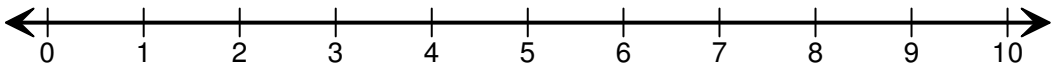
$$6 + 2 = \boxed{}$$

4)



$$2 + 7 = \boxed{}$$

5)



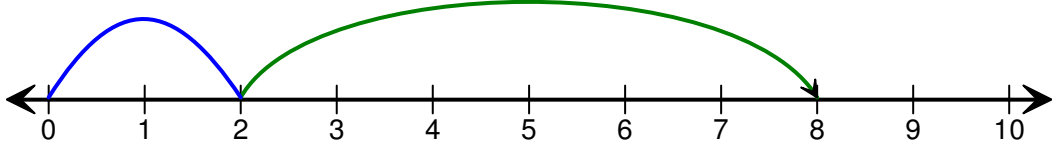
$$3 + 5 = \boxed{}$$

Adı Soyadı:

TOPLAMA

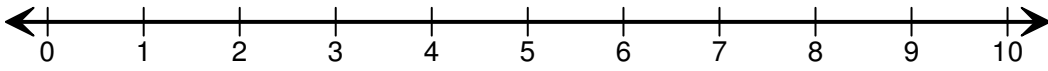
Verilen işlemi sayı doğrusunda gösteriniz.

1)



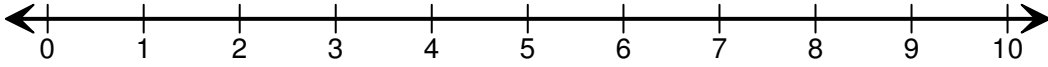
$$2 + 6 = \boxed{8}$$

2)



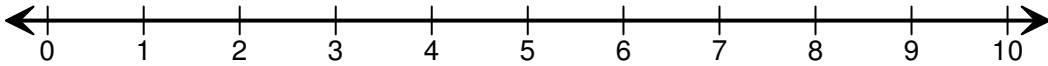
$$4 + 4 = \boxed{}$$

3)



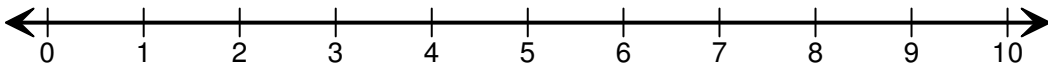
$$4 + 2 = \boxed{}$$

4)



$$5 + 4 = \boxed{}$$

5)



$$3 + 7 = \boxed{}$$