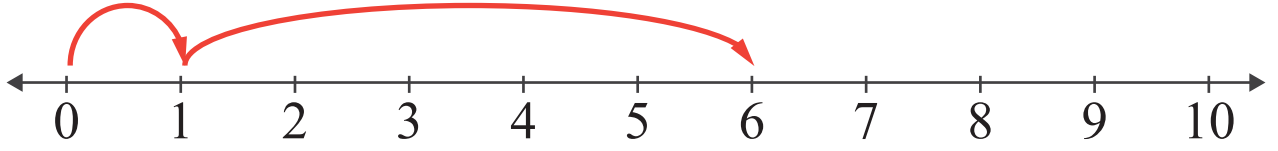
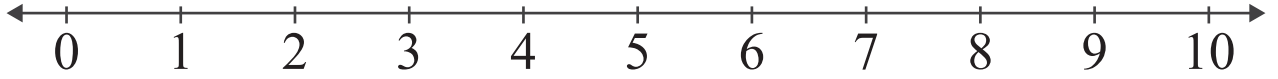


SAYI DOĞRUSU İLE TOPLAMA

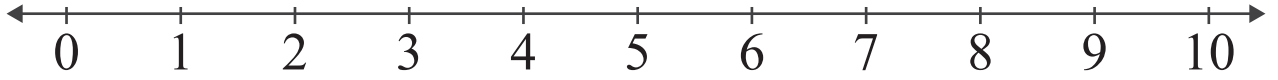
Verilen sayılar ile toplama işlemini sayı doğrusunda gösteriniz.



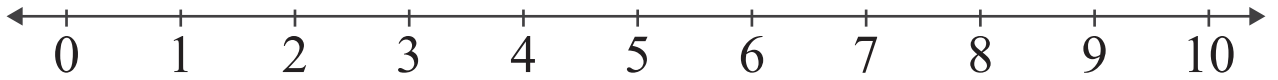
$$1 + 5 = \boxed{6}$$



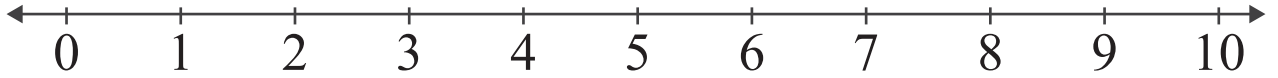
$$3 + 4 = \boxed{}$$



$$5 + 4 = \boxed{}$$



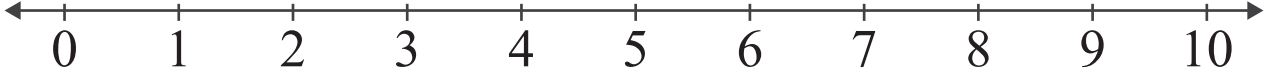
$$2 + 6 = \boxed{}$$



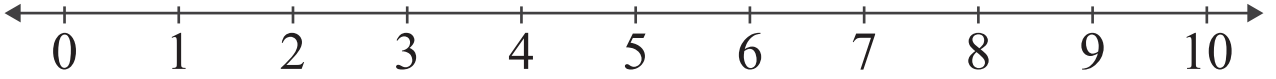
$$5 + 5 = \boxed{}$$

SAYI DOĞRUSU İLE TOPLAMA

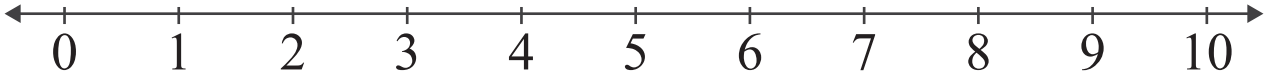
Verilen sayılar ile toplama işlemini sayı doğrusunda gösteriniz.



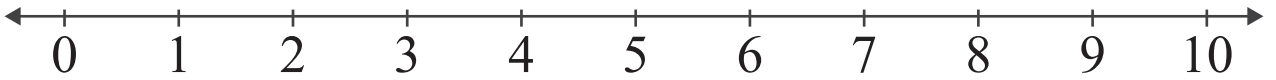
$$3 + 5 = \boxed{}$$



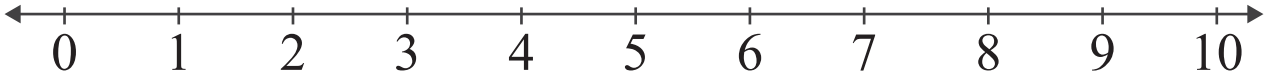
$$2 + 4 = \boxed{}$$



$$5 + 5 = \boxed{}$$



$$2 + 7 = \boxed{}$$



$$4 + 3 = \boxed{}$$

SAYI DOĞRUSU İLE TOPLAMA

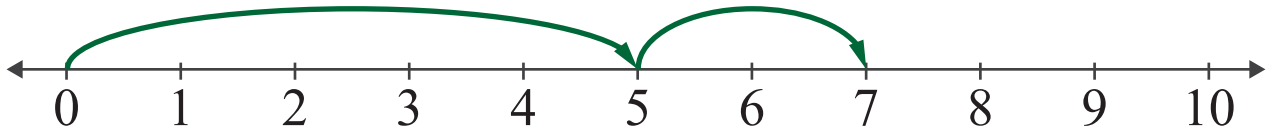
Verilen sayılar ile toplama işlemini sayı doğrusunda gösteriniz.



$$\boxed{} + \boxed{} = \boxed{}$$



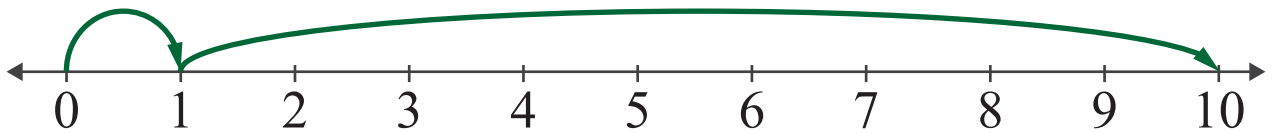
$$\boxed{} + \boxed{} = \boxed{}$$



$$\boxed{} + \boxed{} = \boxed{}$$



$$\boxed{} + \boxed{} = \boxed{}$$



$$\boxed{} + \boxed{} = \boxed{}$$

SAYI DOĞRUSU İLE TOPLAMA

Verilen sayılar ile toplama işlemini sayı doğrusunda gösteriniz.



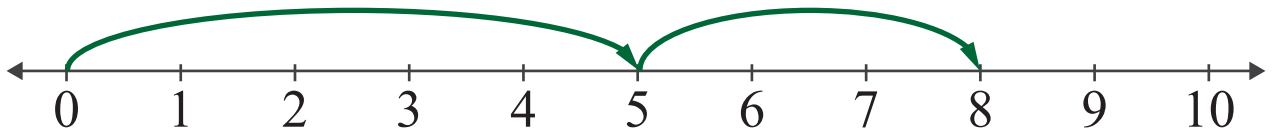
$$\square + \square = \square$$



$$\square + \square = \square$$



$$\square + \square = \square$$



$$\square + \square = \square$$



$$\square + \square = \square$$