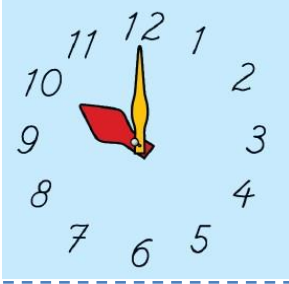



SAATLERİ ÖĞRENİYORUM

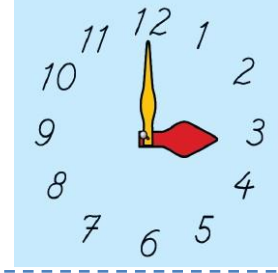
Saatlerin kaçı gösterdiğini söyleyelim.
Noktalı yerlere yazılacak sayıları bulalım.



Akrep un üzerinde,
yelkovan nin
üzerindedir. Saat dır.



Akrep nin üzerinde,
yelkovan nin
üzerindedir. Saat dır.




Akrep ün üzerinde,
yelkovan nin
üzerindedir. Saat dır.



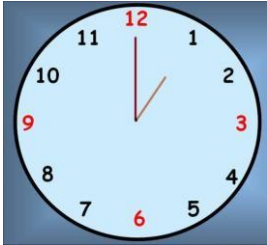
Akrep ün üzerinde,
yelkovan nin
üzerindedir. Saat dır.



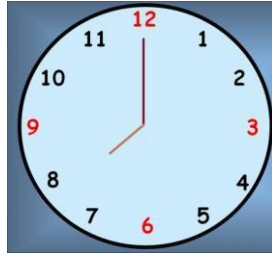
Akrep un üzerinde,
yelkovan nin
üzerindedir. Saat dır.



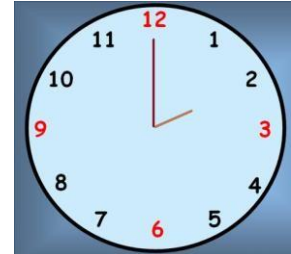
Akrep in üzerinde,
yelkovan nin
üzerindedir. Saat dır.



Akrep in
üzerinde, yelkovan
..... nin üzerindedir.
Saat dır.



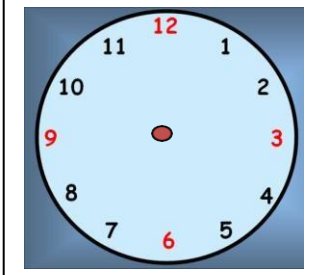
Akrep in
üzerinde, yelkovan
..... nin üzerindedir.
Saat dır.



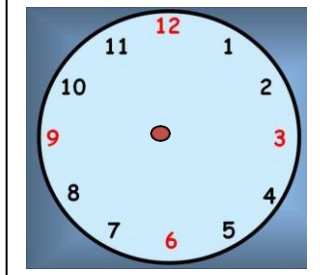
Akrep nin
üzerinde, yelkovan
..... nin üzerindedir.
Saat dır.

SAATLERİ ÖĞRENİYORUM

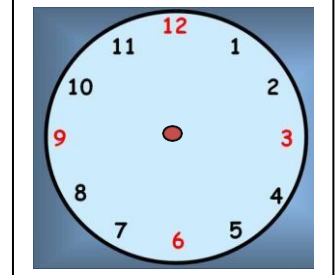
Aşağıda verilen saatlere uygun akrep ve yelkovanları saatlerin içine çiziniz.



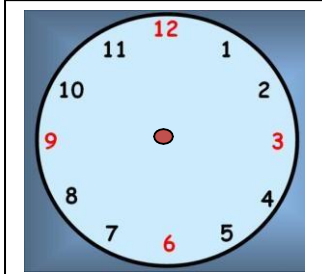
saat : 1



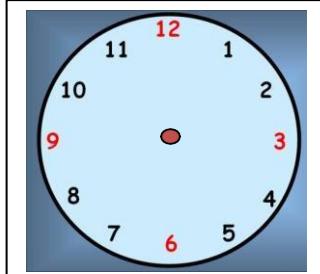
saat : 2



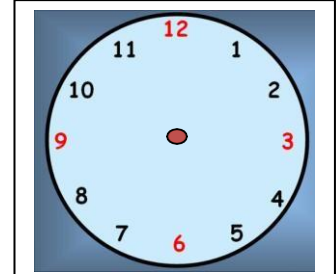
saat : 3



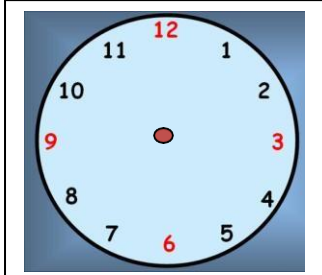
saat : 4



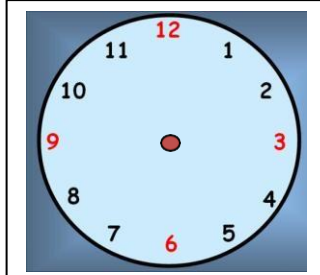
saat : 5



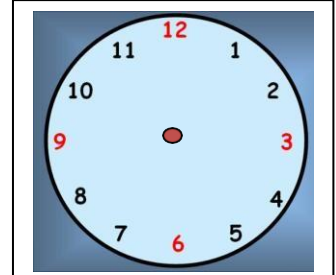
saat : 6



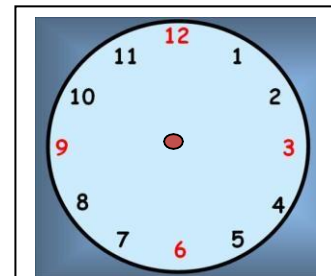
saat : 7



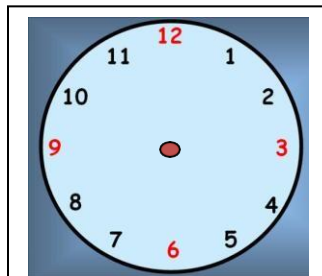
saat : 8



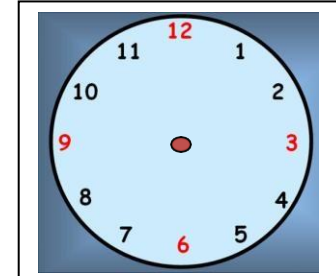
saat : 9



saat : 10



saat : 11



saat : 12