


Adı Soyadı :

## Domino Toplama

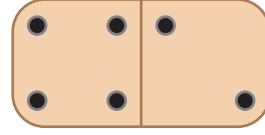
Her domino üzerindeki noktaları sayınız ve toplayınız.

1)



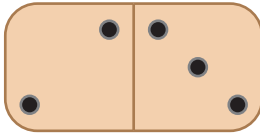
$$\underline{3} + \underline{1} = \underline{4}$$

2)



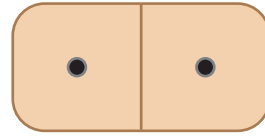
$$\underline{\quad} + \underline{\quad} = \underline{\quad}$$

3)



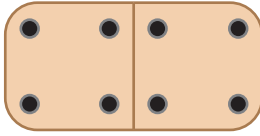
$$\underline{\quad} + \underline{\quad} = \underline{\quad}$$

4)



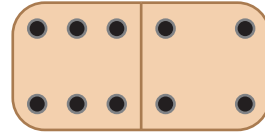
$$\underline{\quad} + \underline{\quad} = \underline{\quad}$$

5)



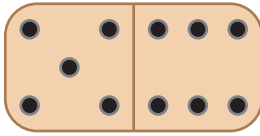
$$\underline{\quad} + \underline{\quad} = \underline{\quad}$$

6)



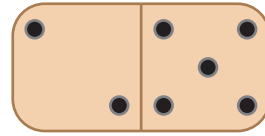
$$\underline{\quad} + \underline{\quad} = \underline{\quad}$$

7)



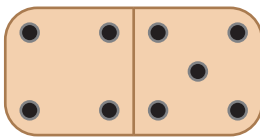
$$\underline{\quad} + \underline{\quad} = \underline{\quad}$$

8)



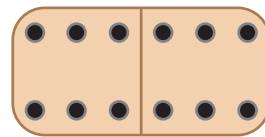
$$\underline{\quad} + \underline{\quad} = \underline{\quad}$$

9)



$$\underline{\quad} + \underline{\quad} = \underline{\quad}$$

10)




$$\underline{\quad} + \underline{\quad} = \underline{\quad}$$

Adı Soyadı :

## Domino Toplama


Her domino üzerindeki noktaları sayınız ve toplayınız.

1)



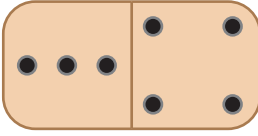
$$\underline{\quad} + \underline{\quad} = \underline{\quad}$$

2)




$$\underline{\quad} + \underline{\quad} = \underline{\quad}$$

3)



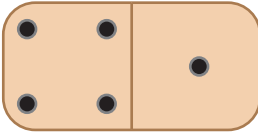
$$\underline{\quad} + \underline{\quad} = \underline{\quad}$$

4)



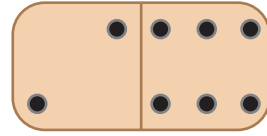
$$\underline{\quad} + \underline{\quad} = \underline{\quad}$$

5)



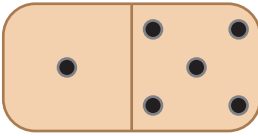
$$\underline{\quad} + \underline{\quad} = \underline{\quad}$$

6)



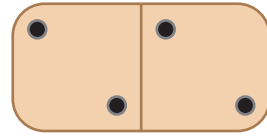
$$\underline{\quad} + \underline{\quad} = \underline{\quad}$$

7)



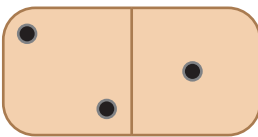
$$\underline{\quad} + \underline{\quad} = \underline{\quad}$$

8)



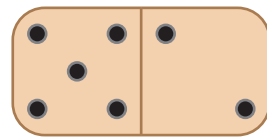
$$\underline{\quad} + \underline{\quad} = \underline{\quad}$$

9)



$$\underline{\quad} + \underline{\quad} = \underline{\quad}$$

10)



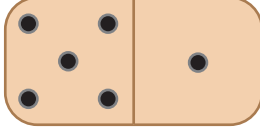
$$\underline{\quad} + \underline{\quad} = \underline{\quad}$$

Adı Soyadı :

## Domino Toplama

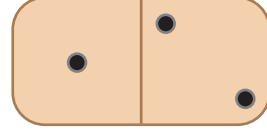
Her domino üzerindeki noktaları sayınız ve toplayınız.

1)



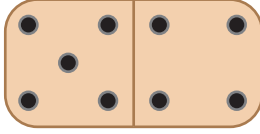
$$\underline{\quad} + \underline{\quad} = \underline{\quad}$$

2)



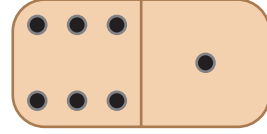
$$\underline{\quad} + \underline{\quad} = \underline{\quad}$$

3)




$$\underline{\quad} + \underline{\quad} = \underline{\quad}$$

4)




$$\underline{\quad} + \underline{\quad} = \underline{\quad}$$

5)



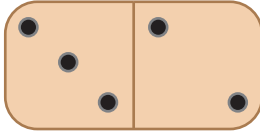
$$\underline{\quad} + \underline{\quad} = \underline{\quad}$$

6)




$$\underline{\quad} + \underline{\quad} = \underline{\quad}$$

7)



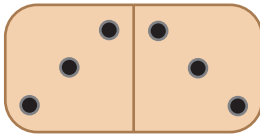
$$\underline{\quad} + \underline{\quad} = \underline{\quad}$$

8)



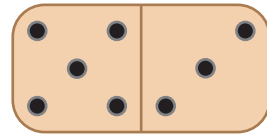
$$\underline{\quad} + \underline{\quad} = \underline{\quad}$$

9)



$$\underline{\quad} + \underline{\quad} = \underline{\quad}$$

10)



$$\underline{\quad} + \underline{\quad} = \underline{\quad}$$