


Adı Soyadı :

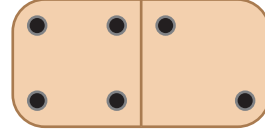
Domino Toplama

1)



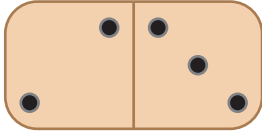
$$\underline{\quad} + \underline{\quad} = \underline{\quad}$$

2)




$$\underline{\quad} + \underline{\quad} = \underline{\quad}$$

3)



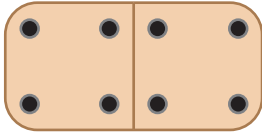
$$\underline{\quad} + \underline{\quad} = \underline{\quad}$$

4)



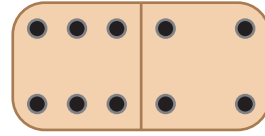
$$\underline{\quad} + \underline{\quad} = \underline{\quad}$$

5)



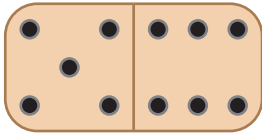
$$\underline{\quad} + \underline{\quad} = \underline{\quad}$$

6)



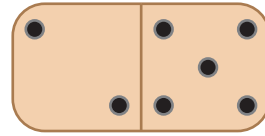
$$\underline{\quad} + \underline{\quad} = \underline{\quad}$$

7)



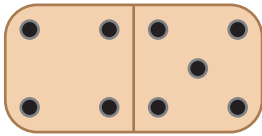
$$\underline{\quad} + \underline{\quad} = \underline{\quad}$$

8)




$$\underline{\quad} + \underline{\quad} = \underline{\quad}$$

9)



$$\underline{\quad} + \underline{\quad} = \underline{\quad}$$

10)




$$\underline{\quad} + \underline{\quad} = \underline{\quad}$$

Adı Soyadı :


Domino Toplama

1)



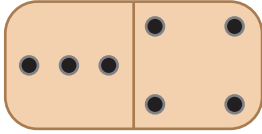
$$\underline{\quad} + \underline{\quad} = \underline{\quad}$$

2)




$$\underline{\quad} + \underline{\quad} = \underline{\quad}$$

3)



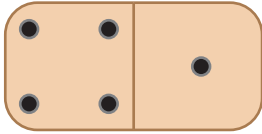
$$\underline{\quad} + \underline{\quad} = \underline{\quad}$$

4)



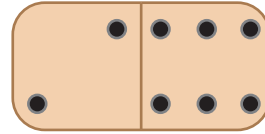
$$\underline{\quad} + \underline{\quad} = \underline{\quad}$$

5)



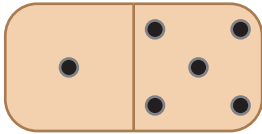
$$\underline{\quad} + \underline{\quad} = \underline{\quad}$$

6)



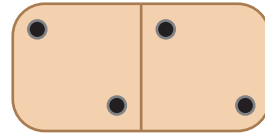
$$\underline{\quad} + \underline{\quad} = \underline{\quad}$$

7)



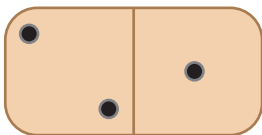
$$\underline{\quad} + \underline{\quad} = \underline{\quad}$$

8)



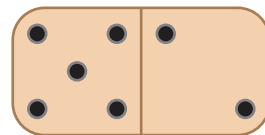
$$\underline{\quad} + \underline{\quad} = \underline{\quad}$$

9)



$$\underline{\quad} + \underline{\quad} = \underline{\quad}$$

10)

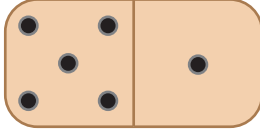


$$\underline{\quad} + \underline{\quad} = \underline{\quad}$$

Adı Soyadı :

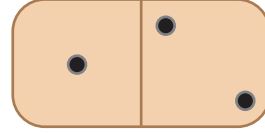
Domino Toplama

1)



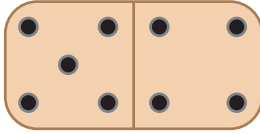
$$\underline{\quad} + \underline{\quad} = \underline{\quad}$$

2)



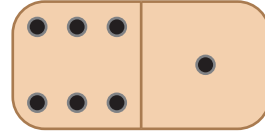
$$\underline{\quad} + \underline{\quad} = \underline{\quad}$$

3)



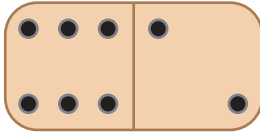
$$\underline{\quad} + \underline{\quad} = \underline{\quad}$$

4)



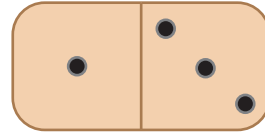
$$\underline{\quad} + \underline{\quad} = \underline{\quad}$$

5)



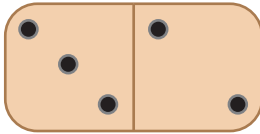
$$\underline{\quad} + \underline{\quad} = \underline{\quad}$$

6)



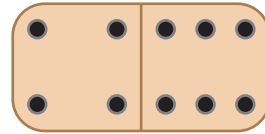
$$\underline{\quad} + \underline{\quad} = \underline{\quad}$$

7)



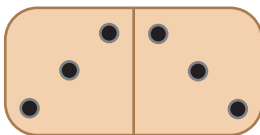
$$\underline{\quad} + \underline{\quad} = \underline{\quad}$$

8)



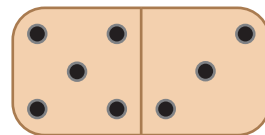
$$\underline{\quad} + \underline{\quad} = \underline{\quad}$$

9)



$$\underline{\quad} + \underline{\quad} = \underline{\quad}$$

10)



$$\underline{\quad} + \underline{\quad} = \underline{\quad}$$

Domino Toplama

1)




$$\underline{\hspace{2cm}} + \underline{\hspace{2cm}} = \underline{\hspace{2cm}}$$

2)




$$\underline{\hspace{2cm}} + \underline{\hspace{2cm}} = \underline{\hspace{2cm}}$$

3)




$$\underline{\hspace{2cm}} + \underline{\hspace{2cm}} = \underline{\hspace{2cm}}$$

4)




$$\underline{\hspace{2cm}} + \underline{\hspace{2cm}} = \underline{\hspace{2cm}}$$

5)



$$\underline{\hspace{2cm}} + \underline{\hspace{2cm}} = \underline{\hspace{2cm}}$$

6)



$$\underline{\hspace{2cm}} + \underline{\hspace{2cm}} = \underline{\hspace{2cm}}$$

7)




$$\underline{\hspace{2cm}} + \underline{\hspace{2cm}} = \underline{\hspace{2cm}}$$

8)




$$\underline{\hspace{2cm}} + \underline{\hspace{2cm}} = \underline{\hspace{2cm}}$$

9)



$$\underline{\hspace{2cm}} + \underline{\hspace{2cm}} = \underline{\hspace{2cm}}$$

10)



$$\underline{\hspace{2cm}} + \underline{\hspace{2cm}} = \underline{\hspace{2cm}}$$