



**Çıkarma işlemlerini modelleyerek yapalım, sonucunu yazalım**


$$9 - 5 = \underline{\quad}$$




$$8 - 3 = \underline{\quad}$$



$$10 - 4 = \underline{\quad}$$



$$7 - 6 = \underline{\quad}$$



$$6 - 2 = \underline{\quad}$$

