

























DENK KESİRLER

Aşağıda verilen kesirlere eş değer olan kesirleri yazınız.

<p>1 a.</p>   $\frac{4}{16} = \frac{\text{■}}{\text{■}}$	<p>1 b.</p>   $\frac{2}{12} = \frac{\text{■}}{\text{■}}$
<p>2 a.</p>   $\frac{3}{6} = \frac{\text{■}}{\text{■}}$	<p>2 b.</p>   $\frac{6}{7} = \frac{\text{■}}{\text{■}}$
<p>3 a.</p>   $\frac{12}{14} = \frac{\text{■}}{\text{■}}$	<p>3 b.</p>   $\frac{5}{7} = \frac{\text{■}}{\text{■}}$
<p>4 a.</p>   $\frac{4}{5} = \frac{\text{■}}{\text{■}}$	<p>4 b.</p>   $\frac{5}{7} = \frac{\text{■}}{\text{■}}$
<p>5 a.</p>   $\frac{14}{16} = \frac{\text{■}}{\text{■}}$	<p>5 b.</p>   $\frac{5}{10} = \frac{\text{■}}{\text{■}}$
<p>6 a.</p>   $\frac{14}{16} = \frac{\text{■}}{\text{■}}$	<p>6 b.</p>   $\frac{5}{7} = \frac{\text{■}}{\text{■}}$