


ÇIKARALIM, AZALTALIM

$$\begin{array}{r} 6 \rightarrow \text{eksilen} \\ - 2 \rightarrow \text{çıkan} \\ \hline 4 \rightarrow \text{fark} \end{array}$$

$$\begin{array}{r} 6 - 2 = 4 \\ \swarrow \quad \downarrow \quad \searrow \\ \text{eksilen} \quad \text{çıkan} \quad \text{fark} \end{array}$$

$\begin{array}{r} 9 \\ - 3 \\ \hline \dots \end{array}$	$\begin{array}{r} 6 \\ - 2 \\ \hline \dots \end{array}$	$\begin{array}{r} 8 \\ - 2 \\ \hline \dots \end{array}$
---	-------	---	-------	---	-------

Bahçedeki 9 tavşanın 6 tanesi kaçtı. Kaç tavşan kaldı?



1 2 3 4 5 6 7 8 9


$$9 - 6 = \dots$$

9 eksi 6 eşittir

$7-3 = \dots$	7 eksi 3 eşittir ...
---------------	----------------------




$8-5 = \dots$
---------------	-------



$6-5 = \dots$
---------------	-------



$4-3 = \dots$
---------------	-------



$7-2 = \dots$
---------------	-------



$6-1 = \dots$
---------------	-------



$5-3 = \dots$
---------------	-------



