






Aşağıdaki işlemlerin sonuçlarını bulunuz



$$\begin{array}{r} 150 \overline{)30} \\ \underline{\phantom{00}00} \\ \phantom{00}30 \\ \underline{\phantom{00}00} \\ \phantom{0000}0 \end{array}$$



$$\begin{array}{r} 723 \overline{)?} \\ \underline{\phantom{00}00} \\ \phantom{00}15 \end{array}$$



$$\begin{array}{r} 643 \overline{)?} \\ \underline{\phantom{00}00} \\ \phantom{00}12 \end{array}$$


$$\begin{array}{r} 793 \overline{)12} \\ \underline{\phantom{00}00} \\ \phantom{00}0 \end{array}$$


$$\begin{array}{r} 348 \overline{)14} \\ \underline{\phantom{00}00} \\ \phantom{00}0 \end{array}$$


$$\begin{array}{r} 876 \overline{)?} \\ \underline{\phantom{00}00} \\ \phantom{00}25 \end{array}$$


$$\begin{array}{r} 427 \overline{)?} \\ \underline{\phantom{00}00} \\ \phantom{00}13 \end{array}$$


$$\begin{array}{r} ? \overline{)29} \\ \underline{\phantom{00}00} \\ \phantom{00}38 \end{array}$$

Ne kadar bilersen bil, söylediklerin karşıdakilerin anlayabileceği kadardır. Mevlana

Aşağıdaki verilen işlemleri tahmin ediniz. Tahmininizle işlem sonucunu karşılaştırınız.

					Tahminim						İşlem Sonucu
4	8	x	2	3	5	0	4	8			
					x	2	0	x	2	3	
7	9	x	8	7	x		x				
6	6	x	8	3	x		x				
6	4	9	÷	1	5						
7	5	x	3	9	x		x				