

İsim : \_\_\_\_\_

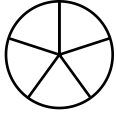
Puan : \_\_\_\_\_

Öğretmen : \_\_\_\_\_

Tarih : \_\_\_\_\_

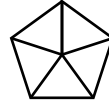
Belirtilen kesir kadarını boyayınız.

1 )



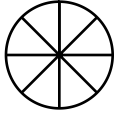
$\frac{1}{5}$

6 )



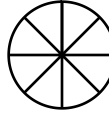
$\frac{3}{5}$

2 )



$\frac{3}{8}$

7 )



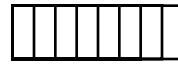
$\frac{4}{8}$

3 )



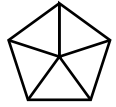
$\frac{2}{8}$

8 )



$\frac{5}{8}$

4 )



$\frac{2}{5}$

9 )



$\frac{1}{3}$

5 )



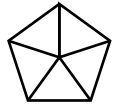
$\frac{2}{3}$

10 )




$\frac{3}{4}$

11 )



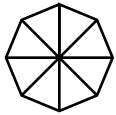
$\frac{4}{5}$

16 )



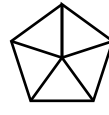
$\frac{1}{2}$

12 )



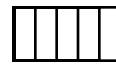
$\frac{6}{8}$

17 )



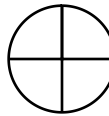
$\frac{4}{5}$

13 )



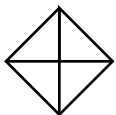
$\frac{3}{5}$

18 )



$\frac{1}{4}$

14 )



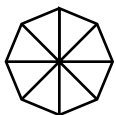
$\frac{2}{4}$

19 )



$\frac{7}{8}$

15 )



$\frac{1}{8}$

20 )



$\frac{2}{5}$