



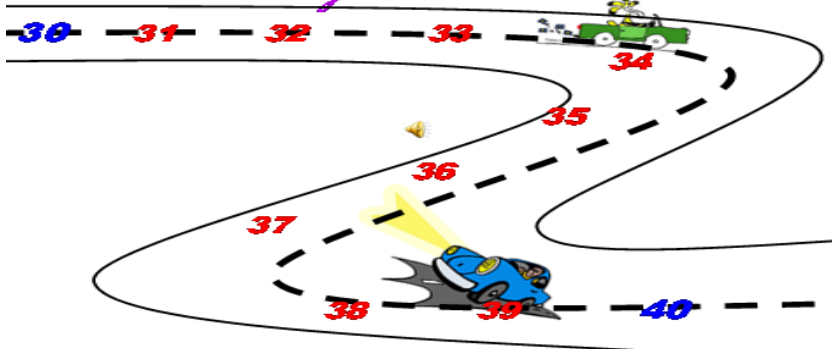
# EN YAKIN ONLUĞA YUVARLAMA

- ONLUĞA YUVARLARKEN SAYININ BİRLER BASAMAĞINA BAKARIZ.
- SAYILAR KENDİSİNE EN YAKIN ONLUĞA YUVARLANIR.
- BİRLER BASAMAĞI 1,2,3,4 OLAN ÖNCEKİ ONLUĞA YUVARLANIR.
- BİRLER BASAMAĞI 5,6,7,8,9 OLAN
- SAYILAR SONRAKİ ONLUĞA YUVARLANIR.
- YUVARLAMA MATEMATİKSEL İŞLEM YAPARKEN KOLAYLIK SAĞLAR.




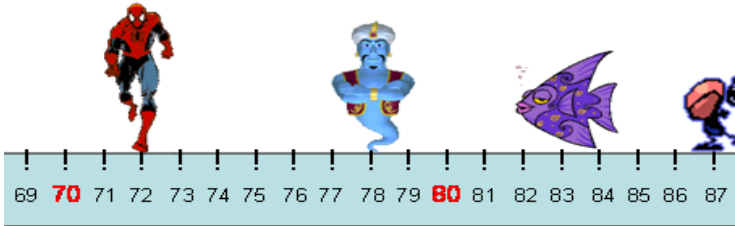
10	20	30
----	----	----

*Kim, hangi onluğa daha yakın?*




30	40	50
----	----	----


*Kim hangi onluğa daha yakın?*



40	50	60
----	----	----



**Sayıları en yakın onluğa yuvarla.  
Kutucuğa yaz.**



50	60	70
----	----	----