


# AŞAĞIDA Kİ VERİLEN ÇARPMA İŞLEMLERİNİ YAPALIM

$10 \times 1 = \dots$



$10 \times 5 = \dots$



$10 \times 3 = \dots$



$10 \times 7 = \dots$




$10 \times 10 = \dots$



$10 \times 4 = \dots$




$10 \times 9 = \dots$



$10 \times 6 = \dots$



$10 \times 8 = \dots$



$10 \times 2 = \dots$

