

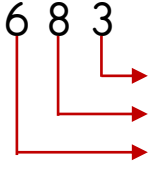


MATEMATİK

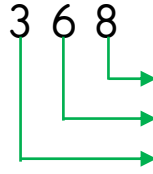


Doğal Sayılarda Basamak Adları

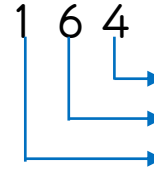
Aşağıdaki doğal sayıların basamak adlarını yazınız.



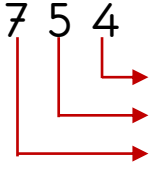
..... basamağı
..... basamağı
..... basamağı



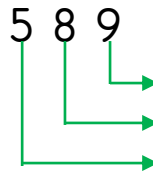
..... basamağı
..... basamağı
..... basamağı



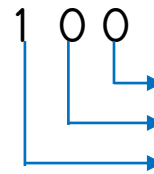
..... basamağı
..... basamağı
..... basamağı



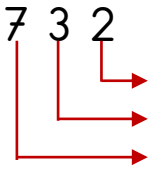
..... basamağı
..... basamağı
..... basamağı



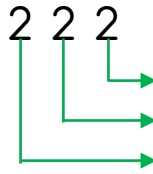
..... basamağı
..... basamağı
..... basamağı



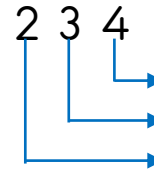
..... basamağı
..... basamağı
..... basamağı



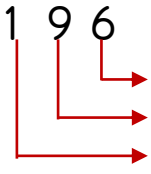
..... basamağı
..... basamağı
..... basamağı



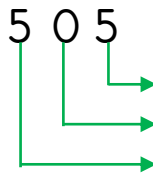
..... basamağı
..... basamağı
..... basamağı



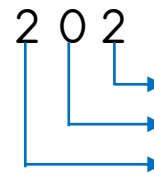
..... basamağı
..... basamağı
..... basamağı



..... basamağı
..... basamağı
..... basamağı



..... basamağı
..... basamağı
..... basamağı



..... basamağı
..... basamağı
..... basamağı

Aşağıdaki basamakları verilen sayıları sayı bölümlerine yazınız.

SAYI	Yüzler Basamağı 5	Onlar Basamağı 3	Birler Basamağı 1
---------------	-------------------------	------------------------	-------------------------

SAYI	Yüzler Basamağı 5	Onlar Basamağı 3	Birler Basamağı 1
---------------	-------------------------	------------------------	-------------------------

SAYI	Onlar Basamağı 5	Yüzler Basamağı 3	Birler Basamağı 1
---------------	------------------------	-------------------------	-------------------------

SAYI	Birler Basamağı 5	Onlar Basamağı 3	Yüzler Basamağı 1
---------------	-------------------------	------------------------	-------------------------

SAYI	Birler Basamağı 5	Onlar Basamağı 3	Yüzler Basamağı 1
---------------	-------------------------	------------------------	-------------------------

SAYI	Onlar Basamağı 5	Yüzler Basamağı 3	Birler Basamağı 1
---------------	------------------------	-------------------------	-------------------------