
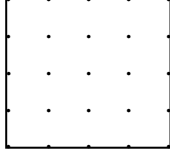



* Aşağıdaki şekillerin alanları birim kareleri sayarak bulunuz.



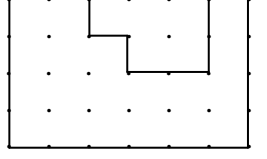
Alan:



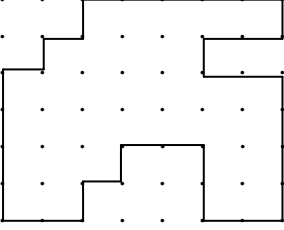
Alan:



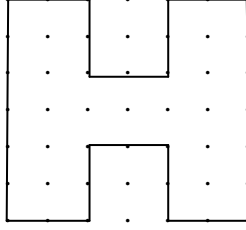
Alan:



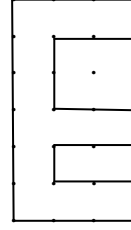
Alan:



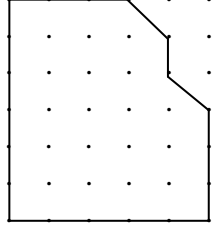
Alan:



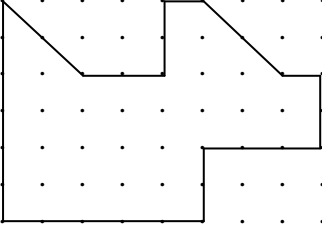
Alan:



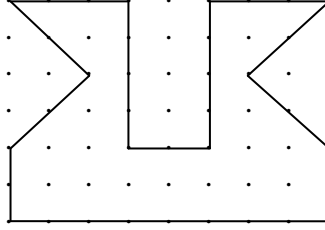
Alan:



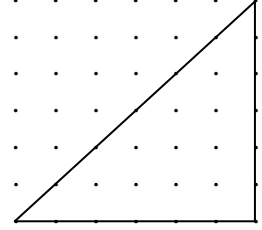
Alan:



Alan:




Alan:



Alan:

* Aşağıda alanları verilen şekilleri çiziniz.



Alan:14 birim kare




Alan:35 birim kare



Alan:25 birim kare



Alan:18 birim kare



Alan:40 birim kare



Alan:30 birim kare