


Adı soyadı:

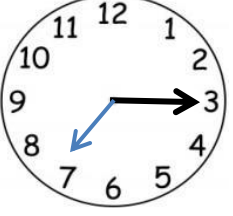
3. Sınıf Saat okuma –yazma

Aşağıda verilen saatlerin okunuşlarını yazalım.



Öğleden önce: Saat 3

Öğleden sonra : Saat 15




Öğleden önce:

Saat :

Öğleden sonra:

Saat :




Öğleden önce:

Saat :

Öğleden sonra:

Saat :




Öğleden önce:

Saat:

Öğleden sonra:

Saat:

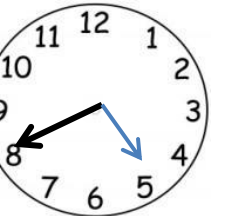


Öğleden önce:

Saat:

Öğleden sonra

Saat:



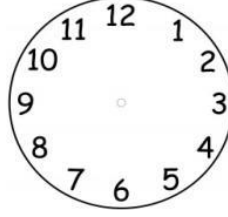
Öğleden önce :

Saat:.....

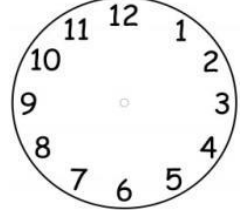
Öğleden sonra :

Saat:.....

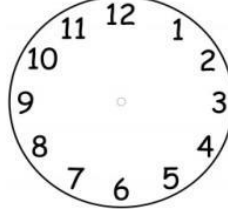
Belirtilen zamanları saat modelleri üzerinde gösteriniz.



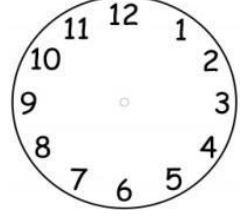
saat 09.20



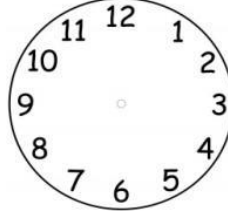
saat 10.40



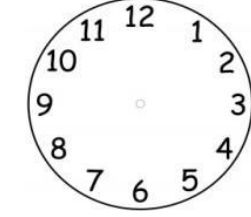
Saat 09.25



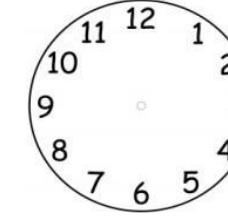
saat 08.35



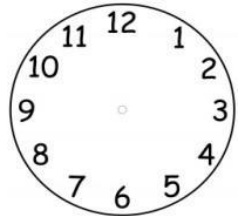
Saat 11.40



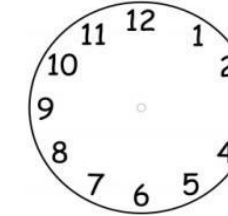
saat 12.10



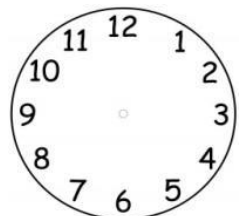
Saat 22.05



saat 20.50



Saat 19.55



saat 21.50

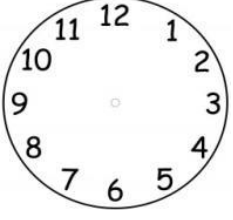
Adı soyadı:

3. Sınıf Saat okuma –yazma

Dijital saatlerde gösterilen zamanı analog saatle gösteriniz. Okunuşlarını yazınız.

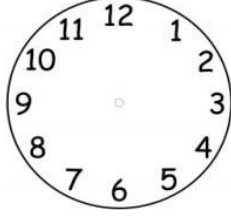
Dijital saatlerde gösterilen zamanı analog saatle gösteriniz. Okunuşlarını yazınız

10.45



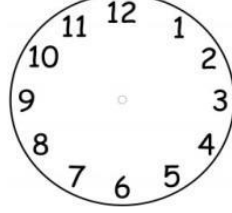
On bire çeyrek var.

09.15



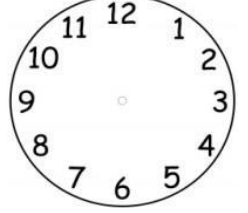
.....

15.10



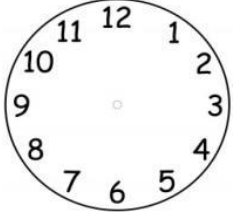
.....

17.20



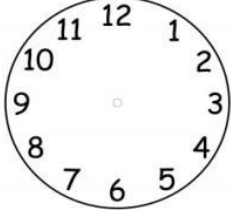
.....

12.20



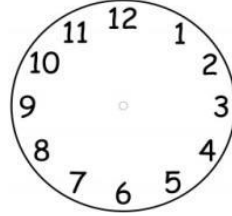
.....
.....

10.25




.....
.....

18.25




.....

19.35




.....

23.05



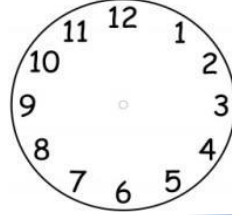
.....

04.10




.....

Akrep 3 ile 4 dört arasında, yelkovan 9'u üzerinde ise saat öğleden önce kaçtır?



Saat:

Akrep 6 ile 7 arasında ,yelkovan 6'nın üzerinde ise saat öğleden önce kaçtır?




Saat:

22.35



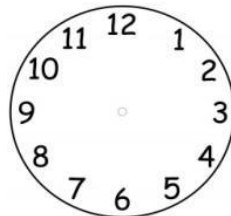
.....

14.40



.....

Akrep 8 ile 9 arasında, yelkovan 3'ün üzerinde ise saat öğleden önce kaçtır?



Saat: