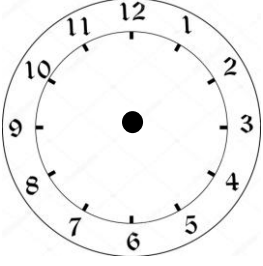
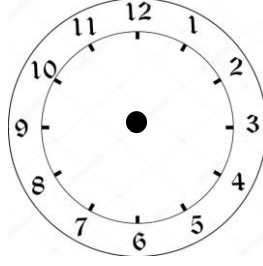


SAATLER

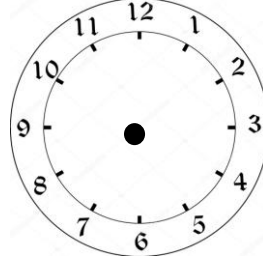
Aşağıdaki saatlerde akrep ve yelkovanı verilen bilgiye göre çizin.



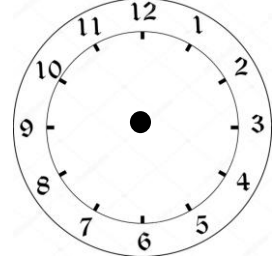
09:00



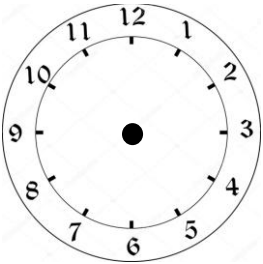
03:30



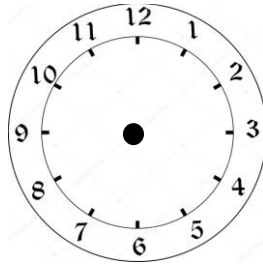
11:15



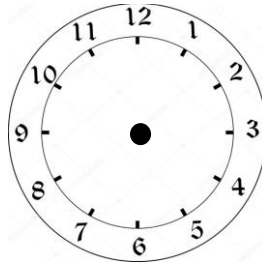
06:15



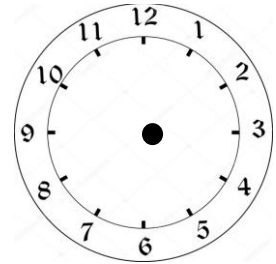
15:45



19:00




16:45



21:30

Verilen bilgiye göre saatin kaç olduğunu boşluklara yazınız.



-- : --



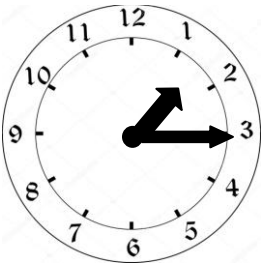
-- : --



-- : --



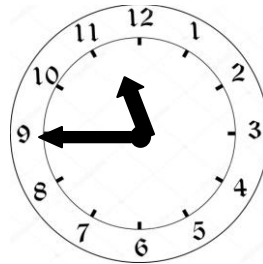
-- : --




-- : --



-- : --




-- : --



-- : --

Aşağıdaki saatlerin okunuşlarını yanına yazınız.

- 11: 15
- 09: 30
- 22: 00
- 01: 15
- 07: 45
- 03: 30
- 23: 00
- 14: 30
- 15: 15



Aşağıdaki saatleri okunuşları ile eşleştiriniz

A 03 : 45

B 05 : 30

C 11 : 00

D 09 : 45

E 03 : 15

F 01 : 30

G 06 : 15

Saat üçü çeyrek **geçiyor**

Saat bir buçuk

Saat ona çeyrek **var**

Saat dörde çeyrek **var**

Saat altıyı çeyrek **geçiyor**

Saat on bir

Saat beş buçuk