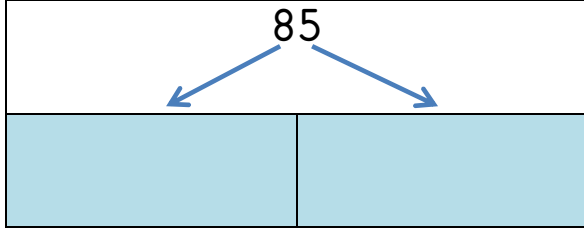


**2. SINIF**  
**MATEMATİK**  
**ONLUK VE BİRLİK - 5**

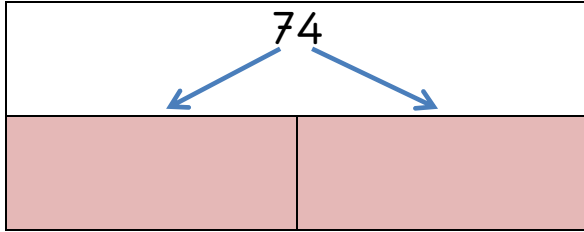
Aşağıda verilen sayıların basamak adlarını yazınız.



68

.....

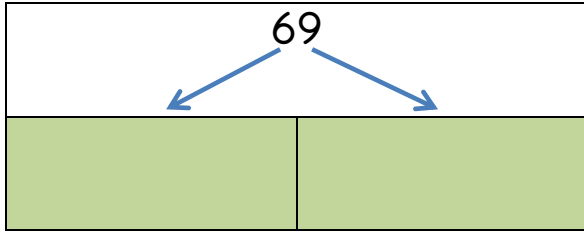
.....



95

.....

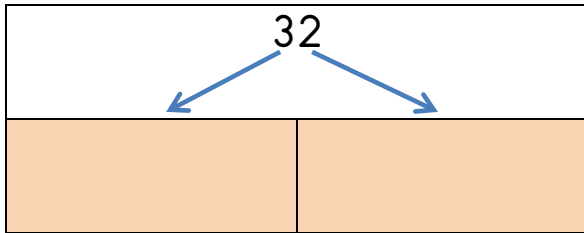
.....



73

.....

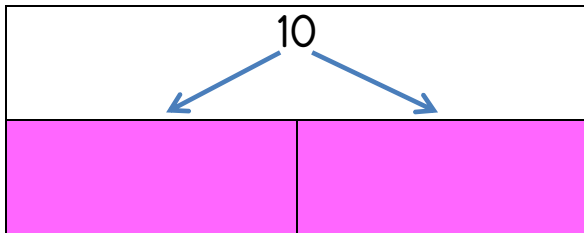
.....



12

.....

.....



40

.....

.....

Aşağıda verilen sayıların basamak değerlerini yazınız.

