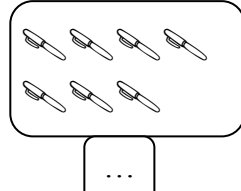

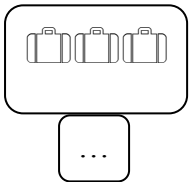



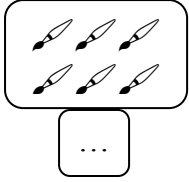


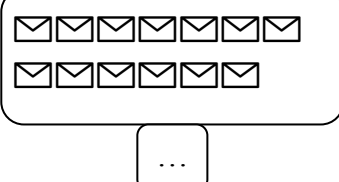
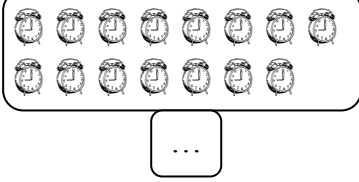
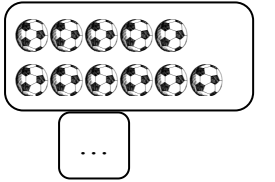
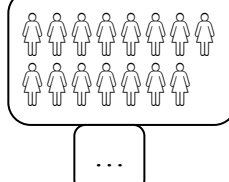
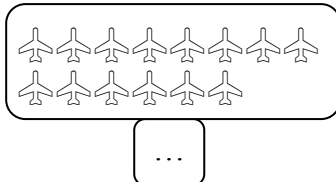
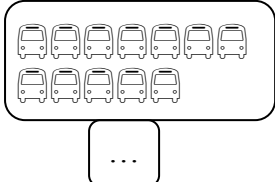
MATEMATİK

Deste


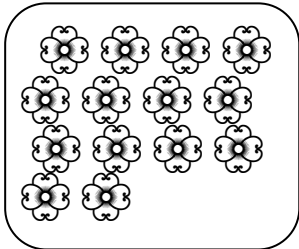
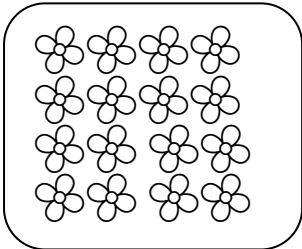
1.Etkinlik: Varlıkların 1 desteden kaç tane az olduğunu noktalı yerlere yazalım.



2.Etkinlik: Varlıkların 1 desteden kaç tane fazla olduğunu noktalı yerlere yazalım.

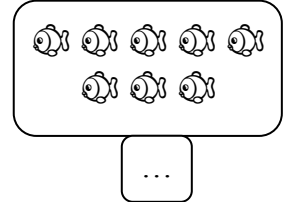
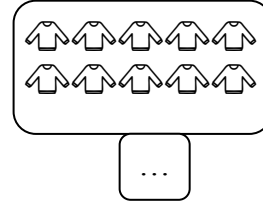

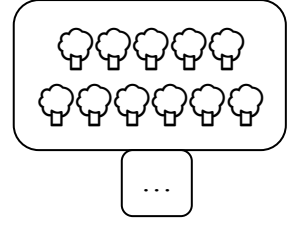
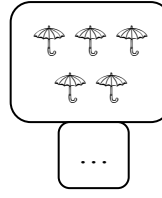
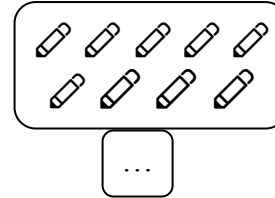
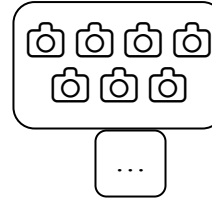


3.Etkinlik: Çiçeklerin 1 destesini boyayalım.

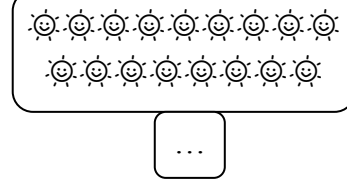
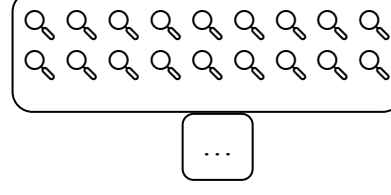
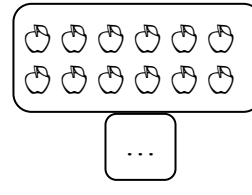
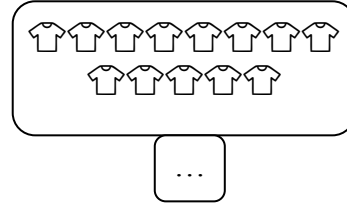

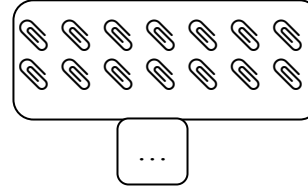


Düzine

1.Etkinlik: Varlıkların 1 düzineden kaç tane az olduğunu noktalı yerlere yazalım.



2.Etkinlik: Varlıkların 1 düzineden kaç tane fazla olduğunu noktalı yerlere yazalım.



3.Etkinlik: Çiçeklerin 1 düzinesini boyayalım.

