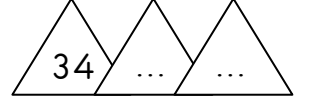
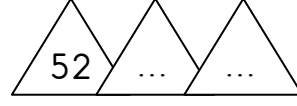
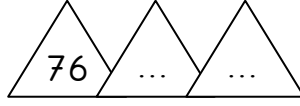
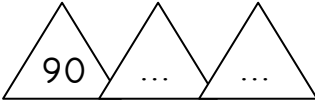
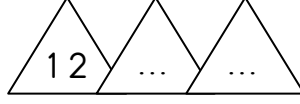
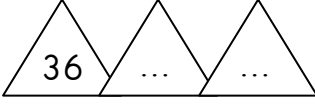


RİTMİK SAYMALAR

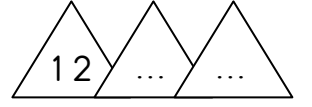
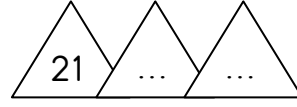
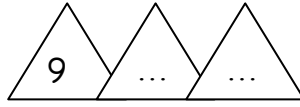
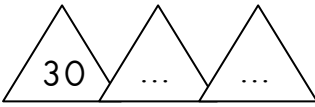
1.Etkinlik:Verilen sayıdan geriye doğru **ikişer** ritmik sayma yapıldığında noktalı yerlere gelecek sayıları yazalım.



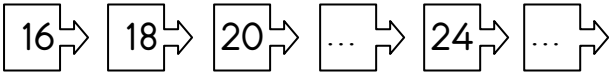
2.Etkinlik:Verilen sayıdan geriye doğru **dörder** ritmik sayma yapıldığında noktalı yerlere gelecek sayıları yazalım.



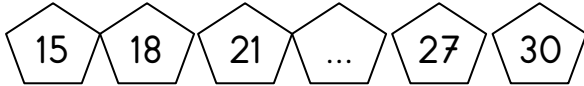
3.Etkinlik:Verilen sayıdan geriye doğru **ikişer** ritmik sayma yapıldığında noktalı yerlere gelecek sayıları yazalım.



4.Etkinlik: Aşağıda verilen sayı örüntülerinin kuralını bul ve noktalı yerlere gelecek sayıları yazalım.



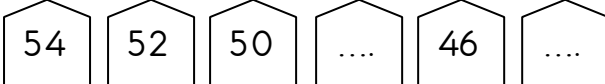
Kural:



Kural:



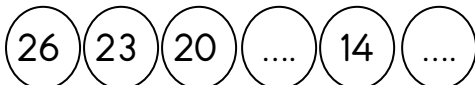
Kural:



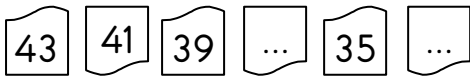
Kural:



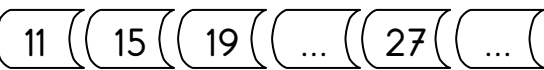
Kural:



Kural:



Kural:



Kural:



Kural:



Kural:

