





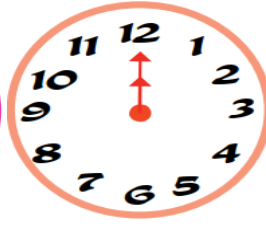


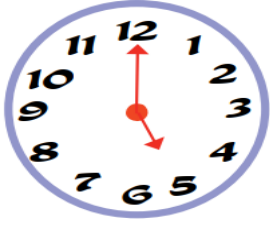


Adı-Soyadı: .....

1. Aşağıda verilen saatleri tamamlayınız. (20p)



Dört buçuk

Altı

Sekiz buçuk

Üç

On bir buçuk

2. Aşağıda verilen kesirleri tamamlayınız. (16p)



..... bütün elma ..... yarım elma eder.



..... yarım armut ..... bütün armut eder.



..... bütün kivi ..... yarım kivi eder.



..... yarım kivi ..... bütün kivi eder.

3. Aşağıdaki verilen çıkarma ve toplama işlemlerini yapınız. (24p)

$$\begin{array}{r} 4 \\ + 5 \\ \hline \end{array}$$

$$\begin{array}{r} 18 \\ - 11 \\ \hline \end{array}$$

$$\begin{array}{r} 9 \\ + 8 \\ \hline \end{array}$$

$$\begin{array}{r} 17 \\ - 8 \\ \hline \end{array}$$

$$\begin{array}{r} 12 \\ + 5 \\ \hline \end{array}$$

$$\begin{array}{r} 13 \\ - 6 \\ \hline \end{array}$$

$$\begin{array}{r} 9 \\ + 8 \\ \hline \end{array}$$

$$\begin{array}{r} 11 \\ - 0 \\ \hline \end{array}$$

$$\dots + 6 = 11$$

$$5 + \dots = 8$$

$$6 + \dots = 8$$

$$8 + \dots = 12$$

			
 <input data-bbox="161 548 365 618" type="text"/>	 <input data-bbox="529 548 732 618" type="text"/>	 <input data-bbox="901 548 1104 618" type="text"/>	 <input data-bbox="1272 548 1474 618" type="text"/>

A sequence of five hexagons. The fourth hexagon contains the number 12 and the fifth hexagon contains the number 14.

a) Bir sınıfta 8 erkek 9 kız öğrenci vardır. Sınıfta toplam kaç öğrenci vardır?

[illegible][illegible][illegible][illegible][illegible][illegible]