





















## 2 RAKAMI ÇALIŞMA KAĞIDI

Aşağıda verilen nesneleri sayınız. 2 tane olan nesnelerin kutucuğunu işaretleyiniz.

 <input type="checkbox"/>	 <input type="checkbox"/>	 <input type="checkbox"/>	 <input type="checkbox"/>
 <input type="checkbox"/>	 <input type="checkbox"/>	 <input type="checkbox"/>	 <input type="checkbox"/>
 <input type="checkbox"/>	 <input type="checkbox"/>	 <input type="checkbox"/>	 <input type="checkbox"/>
 <input type="checkbox"/>	 <input type="checkbox"/>	 <input type="checkbox"/>	 <input type="checkbox"/>
 <input type="checkbox"/>	 <input type="checkbox"/>	 <input type="checkbox"/>	 <input type="checkbox"/>

Aşağıda verilen satıra 2 rakamını kuralına uygun şekilde yazınız.

2