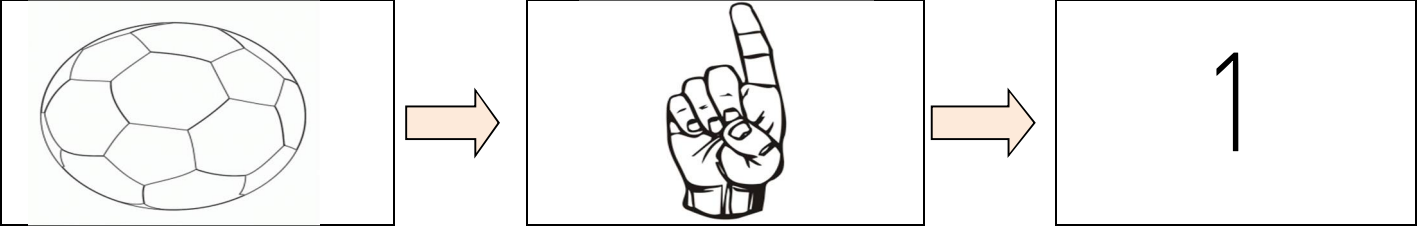




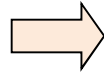

1 Rakamını Öğreniyorum



Kaç tane köpek var ? Kaç tane fil var ? Söyleyelim ve boyayalım.

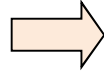



Aşağıdaki atları sayalım ve rakam ile yazalım.



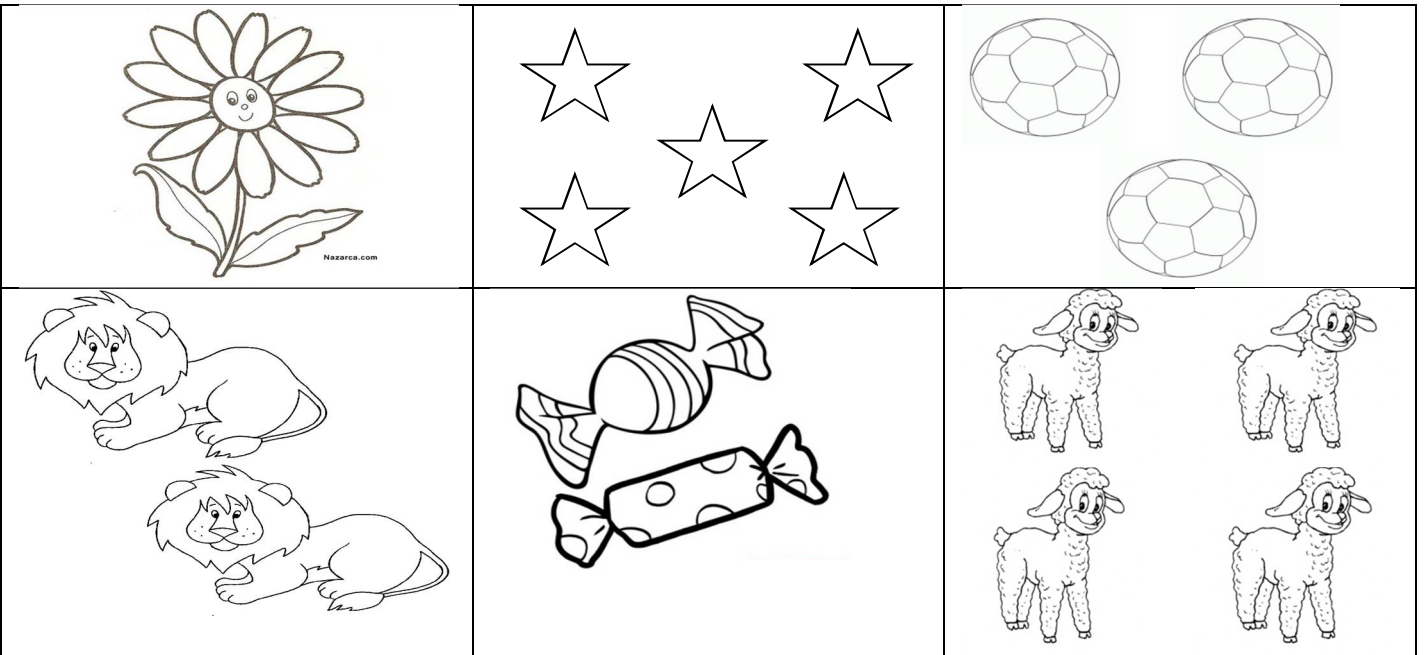
... at

Şimdi sıra sende. Aşağıda kaç tane lale olduğunu bul ve rakamla yaz.

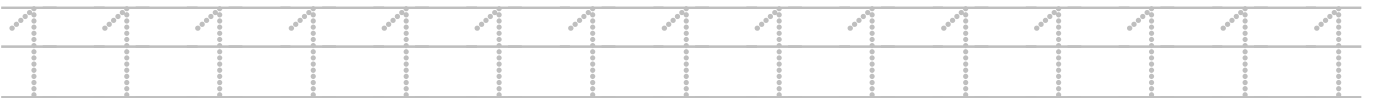
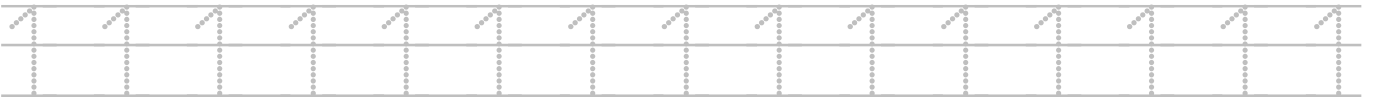
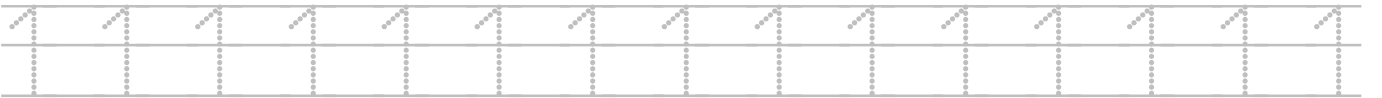
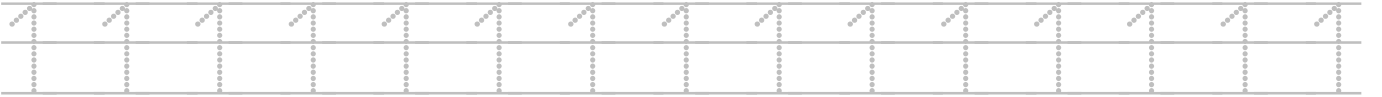
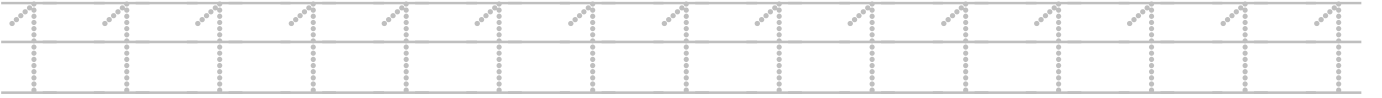


... lale

Aşağıdaki kutularda verilen şekillerden sadece 1 tanesini boyayalım.



1 Rakamını Öğreniyorum



1 Rakamını Öğreniyorum



1 Rakamını Öğreniyorum

1 1 1 1 1 1 1 1 1 1 1 1 1 1 1 1 1

1 1 1 1 1 1 1 1 1 1 1 1 1 1 1 1 1

1 1 1 1 1 1 1 1 1 1 1 1 1 1 1 1 1

1 1 1 1 1 1 1 1 1 1 1 1 1 1 1 1 1

1 1 1 1 1 1 1 1 1 1 1 1 1 1 1 1 1

1 1 1 1 1 1 1 1 1 1 1 1 1 1 1 1 1

1 1 1 1 1 1 1 1 1 1 1 1 1 1 1 1 1

1 1 1 1 1 1 1 1 1 1 1 1 1 1 1 1 1

1 1 1 1 1 1 1 1 1 1 1 1 1 1 1 1 1