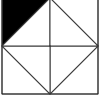
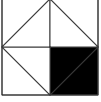


İsim _____

Tam Sayılarla Toplama



$10 + (-4) =$

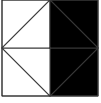


$-3 + 6 =$



$2 + (-12) =$

Burak Zeki Güneş/



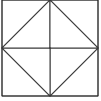
$-7 + 6 =$



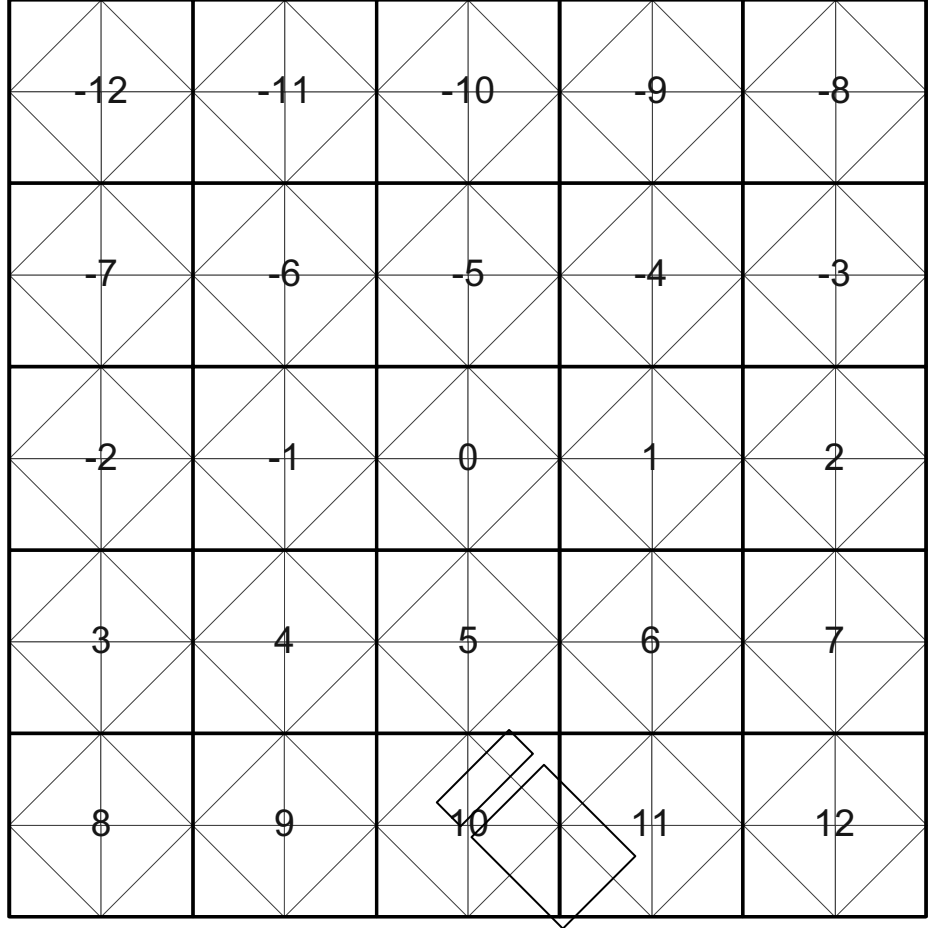
$-2 + (-4) =$



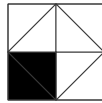
$-5 + (-7) =$



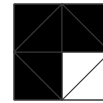
$9 + (-9) =$



$5 + 4 =$



$-5 + (-6) =$

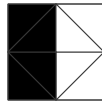


$-3 + 15 =$

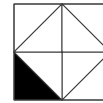
Burak Zeki Güneş/



$-6 + 8 =$



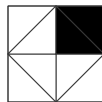
$8 + (-7) =$



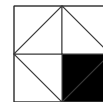
$0 + (-4) =$



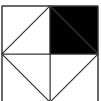
$-1 + (-4) =$



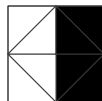
$-3 + (-4) =$



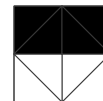
$-6 + (-3) =$



$14 + (-3) =$



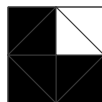
$10 + (-12) =$



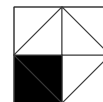
$-1 + 11 =$



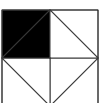
$-2 + 10 =$



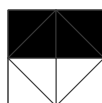
$-4 + (-4) =$



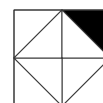
$10 + (-3) =$



$-1 + (-2) =$



$-2 + 7 =$



$8 + (-4) =$

Name _____

Key _____

Adding Integers



$$10 + (-4) = 6$$



$$-3 + 6 = 3$$



$$2 + (-12) = -10$$



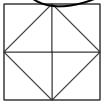
$$-7 + 6 = -1$$



$$-2 + (-4) = -6$$



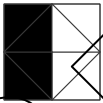
$$-5 + (-7) = -12$$



$$9 + (-9) = 0$$



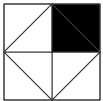
$$5 + 4 = 9$$



$$-6 + 8 = 2$$



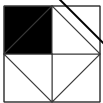
$$-1 + (-4) = -5$$



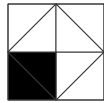

$$14 + (-3) = 11$$



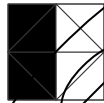
$$-2 + 10 = 8$$



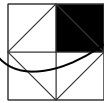
$$-1 + (-2) = -3$$



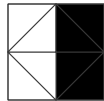
$$-5 + (-6) = -11$$



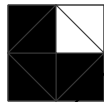
$$8 + (-7) = 1$$



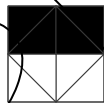
$$-3 + (-4) = -7$$



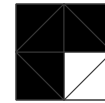
$$10 + (-12) = -2$$



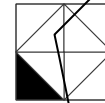
$$-4 + (-4) = -8$$



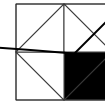
$$-2 + 7 = 5$$



$$-3 + 15 = 12$$



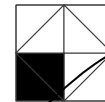
$$0 + (-4) = -4$$



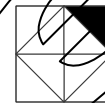
$$-6 + (-3) = -9$$



$$-1 + 11 = 10$$



$$10 + (-3) = 7$$



$$8 + (-4) = 4$$