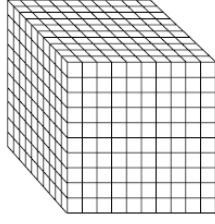


Adı :
Soyadı :

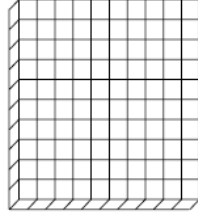
MATEMATİK
Doğal Sayıları Bölükler

Etkinlik 1

Aşağıdaki modellerle gösterilen sayıları yazınız.



Binlik



Yüzlük



Onluk



Birlik

Empty box for writing the number.

1000 units (1 Binlik) + 200 units (2 Yüzlük) + 50 units (5 Onluk) + 1 unit (1 Birlik)

Empty box for writing the number.

4000 units (4 Binlik) + 300 units (3 Yüzlük) + 20 units (2 Onluk) + 4 units (4 Birlik)

Empty box for writing the number.

1000 units (1 Binlik) + 200 units (2 Yüzlük) + 10 units (1 Onluk) + 1 unit (1 Birlik)

Empty box for writing the number.


5000 units (5 Binlik) + 300 units (3 Yüzlük) + 20 units (2 Onluk) + 4 units (4 Birlik)

Adı :
Soyadı :

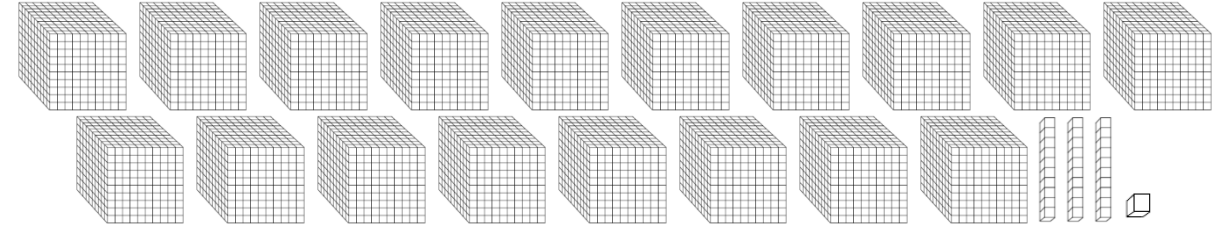
MATEMATİK
Doğal Sayıları Bölükler

Etkinlik 1

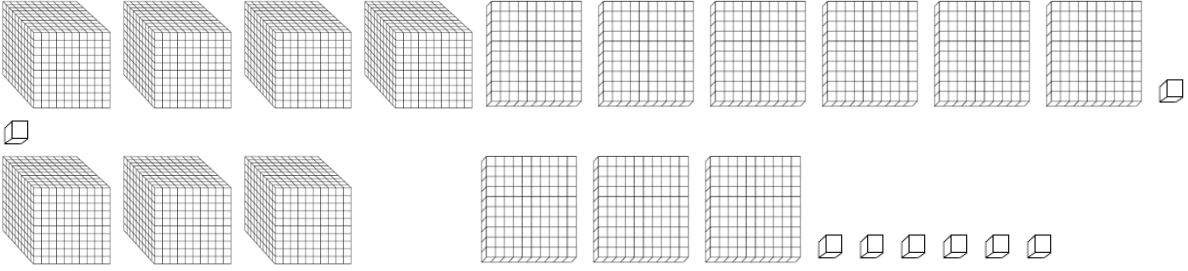
Empty box for student name



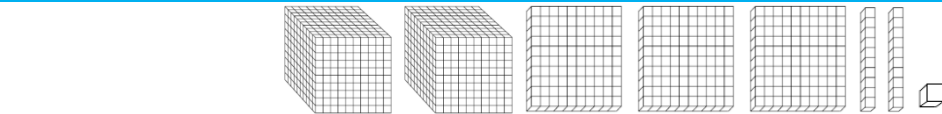
Empty box for student name



2



Empty box for student name



Empty box for student name

