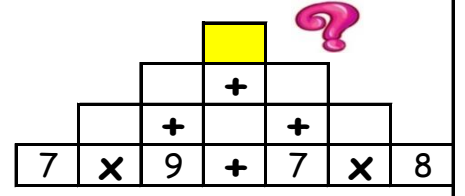
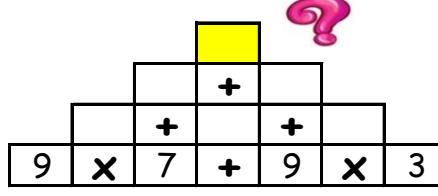
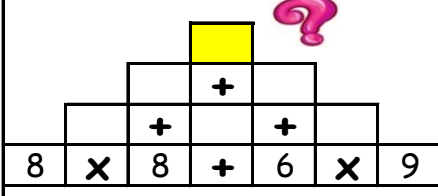
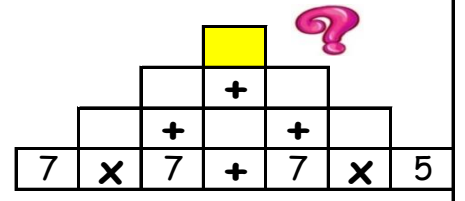
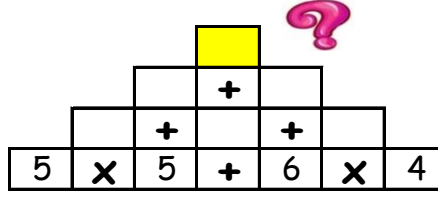
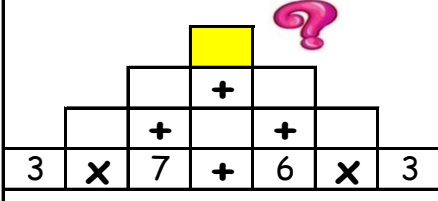


PİRAMİT İŞLEMLER (Zor)

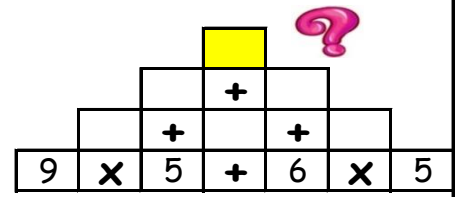
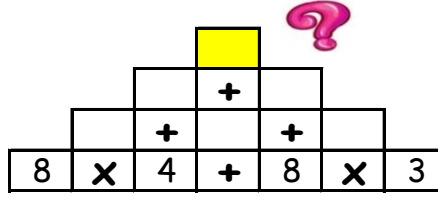
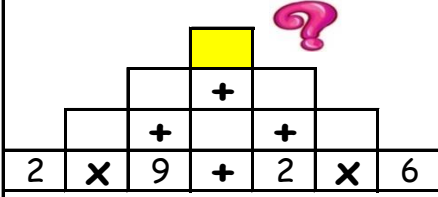
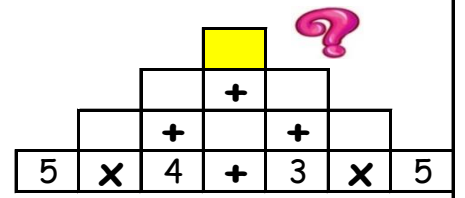
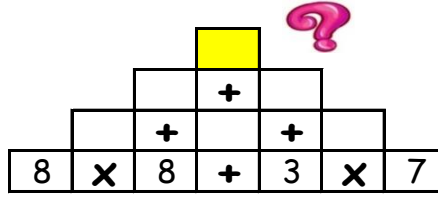

Piramitte işlemleri yaparak tepelerdeki sayıları bulun ve aşağıdan işaretleyin.



65 - 150 - 112 - 151 - 71 - 122 - 146

PİRAMİT İŞLEMLER (Zor)

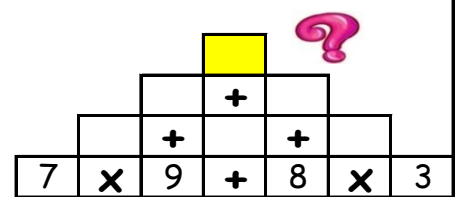
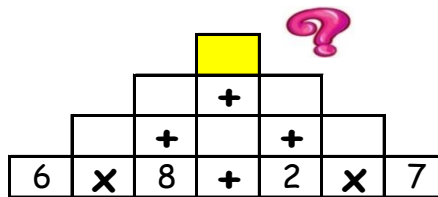
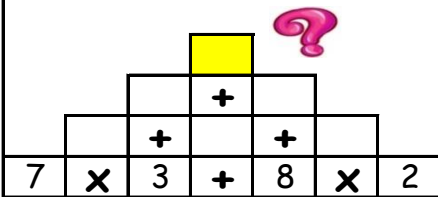
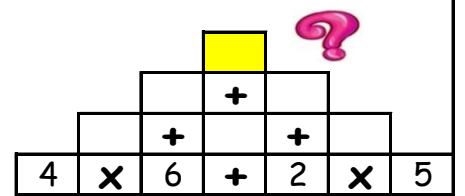
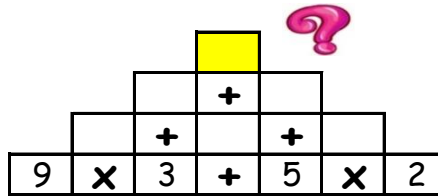

Piramitte işlemleri yaparak tepelerdeki sayıları bulun ve aşağıdan işaretleyin.



127 - 97 - 108 - 107 - 80 - 49 - 52

PİRAMİT İŞLEMLER (Zor)

Piramitte işlemleri yaparak tepelerdeki sayıları bulun ve aşağıdan işaretleyin.



63 - 50 - 121 - 82 - 89 - 53 - 59