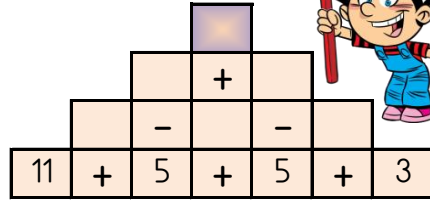
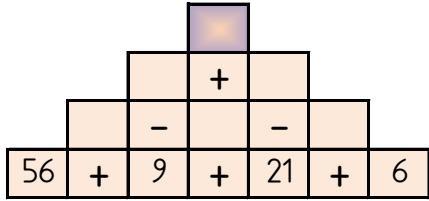
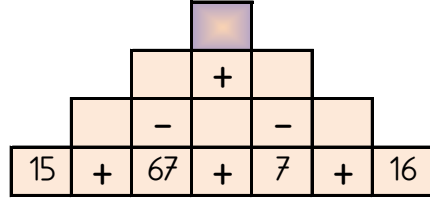
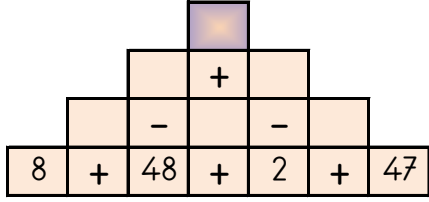


PIRAMİT TOPLAMA ÇIKARMA

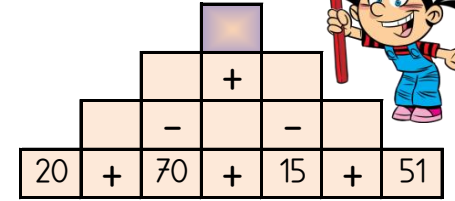
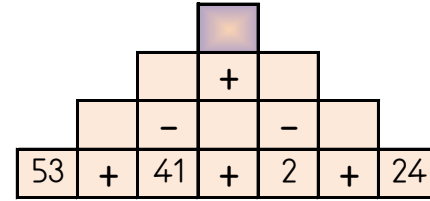
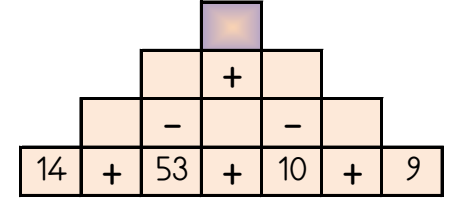
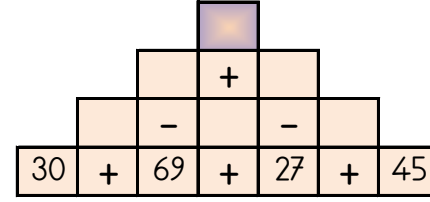
Sayılar arasındaki işlemleri yaparak piramitin tepesindeki sayıya ulaşın.



38 8 7 80 59

PIRAMİT TOPLAMA ÇIKARMA

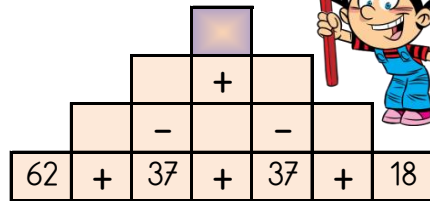
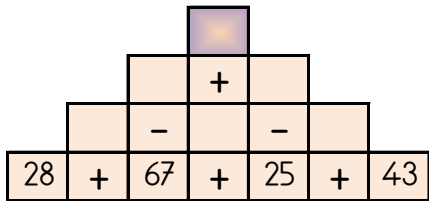
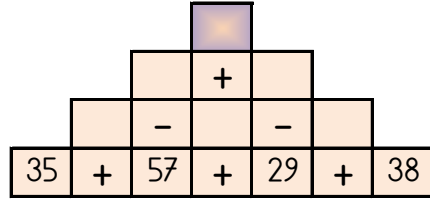
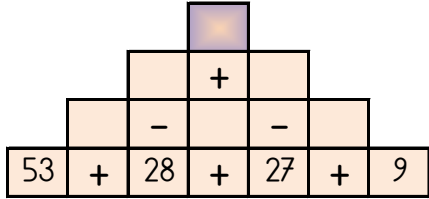
Sayılar arasındaki işlemleri yaparak piramitin tepesindeki sayıya ulaşın.



24 18 27 68 48

PIRAMİT TOPLAMA ÇIKARMA

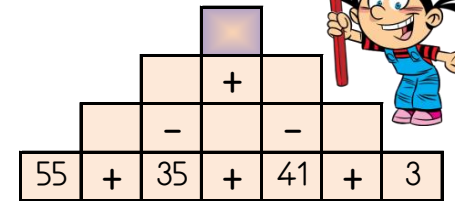
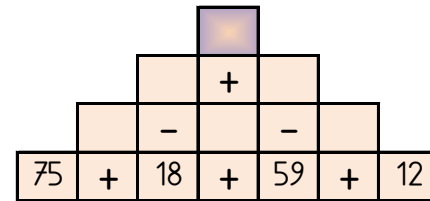
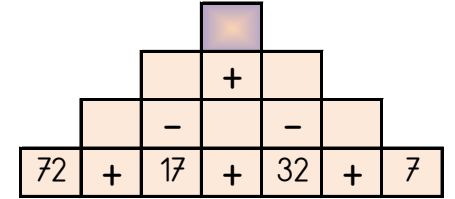
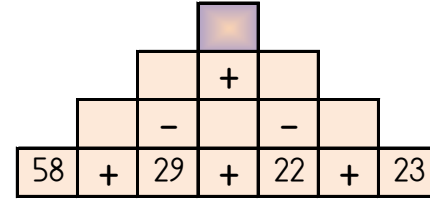
Sayılar arasındaki işlemleri yaparak piramitin tepesindeki sayıya ulaşın.



27 44 96 25 45

PIRAMİT TOPLAMA ÇIKARMA

Sayılar arasındaki işlemleri yaparak piramitin tepesindeki sayıya ulaşın.



22 50 46 42 55