

Sevgili öğrenciler; Aşağıdaki toplama işlemlerinde toplanan sayılardan biri verilmemiştir. Verilmeyen toplananı bulmak için toplamdan verilen toplanan sayıyı çıkartınız.

$\begin{array}{r} \text{....} \\ + 83 \\ \hline 87 \end{array}$	$\begin{array}{r} 9 \\ + \text{....} \\ \hline 25 \end{array}$	$\begin{array}{r} \text{....} \\ + 23 \\ \hline 27 \end{array}$	$\begin{array}{r} 7 \\ + \text{....} \\ \hline 36 \end{array}$
---	--	---	--

$\begin{array}{r} \text{....} \\ + 64 \\ \hline 71 \end{array}$	$\begin{array}{r} 16 \\ + \text{....} \\ \hline 95 \end{array}$	$\begin{array}{r} \text{....} \\ + 56 \\ \hline 84 \end{array}$	$\begin{array}{r} 7 \\ + \text{....} \\ \hline 12 \end{array}$
---	---	---	--

$\begin{array}{r} \text{....} \\ + 4 \\ \hline 14 \end{array}$	$\begin{array}{r} 4 \\ + \text{....} \\ \hline 13 \end{array}$	$\begin{array}{r} \text{....} \\ + 4 \\ \hline 19 \end{array}$	$\begin{array}{r} 11 \\ + \text{....} \\ \hline 43 \end{array}$
--	--	--	---

$\begin{array}{r} \text{....} \\ + 30 \\ \hline 63 \end{array}$	$\begin{array}{r} 49 \\ + \text{....} \\ \hline 65 \end{array}$	$\begin{array}{r} \text{....} \\ + 10 \\ \hline 15 \end{array}$	$\begin{array}{r} 7 \\ + \text{....} \\ \hline 60 \end{array}$
---	---	---	--

$\begin{array}{r} \text{....} \\ + 15 \\ \hline 33 \end{array}$	$\begin{array}{r} 76 \\ + \text{....} \\ \hline 82 \end{array}$	$\begin{array}{r} \text{....} \\ + 41 \\ \hline 83 \end{array}$	$\begin{array}{r} 6 \\ + \text{....} \\ \hline 12 \end{array}$
---	---	---	--

Sevgili öğrenciler; Aşağıdaki toplama işlemlerinde toplanan sayılardan biri verilmemiştir. Verilmeyen toplananı bulmak için toplamdan verilen toplanan sayıyı çıkartınız.

$\begin{array}{r} \text{....} \\ + 83 \\ \hline 87 \end{array}$	$\begin{array}{r} 9 \\ + \text{....} \\ \hline 25 \end{array}$	$\begin{array}{r} \text{....} \\ + 23 \\ \hline 27 \end{array}$	$\begin{array}{r} 7 \\ + \text{....} \\ \hline 36 \end{array}$
---	--	---	--

$\begin{array}{r} \text{....} \\ + 64 \\ \hline 71 \end{array}$	$\begin{array}{r} 16 \\ + \text{....} \\ \hline 95 \end{array}$	$\begin{array}{r} \text{....} \\ + 56 \\ \hline 84 \end{array}$	$\begin{array}{r} 7 \\ + \text{....} \\ \hline 12 \end{array}$
---	---	---	--

$\begin{array}{r} \text{....} \\ + 4 \\ \hline 14 \end{array}$	$\begin{array}{r} 4 \\ + \text{....} \\ \hline 13 \end{array}$	$\begin{array}{r} \text{....} \\ + 4 \\ \hline 19 \end{array}$	$\begin{array}{r} 11 \\ + \text{....} \\ \hline 43 \end{array}$
--	--	--	---

$\begin{array}{r} \text{....} \\ + 30 \\ \hline 63 \end{array}$	$\begin{array}{r} 49 \\ + \text{....} \\ \hline 65 \end{array}$	$\begin{array}{r} \text{....} \\ + 10 \\ \hline 15 \end{array}$	$\begin{array}{r} 7 \\ + \text{....} \\ \hline 60 \end{array}$
---	---	---	--

$\begin{array}{r} \text{....} \\ + 15 \\ \hline 33 \end{array}$	$\begin{array}{r} 76 \\ + \text{....} \\ \hline 82 \end{array}$	$\begin{array}{r} \text{....} \\ + 41 \\ \hline 83 \end{array}$	$\begin{array}{r} 6 \\ + \text{....} \\ \hline 12 \end{array}$
---	---	---	--

Adı: Soyadı:	<b>2.SINIF MATEMATİK DERSİ</b> <b>TOPLAMA İŞLEMİ</b>		
<p>Sevgili öğrenciler; Aşağıdaki toplama işlemlerinde toplanan sayılardan biri verilmemiştir. Verilmeyen toplananı bulmak için toplamdan verilen toplanan sayıyı çıkartınız.</p>			
$\begin{array}{r} \text{....} \\ + 14 \\ \hline 19 \end{array}$	$\begin{array}{r} 19 \\ + \text{....} \\ \hline 37 \end{array}$	$\begin{array}{r} \text{....} \\ + 35 \\ \hline 43 \end{array}$	$\begin{array}{r} 20 \\ + \text{....} \\ \hline 60 \end{array}$
$\begin{array}{r} \text{....} \\ + 1 \\ \hline 15 \end{array}$	$\begin{array}{r} 31 \\ + \text{....} \\ \hline 53 \end{array}$	$\begin{array}{r} \text{....} \\ + 26 \\ \hline 42 \end{array}$	$\begin{array}{r} 24 \\ + \text{....} \\ \hline 49 \end{array}$
$\begin{array}{r} \text{....} \\ + 59 \\ \hline 66 \end{array}$	$\begin{array}{r} 52 \\ + \text{....} \\ \hline 62 \end{array}$	$\begin{array}{r} \text{....} \\ + 37 \\ \hline 84 \end{array}$	$\begin{array}{r} 8 \\ + \text{....} \\ \hline 41 \end{array}$
$\begin{array}{r} \text{....} \\ + 16 \\ \hline 33 \end{array}$	$\begin{array}{r} 1 \\ + \text{....} \\ \hline 21 \end{array}$	$\begin{array}{r} \text{....} \\ + 75 \\ \hline 79 \end{array}$	$\begin{array}{r} 3 \\ + \text{....} \\ \hline 47 \end{array}$
$\begin{array}{r} \text{....} \\ + 29 \\ \hline 97 \end{array}$	$\begin{array}{r} 1 \\ + \text{....} \\ \hline 18 \end{array}$	$\begin{array}{r} \text{....} \\ + 36 \\ \hline 79 \end{array}$	$\begin{array}{r} 21 \\ + \text{....} \\ \hline 44 \end{array}$

Adı: Soyadı:	<b>2.SINIF MATEMATİK DERSİ</b> <b>TOPLAMA İŞLEMİ</b>		
<p>Sevgili öğrenciler; Aşağıdaki toplama işlemlerinde toplanan sayılardan biri verilmemiştir. Verilmeyen toplananı bulmak için toplamdan verilen toplanan sayıyı çıkartınız.</p>			
$\begin{array}{r} \text{....} \\ + 14 \\ \hline 19 \end{array}$	$\begin{array}{r} 19 \\ + \text{....} \\ \hline 37 \end{array}$	$\begin{array}{r} \text{....} \\ + 35 \\ \hline 43 \end{array}$	$\begin{array}{r} 20 \\ + \text{....} \\ \hline 60 \end{array}$
$\begin{array}{r} \text{....} \\ + 1 \\ \hline 15 \end{array}$	$\begin{array}{r} 31 \\ + \text{....} \\ \hline 53 \end{array}$	$\begin{array}{r} \text{....} \\ + 26 \\ \hline 42 \end{array}$	$\begin{array}{r} 24 \\ + \text{....} \\ \hline 49 \end{array}$
$\begin{array}{r} \text{....} \\ + 59 \\ \hline 66 \end{array}$	$\begin{array}{r} 52 \\ + \text{....} \\ \hline 62 \end{array}$	$\begin{array}{r} \text{....} \\ + 37 \\ \hline 84 \end{array}$	$\begin{array}{r} 8 \\ + \text{....} \\ \hline 41 \end{array}$
$\begin{array}{r} \text{....} \\ + 16 \\ \hline 33 \end{array}$	$\begin{array}{r} 1 \\ + \text{....} \\ \hline 21 \end{array}$	$\begin{array}{r} \text{....} \\ + 75 \\ \hline 79 \end{array}$	$\begin{array}{r} 3 \\ + \text{....} \\ \hline 47 \end{array}$
$\begin{array}{r} \text{....} \\ + 29 \\ \hline 97 \end{array}$	$\begin{array}{r} 1 \\ + \text{....} \\ \hline 18 \end{array}$	$\begin{array}{r} \text{....} \\ + 36 \\ \hline 79 \end{array}$	$\begin{array}{r} 21 \\ + \text{....} \\ \hline 44 \end{array}$

Adı: Soyadı:	<b>2.SINIF MATEMATİK DERSİ</b> <b>TOPLAMA İŞLEMİ</b>		
<p>Sevgili öğrenciler; Aşağıdaki toplama işlemlerinde toplanan sayılardan biri verilmemiştir. Verilmeyen toplananı bulmak için toplamdan verilen toplanan sayıyı çıkartınız.</p>			
$\begin{array}{r} \text{....} \\ + \quad 34 \\ \hline 66 \end{array}$	$\begin{array}{r} 16 \\ + \quad \text{....} \\ \hline 48 \end{array}$	$\begin{array}{r} \text{....} \\ + \quad 41 \\ \hline 76 \end{array}$	$\begin{array}{r} \text{....} \\ + \quad \text{....} \\ \hline 82 \end{array}$
$\begin{array}{r} \text{....} \\ + \quad 7 \\ \hline 41 \end{array}$	$\begin{array}{r} 12 \\ + \quad \text{....} \\ \hline 34 \end{array}$	$\begin{array}{r} \text{....} \\ + \quad 14 \\ \hline 46 \end{array}$	$\begin{array}{r} 2 \\ + \quad \text{....} \\ \hline 72 \end{array}$
$\begin{array}{r} \text{....} \\ + \quad 16 \\ \hline 21 \end{array}$	$\begin{array}{r} 66 \\ + \quad \text{....} \\ \hline 67 \end{array}$	$\begin{array}{r} \text{....} \\ + \quad 18 \\ \hline 91 \end{array}$	$\begin{array}{r} 10 \\ + \quad \text{....} \\ \hline 23 \end{array}$
$\begin{array}{r} \text{....} \\ + \quad 25 \\ \hline 60 \end{array}$	$\begin{array}{r} 91 \\ + \quad \text{....} \\ \hline 98 \end{array}$	$\begin{array}{r} \text{....} \\ + \quad 35 \\ \hline 69 \end{array}$	$\begin{array}{r} 19 \\ + \quad \text{....} \\ \hline 66 \end{array}$
$\begin{array}{r} \text{....} \\ + \quad 44 \\ \hline 48 \end{array}$	$\begin{array}{r} 10 \\ + \quad \text{....} \\ \hline 14 \end{array}$	$\begin{array}{r} \text{....} \\ + \quad 6 \\ \hline 30 \end{array}$	$\begin{array}{r} 51 \\ + \quad \text{....} \\ \hline 63 \end{array}$

Adı: Soyadı:	<b>2.SINIF MATEMATİK DERSİ</b> <b>TOPLAMA İŞLEMİ</b>		
<p>Sevgili öğrenciler; Aşağıdaki toplama işlemlerinde toplanan sayılardan biri verilmemiştir. Verilmeyen toplananı bulmak için toplamdan verilen toplanan sayıyı çıkartınız.</p>			
$\begin{array}{r} \text{....} \\ + \quad 34 \\ \hline 66 \end{array}$	$\begin{array}{r} 16 \\ + \quad \text{....} \\ \hline 48 \end{array}$	$\begin{array}{r} \text{....} \\ + \quad 41 \\ \hline 76 \end{array}$	$\begin{array}{r} \text{....} \\ + \quad \text{....} \\ \hline 82 \end{array}$
$\begin{array}{r} \text{....} \\ + \quad 7 \\ \hline 41 \end{array}$	$\begin{array}{r} 12 \\ + \quad \text{....} \\ \hline 34 \end{array}$	$\begin{array}{r} \text{....} \\ + \quad 14 \\ \hline 46 \end{array}$	$\begin{array}{r} 2 \\ + \quad \text{....} \\ \hline 72 \end{array}$
$\begin{array}{r} \text{....} \\ + \quad 16 \\ \hline 21 \end{array}$	$\begin{array}{r} 66 \\ + \quad \text{....} \\ \hline 67 \end{array}$	$\begin{array}{r} \text{....} \\ + \quad 18 \\ \hline 91 \end{array}$	$\begin{array}{r} 10 \\ + \quad \text{....} \\ \hline 23 \end{array}$
$\begin{array}{r} \text{....} \\ + \quad 25 \\ \hline 60 \end{array}$	$\begin{array}{r} 91 \\ + \quad \text{....} \\ \hline 98 \end{array}$	$\begin{array}{r} \text{....} \\ + \quad 35 \\ \hline 69 \end{array}$	$\begin{array}{r} 19 \\ + \quad \text{....} \\ \hline 66 \end{array}$
$\begin{array}{r} \text{....} \\ + \quad 44 \\ \hline 48 \end{array}$	$\begin{array}{r} 10 \\ + \quad \text{....} \\ \hline 14 \end{array}$	$\begin{array}{r} \text{....} \\ + \quad 6 \\ \hline 30 \end{array}$	$\begin{array}{r} 51 \\ + \quad \text{....} \\ \hline 63 \end{array}$

Adı: Soyadı:	<b>2.SINIF MATEMATİK DERSİ</b> <b>TOPLAMA İŞLEMİ</b>	
-----------------	---	---

Sevgili öğrenciler; Aşağıdaki toplama işlemlerinde toplanan sayılardan biri verilmemiştir.  
Verilmeyen toplananı bulmak için toplamdan verilen toplanan sayıyı çıkartınız.

$\begin{array}{r} \text{....} \\ + 18 \\ \hline 22 \end{array}$	$\begin{array}{r} 21 \\ + \text{....} \\ \hline 35 \end{array}$	$\begin{array}{r} \text{....} \\ + 42 \\ \hline 90 \end{array}$	$\begin{array}{r} 2 \\ + \text{....} \\ \hline 15 \end{array}$
---	---	---	--

$\begin{array}{r} \text{....} \\ + 7 \\ \hline 25 \end{array}$	$\begin{array}{r} 20 \\ + \text{....} \\ \hline 56 \end{array}$	$\begin{array}{r} \text{....} \\ + 16 \\ \hline 34 \end{array}$	$\begin{array}{r} 46 \\ + \text{....} \\ \hline 50 \end{array}$
--	---	---	---

$\begin{array}{r} \text{....} \\ + 6 \\ \hline 23 \end{array}$	$\begin{array}{r} 30 \\ + \text{....} \\ \hline 74 \end{array}$	$\begin{array}{r} \text{....} \\ + 11 \\ \hline 94 \end{array}$	$\begin{array}{r} 10 \\ + \text{....} \\ \hline 84 \end{array}$
--	---	---	---

$\begin{array}{r} \text{....} \\ + 26 \\ \hline 52 \end{array}$	$\begin{array}{r} 3 \\ + \text{....} \\ \hline 32 \end{array}$	$\begin{array}{r} \text{....} \\ + 40 \\ \hline 43 \end{array}$	$\begin{array}{r} 12 \\ + \text{....} \\ \hline 28 \end{array}$
---	--	---	---

$\begin{array}{r} \text{....} \\ + 1 \\ \hline 16 \end{array}$	$\begin{array}{r} 58 \\ + \text{....} \\ \hline 84 \end{array}$	$\begin{array}{r} \text{....} \\ + 13 \\ \hline 22 \end{array}$	$\begin{array}{r} 66 \\ + \text{....} \\ \hline 79 \end{array}$
--	---	---	---

Adı: Soyadı:	<b>2.SINIF MATEMATİK DERSİ</b> <b>TOPLAMA İŞLEMİ</b>	
-----------------	---	--

Sevgili öğrenciler; Aşağıdaki toplama işlemlerinde toplanan sayılardan biri verilmemiştir.  
Verilmeyen toplananı bulmak için toplamdan verilen toplanan sayıyı çıkartınız.

$\begin{array}{r} \text{....} \\ + 18 \\ \hline 22 \end{array}$	$\begin{array}{r} 21 \\ + \text{....} \\ \hline 35 \end{array}$	$\begin{array}{r} \text{....} \\ + 42 \\ \hline 90 \end{array}$	$\begin{array}{r} 2 \\ + \text{....} \\ \hline 15 \end{array}$
---	---	---	--

$\begin{array}{r} \text{....} \\ + 7 \\ \hline 25 \end{array}$	$\begin{array}{r} 20 \\ + \text{....} \\ \hline 56 \end{array}$	$\begin{array}{r} \text{....} \\ + 16 \\ \hline 34 \end{array}$	$\begin{array}{r} 46 \\ + \text{....} \\ \hline 50 \end{array}$
--	---	---	---

$\begin{array}{r} \text{....} \\ + 6 \\ \hline 23 \end{array}$	$\begin{array}{r} 30 \\ + \text{....} \\ \hline 74 \end{array}$	$\begin{array}{r} \text{....} \\ + 11 \\ \hline 94 \end{array}$	$\begin{array}{r} 10 \\ + \text{....} \\ \hline 84 \end{array}$
--	---	---	---

$\begin{array}{r} \text{....} \\ + 26 \\ \hline 52 \end{array}$	$\begin{array}{r} 3 \\ + \text{....} \\ \hline 32 \end{array}$	$\begin{array}{r} \text{....} \\ + 40 \\ \hline 43 \end{array}$	$\begin{array}{r} 12 \\ + \text{....} \\ \hline 28 \end{array}$
---	--	---	---

$\begin{array}{r} \text{....} \\ + 1 \\ \hline 16 \end{array}$	$\begin{array}{r} 58 \\ + \text{....} \\ \hline 84 \end{array}$	$\begin{array}{r} \text{....} \\ + 13 \\ \hline 22 \end{array}$	$\begin{array}{r} 66 \\ + \text{....} \\ \hline 79 \end{array}$
--	---	---	---

Sevgili öğrenciler; Aşağıdaki toplama işlemlerinde toplanan sayılardan biri verilmemiştir.  
Verilmeyen toplananı bulmak için toplamdan verilen toplanan sayıyı çıkartınız.

$\begin{array}{r} \text{....} \\ + 82 \\ \hline 95 \end{array}$	$\begin{array}{r} 20 \\ + \text{....} \\ \hline 50 \end{array}$	$\begin{array}{r} \text{....} \\ + 6 \\ \hline 16 \end{array}$	$\begin{array}{r} \text{....} \\ + 3 \\ \hline 44 \end{array}$
---	---	--	--

$\begin{array}{r} \text{....} \\ + 17 \\ \hline 70 \end{array}$	$\begin{array}{r} 35 \\ + \text{....} \\ \hline 75 \end{array}$	$\begin{array}{r} \text{....} \\ + 5 \\ \hline 46 \end{array}$	$\begin{array}{r} 15 \\ + \text{....} \\ \hline 26 \end{array}$
---	---	--	---

$\begin{array}{r} \text{....} \\ + 10 \\ \hline 16 \end{array}$	$\begin{array}{r} 12 \\ + \text{....} \\ \hline 20 \end{array}$	$\begin{array}{r} \text{....} \\ + 39 \\ \hline 74 \end{array}$	$\begin{array}{r} 17 \\ + \text{....} \\ \hline 22 \end{array}$
---	---	---	---

$\begin{array}{r} \text{....} \\ + 59 \\ \hline 88 \end{array}$	$\begin{array}{r} 22 \\ + \text{....} \\ \hline 77 \end{array}$	$\begin{array}{r} \text{....} \\ + 24 \\ \hline 79 \end{array}$	$\begin{array}{r} 29 \\ + \text{....} \\ \hline 37 \end{array}$
---	---	---	---

$\begin{array}{r} \text{....} \\ + 97 \\ \hline 99 \end{array}$	$\begin{array}{r} 41 \\ + \text{....} \\ \hline 73 \end{array}$	$\begin{array}{r} \text{....} \\ + 51 \\ \hline 64 \end{array}$	$\begin{array}{r} 62 \\ + \text{....} \\ \hline 84 \end{array}$
---	---	---	---

Sevgili öğrenciler; Aşağıdaki toplama işlemlerinde toplanan sayılardan biri verilmemiştir.  
Verilmeyen toplananı bulmak için toplamdan verilen toplanan sayıyı çıkartınız.

$\begin{array}{r} \text{....} \\ + 82 \\ \hline 95 \end{array}$	$\begin{array}{r} 20 \\ + \text{....} \\ \hline 50 \end{array}$	$\begin{array}{r} \text{....} \\ + 6 \\ \hline 16 \end{array}$	$\begin{array}{r} \text{....} \\ + 3 \\ \hline 44 \end{array}$
---	---	--	--

$\begin{array}{r} \text{....} \\ + 17 \\ \hline 70 \end{array}$	$\begin{array}{r} 35 \\ + \text{....} \\ \hline 75 \end{array}$	$\begin{array}{r} \text{....} \\ + 5 \\ \hline 46 \end{array}$	$\begin{array}{r} 15 \\ + \text{....} \\ \hline 26 \end{array}$
---	---	--	---

$\begin{array}{r} \text{....} \\ + 10 \\ \hline 16 \end{array}$	$\begin{array}{r} 12 \\ + \text{....} \\ \hline 20 \end{array}$	$\begin{array}{r} \text{....} \\ + 39 \\ \hline 74 \end{array}$	$\begin{array}{r} 17 \\ + \text{....} \\ \hline 22 \end{array}$
---	---	---	---

$\begin{array}{r} \text{....} \\ + 59 \\ \hline 88 \end{array}$	$\begin{array}{r} 22 \\ + \text{....} \\ \hline 77 \end{array}$	$\begin{array}{r} \text{....} \\ + 24 \\ \hline 79 \end{array}$	$\begin{array}{r} 29 \\ + \text{....} \\ \hline 37 \end{array}$
---	---	---	---

$\begin{array}{r} \text{....} \\ + 97 \\ \hline 99 \end{array}$	$\begin{array}{r} 41 \\ + \text{....} \\ \hline 73 \end{array}$	$\begin{array}{r} \text{....} \\ + 51 \\ \hline 64 \end{array}$	$\begin{array}{r} 62 \\ + \text{....} \\ \hline 84 \end{array}$
---	---	---	---

Sevgili öğrenciler; Aşağıdaki toplama işlemlerinde toplanan sayılardan biri verilmemiştir. Verilmeyen toplananı bulmak için toplamdan verilen toplanan sayıyı çıkartınız.

$\begin{array}{r} \text{....} \\ + 44 \\ \hline 49 \end{array}$	$\begin{array}{r} 41 \\ + \text{....} \\ \hline 43 \end{array}$	$\begin{array}{r} \text{....} \\ + 5 \\ \hline 25 \end{array}$	$\begin{array}{r} \text{....} \\ + \text{....} \\ \hline 92 \end{array}$
---	---	--	--

$\begin{array}{r} \text{....} \\ + 12 \\ \hline 62 \end{array}$	$\begin{array}{r} 11 \\ + \text{....} \\ \hline 24 \end{array}$	$\begin{array}{r} \text{....} \\ + 33 \\ \hline 50 \end{array}$	$\begin{array}{r} 2 \\ + \text{....} \\ \hline 12 \end{array}$
---	---	---	--

$\begin{array}{r} \text{....} \\ + 36 \\ \hline 69 \end{array}$	$\begin{array}{r} 49 \\ + \text{....} \\ \hline 60 \end{array}$	$\begin{array}{r} \text{....} \\ + 16 \\ \hline 52 \end{array}$	$\begin{array}{r} 22 \\ + \text{....} \\ \hline 39 \end{array}$
---	---	---	---

$\begin{array}{r} \text{....} \\ + 23 \\ \hline 25 \end{array}$	$\begin{array}{r} 46 \\ + \text{....} \\ \hline 51 \end{array}$	$\begin{array}{r} \text{....} \\ + 9 \\ \hline 21 \end{array}$	$\begin{array}{r} 27 \\ + \text{....} \\ \hline 91 \end{array}$
---	---	--	---

$\begin{array}{r} \text{....} \\ + 17 \\ \hline 24 \end{array}$	$\begin{array}{r} 30 \\ + \text{....} \\ \hline 96 \end{array}$	$\begin{array}{r} \text{....} \\ + 37 \\ \hline 73 \end{array}$	$\begin{array}{r} 4 \\ + \text{....} \\ \hline 12 \end{array}$
---	---	---	--

Sevgili öğrenciler; Aşağıdaki toplama işlemlerinde toplanan sayılardan biri verilmemiştir. Verilmeyen toplananı bulmak için toplamdan verilen toplanan sayıyı çıkartınız.

$\begin{array}{r} \text{....} \\ + 44 \\ \hline 49 \end{array}$	$\begin{array}{r} 41 \\ + \text{....} \\ \hline 43 \end{array}$	$\begin{array}{r} \text{....} \\ + 5 \\ \hline 25 \end{array}$	$\begin{array}{r} \text{....} \\ + \text{....} \\ \hline 92 \end{array}$
---	---	--	--

$\begin{array}{r} \text{....} \\ + 12 \\ \hline 62 \end{array}$	$\begin{array}{r} 11 \\ + \text{....} \\ \hline 24 \end{array}$	$\begin{array}{r} \text{....} \\ + 33 \\ \hline 50 \end{array}$	$\begin{array}{r} 2 \\ + \text{....} \\ \hline 12 \end{array}$
---	---	---	--

$\begin{array}{r} \text{....} \\ + 36 \\ \hline 69 \end{array}$	$\begin{array}{r} 49 \\ + \text{....} \\ \hline 60 \end{array}$	$\begin{array}{r} \text{....} \\ + 16 \\ \hline 52 \end{array}$	$\begin{array}{r} 22 \\ + \text{....} \\ \hline 39 \end{array}$
---	---	---	---

$\begin{array}{r} \text{....} \\ + 23 \\ \hline 25 \end{array}$	$\begin{array}{r} 46 \\ + \text{....} \\ \hline 51 \end{array}$	$\begin{array}{r} \text{....} \\ + 9 \\ \hline 21 \end{array}$	$\begin{array}{r} 27 \\ + \text{....} \\ \hline 91 \end{array}$
---	---	--	---

$\begin{array}{r} \text{....} \\ + 17 \\ \hline 24 \end{array}$	$\begin{array}{r} 30 \\ + \text{....} \\ \hline 96 \end{array}$	$\begin{array}{r} \text{....} \\ + 37 \\ \hline 73 \end{array}$	$\begin{array}{r} 4 \\ + \text{....} \\ \hline 12 \end{array}$
---	---	---	--

Sevgili öğrenciler; Aşağıdaki toplama işlemlerinde toplanan sayılardan biri verilmemiştir. Verilmeyen toplananı bulmak için toplamdan verilen toplanan sayıyı çıkartınız.

$\begin{array}{r} \text{....} \\ + 11 \\ \hline 51 \end{array}$	$\begin{array}{r} 33 \\ + \text{....} \\ \hline 50 \end{array}$	$\begin{array}{r} \text{....} \\ + 5 \\ \hline 81 \end{array}$	$\begin{array}{r} 9 \\ + \text{....} \\ \hline 97 \end{array}$
---	---	--	--

$\begin{array}{r} \text{....} \\ + 37 \\ \hline 45 \end{array}$	$\begin{array}{r} 11 \\ + \text{....} \\ \hline 17 \end{array}$	$\begin{array}{r} \text{....} \\ + 50 \\ \hline 52 \end{array}$	$\begin{array}{r} 62 \\ + \text{....} \\ \hline 94 \end{array}$
---	---	---	---

$\begin{array}{r} \text{....} \\ + 9 \\ \hline 10 \end{array}$	$\begin{array}{r} 1 \\ + \text{....} \\ \hline 12 \end{array}$	$\begin{array}{r} \text{....} \\ + 18 \\ \hline 28 \end{array}$	$\begin{array}{r} 19 \\ + \text{....} \\ \hline 27 \end{array}$
--	--	---	---

$\begin{array}{r} \text{....} \\ + 28 \\ \hline 93 \end{array}$	$\begin{array}{r} 52 \\ + \text{....} \\ \hline 70 \end{array}$	$\begin{array}{r} \text{....} \\ + 61 \\ \hline 77 \end{array}$	$\begin{array}{r} 70 \\ + \text{....} \\ \hline 76 \end{array}$
---	---	---	---

$\begin{array}{r} \text{....} \\ + 51 \\ \hline 95 \end{array}$	$\begin{array}{r} 14 \\ + \text{....} \\ \hline 15 \end{array}$	$\begin{array}{r} \text{....} \\ + 27 \\ \hline 35 \end{array}$	$\begin{array}{r} 48 \\ + \text{....} \\ \hline 91 \end{array}$
---	---	---	---

Sevgili öğrenciler; Aşağıdaki toplama işlemlerinde toplanan sayılardan biri verilmemiştir. Verilmeyen toplananı bulmak için toplamdan verilen toplanan sayıyı çıkartınız.

$\begin{array}{r} \text{....} \\ + 11 \\ \hline 51 \end{array}$	$\begin{array}{r} 33 \\ + \text{....} \\ \hline 50 \end{array}$	$\begin{array}{r} \text{....} \\ + 5 \\ \hline 81 \end{array}$	$\begin{array}{r} 9 \\ + \text{....} \\ \hline 97 \end{array}$
---	---	--	--

$\begin{array}{r} \text{....} \\ + 37 \\ \hline 45 \end{array}$	$\begin{array}{r} 11 \\ + \text{....} \\ \hline 17 \end{array}$	$\begin{array}{r} \text{....} \\ + 50 \\ \hline 52 \end{array}$	$\begin{array}{r} 62 \\ + \text{....} \\ \hline 94 \end{array}$
---	---	---	---

$\begin{array}{r} \text{....} \\ + 9 \\ \hline 10 \end{array}$	$\begin{array}{r} 1 \\ + \text{....} \\ \hline 12 \end{array}$	$\begin{array}{r} \text{....} \\ + 18 \\ \hline 28 \end{array}$	$\begin{array}{r} 19 \\ + \text{....} \\ \hline 27 \end{array}$
--	--	---	---

$\begin{array}{r} \text{....} \\ + 28 \\ \hline 93 \end{array}$	$\begin{array}{r} 52 \\ + \text{....} \\ \hline 70 \end{array}$	$\begin{array}{r} \text{....} \\ + 61 \\ \hline 77 \end{array}$	$\begin{array}{r} 70 \\ + \text{....} \\ \hline 76 \end{array}$
---	---	---	---

$\begin{array}{r} \text{....} \\ + 51 \\ \hline 95 \end{array}$	$\begin{array}{r} 14 \\ + \text{....} \\ \hline 15 \end{array}$	$\begin{array}{r} \text{....} \\ + 27 \\ \hline 35 \end{array}$	$\begin{array}{r} 48 \\ + \text{....} \\ \hline 91 \end{array}$
---	---	---	---

Adı: Soyadı:	<b>2.SINIF MATEMATİK DERSİ</b> <b>TOPLAMA İŞLEMİ</b>	
-----------------	---	---

Sevgili öğrenciler; Aşağıdaki toplama işlemlerinde toplanan sayılardan biri verilmemiştir.  
Verilmeyen toplananı bulmak için toplamdan verilen toplanan sayıyı çıkartınız.

$$\begin{array}{r} \text{....} \\ + 74 \\ \hline 80 \end{array}$$
$$\begin{array}{r} 45 \\ + \text{....} \\ \hline 68 \end{array}$$
$$\begin{array}{r} \text{....} \\ + 32 \\ \hline 72 \end{array}$$
$$\begin{array}{r} 12 \\ + \text{....} \\ \hline 13 \end{array}$$

$$\begin{array}{r} \text{....} \\ + 49 \\ \hline 63 \end{array}$$
$$\begin{array}{r} 35 \\ + \text{....} \\ \hline 36 \end{array}$$
$$\begin{array}{r} \text{....} \\ + 1 \\ \hline 46 \end{array}$$
$$\begin{array}{r} 19 \\ + \text{....} \\ \hline 60 \end{array}$$

$$\begin{array}{r} \text{....} \\ + 52 \\ \hline 78 \end{array}$$
$$\begin{array}{r} 16 \\ + \text{....} \\ \hline 17 \end{array}$$
$$\begin{array}{r} \text{....} \\ + 39 \\ \hline 40 \end{array}$$
$$\begin{array}{r} 11 \\ + \text{....} \\ \hline 26 \end{array}$$

$$\begin{array}{r} \text{....} \\ + 14 \\ \hline 32 \end{array}$$
$$\begin{array}{r} 63 \\ + \text{....} \\ \hline 86 \end{array}$$
$$\begin{array}{r} \text{....} \\ + 74 \\ \hline 83 \end{array}$$
$$\begin{array}{r} 1 \\ + \text{....} \\ \hline 26 \end{array}$$

$$\begin{array}{r} \text{....} \\ + 59 \\ \hline 86 \end{array}$$
$$\begin{array}{r} 47 \\ + \text{....} \\ \hline 82 \end{array}$$
$$\begin{array}{r} \text{....} \\ + 8 \\ \hline 96 \end{array}$$
$$\begin{array}{r} 3 \\ + \text{....} \\ \hline 46 \end{array}$$

Adı: Soyadı:	<b>2.SINIF MATEMATİK DERSİ</b> <b>TOPLAMA İŞLEMİ</b>	
-----------------	---	--

Sevgili öğrenciler; Aşağıdaki toplama işlemlerinde toplanan sayılardan biri verilmemiştir.  
Verilmeyen toplananı bulmak için toplamdan verilen toplanan sayıyı çıkartınız.

$$\begin{array}{r} \text{....} \\ + 74 \\ \hline 80 \end{array}$$
$$\begin{array}{r} 45 \\ + \text{....} \\ \hline 68 \end{array}$$
$$\begin{array}{r} \text{....} \\ + 32 \\ \hline 72 \end{array}$$
$$\begin{array}{r} 12 \\ + \text{....} \\ \hline 13 \end{array}$$

$$\begin{array}{r} \text{....} \\ + 49 \\ \hline 63 \end{array}$$
$$\begin{array}{r} 35 \\ + \text{....} \\ \hline 36 \end{array}$$
$$\begin{array}{r} \text{....} \\ + 1 \\ \hline 46 \end{array}$$
$$\begin{array}{r} 19 \\ + \text{....} \\ \hline 60 \end{array}$$

$$\begin{array}{r} \text{....} \\ + 52 \\ \hline 78 \end{array}$$
$$\begin{array}{r} 16 \\ + \text{....} \\ \hline 17 \end{array}$$
$$\begin{array}{r} \text{....} \\ + 39 \\ \hline 40 \end{array}$$
$$\begin{array}{r} 11 \\ + \text{....} \\ \hline 26 \end{array}$$

$$\begin{array}{r} \text{....} \\ + 14 \\ \hline 32 \end{array}$$
$$\begin{array}{r} 63 \\ + \text{....} \\ \hline 86 \end{array}$$
$$\begin{array}{r} \text{....} \\ + 74 \\ \hline 83 \end{array}$$
$$\begin{array}{r} 1 \\ + \text{....} \\ \hline 26 \end{array}$$

$$\begin{array}{r} \text{....} \\ + 59 \\ \hline 86 \end{array}$$
$$\begin{array}{r} 47 \\ + \text{....} \\ \hline 82 \end{array}$$
$$\begin{array}{r} \text{....} \\ + 8 \\ \hline 96 \end{array}$$
$$\begin{array}{r} 3 \\ + \text{....} \\ \hline 46 \end{array}$$



Sevgili öğrenciler; Aşağıdaki toplama işlemlerinde toplanan sayılardan biri verilmemiştir. Verilmeyen toplananı bulmak için toplamdan verilen toplanan sayıyı çıkartınız.

$\begin{array}{r} \text{....} \\ + 18 \\ \hline 28 \end{array}$	$\begin{array}{r} 39 \\ + \text{....} \\ \hline 51 \end{array}$	$\begin{array}{r} \text{....} \\ + 65 \\ \hline 74 \end{array}$	$\begin{array}{r} 60 \\ + \text{....} \\ \hline 82 \end{array}$
---	---	---	---

$\begin{array}{r} \text{....} \\ + 37 \\ \hline 92 \end{array}$	$\begin{array}{r} 17 \\ + \text{....} \\ \hline 33 \end{array}$	$\begin{array}{r} \text{....} \\ + 25 \\ \hline 36 \end{array}$	$\begin{array}{r} 42 \\ + \text{....} \\ \hline 44 \end{array}$
---	---	---	---

$\begin{array}{r} \text{....} \\ + 42 \\ \hline 60 \end{array}$	$\begin{array}{r} 3 \\ + \text{....} \\ \hline 19 \end{array}$	$\begin{array}{r} \text{....} \\ + 17 \\ \hline 46 \end{array}$	$\begin{array}{r} 24 \\ + \text{....} \\ \hline 47 \end{array}$
---	--	---	---

$\begin{array}{r} \text{....} \\ + 18 \\ \hline 25 \end{array}$	$\begin{array}{r} 8 \\ + \text{....} \\ \hline 97 \end{array}$	$\begin{array}{r} \text{....} \\ + 31 \\ \hline 70 \end{array}$	$\begin{array}{r} 31 \\ + \text{....} \\ \hline 52 \end{array}$
---	--	---	---

$\begin{array}{r} \text{....} \\ + 12 \\ \hline 27 \end{array}$	$\begin{array}{r} 26 \\ + \text{....} \\ \hline 62 \end{array}$	$\begin{array}{r} \text{....} \\ + 9 \\ \hline 13 \end{array}$	$\begin{array}{r} 4 \\ + \text{....} \\ \hline 12 \end{array}$
---	---	--	--

Sevgili öğrenciler; Aşağıdaki toplama işlemlerinde toplanan sayılardan biri verilmemiştir. Verilmeyen toplananı bulmak için toplamdan verilen toplanan sayıyı çıkartınız.

$\begin{array}{r} \text{....} \\ + 18 \\ \hline 28 \end{array}$	$\begin{array}{r} 39 \\ + \text{....} \\ \hline 51 \end{array}$	$\begin{array}{r} \text{....} \\ + 65 \\ \hline 74 \end{array}$	$\begin{array}{r} 60 \\ + \text{....} \\ \hline 82 \end{array}$
---	---	---	---

$\begin{array}{r} \text{....} \\ + 37 \\ \hline 92 \end{array}$	$\begin{array}{r} 17 \\ + \text{....} \\ \hline 33 \end{array}$	$\begin{array}{r} \text{....} \\ + 25 \\ \hline 36 \end{array}$	$\begin{array}{r} 42 \\ + \text{....} \\ \hline 44 \end{array}$
---	---	---	---

$\begin{array}{r} \text{....} \\ + 42 \\ \hline 60 \end{array}$	$\begin{array}{r} 3 \\ + \text{....} \\ \hline 19 \end{array}$	$\begin{array}{r} \text{....} \\ + 17 \\ \hline 46 \end{array}$	$\begin{array}{r} 24 \\ + \text{....} \\ \hline 47 \end{array}$
---	--	---	---

$\begin{array}{r} \text{....} \\ + 18 \\ \hline 25 \end{array}$	$\begin{array}{r} 8 \\ + \text{....} \\ \hline 97 \end{array}$	$\begin{array}{r} \text{....} \\ + 31 \\ \hline 70 \end{array}$	$\begin{array}{r} 31 \\ + \text{....} \\ \hline 52 \end{array}$
---	--	---	---

$\begin{array}{r} \text{....} \\ + 12 \\ \hline 27 \end{array}$	$\begin{array}{r} 26 \\ + \text{....} \\ \hline 62 \end{array}$	$\begin{array}{r} \text{....} \\ + 9 \\ \hline 13 \end{array}$	$\begin{array}{r} 4 \\ + \text{....} \\ \hline 12 \end{array}$
---	---	--	--

Sevgili öğrenciler; Aşağıdaki toplama işlemlerinde toplanan sayılardan biri verilmemiştir. Verilmeyen toplananı bulmak için toplamdan verilen toplanan sayıyı çıkartınız.

$\begin{array}{r} \text{....} \\ + 53 \\ \hline 58 \end{array}$	$\begin{array}{r} 31 \\ + \text{....} \\ \hline 33 \end{array}$	$\begin{array}{r} \text{....} \\ + 14 \\ \hline 17 \end{array}$	$\begin{array}{r} \text{....} \\ + \text{....} \\ \hline 60 \end{array}$
---	---	---	--

$\begin{array}{r} \text{....} \\ + 41 \\ \hline 83 \end{array}$	$\begin{array}{r} 74 \\ + \text{....} \\ \hline 93 \end{array}$	$\begin{array}{r} \text{....} \\ + 7 \\ \hline 61 \end{array}$	$\begin{array}{r} 52 \\ + \text{....} \\ \hline 64 \end{array}$
---	---	--	---

$\begin{array}{r} \text{....} \\ + 6 \\ \hline 71 \end{array}$	$\begin{array}{r} 41 \\ + \text{....} \\ \hline 47 \end{array}$	$\begin{array}{r} \text{....} \\ + 8 \\ \hline 30 \end{array}$	$\begin{array}{r} 50 \\ + \text{....} \\ \hline 59 \end{array}$
--	---	--	---

$\begin{array}{r} \text{....} \\ + 52 \\ \hline 53 \end{array}$	$\begin{array}{r} 10 \\ + \text{....} \\ \hline 82 \end{array}$	$\begin{array}{r} \text{....} \\ + 8 \\ \hline 58 \end{array}$	$\begin{array}{r} 50 \\ + \text{....} \\ \hline 76 \end{array}$
---	---	--	---

$\begin{array}{r} \text{....} \\ + 37 \\ \hline 61 \end{array}$	$\begin{array}{r} 5 \\ + \text{....} \\ \hline 24 \end{array}$	$\begin{array}{r} \text{....} \\ + 9 \\ \hline 91 \end{array}$	$\begin{array}{r} 2 \\ + \text{....} \\ \hline 35 \end{array}$
---	--	--	--

Sevgili öğrenciler; Aşağıdaki toplama işlemlerinde toplanan sayılardan biri verilmemiştir. Verilmeyen toplananı bulmak için toplamdan verilen toplanan sayıyı çıkartınız.

$\begin{array}{r} \text{....} \\ + 53 \\ \hline 58 \end{array}$	$\begin{array}{r} 31 \\ + \text{....} \\ \hline 33 \end{array}$	$\begin{array}{r} \text{....} \\ + 14 \\ \hline 17 \end{array}$	$\begin{array}{r} \text{....} \\ + \text{....} \\ \hline 60 \end{array}$
---	---	---	--

$\begin{array}{r} \text{....} \\ + 41 \\ \hline 83 \end{array}$	$\begin{array}{r} 74 \\ + \text{....} \\ \hline 93 \end{array}$	$\begin{array}{r} \text{....} \\ + 7 \\ \hline 61 \end{array}$	$\begin{array}{r} 52 \\ + \text{....} \\ \hline 64 \end{array}$
---	---	--	---

$\begin{array}{r} \text{....} \\ + 6 \\ \hline 71 \end{array}$	$\begin{array}{r} 41 \\ + \text{....} \\ \hline 47 \end{array}$	$\begin{array}{r} \text{....} \\ + 8 \\ \hline 30 \end{array}$	$\begin{array}{r} 50 \\ + \text{....} \\ \hline 59 \end{array}$
--	---	--	---

$\begin{array}{r} \text{....} \\ + 52 \\ \hline 53 \end{array}$	$\begin{array}{r} 10 \\ + \text{....} \\ \hline 82 \end{array}$	$\begin{array}{r} \text{....} \\ + 8 \\ \hline 58 \end{array}$	$\begin{array}{r} 50 \\ + \text{....} \\ \hline 76 \end{array}$
---	---	--	---

$\begin{array}{r} \text{....} \\ + 37 \\ \hline 61 \end{array}$	$\begin{array}{r} 5 \\ + \text{....} \\ \hline 24 \end{array}$	$\begin{array}{r} \text{....} \\ + 9 \\ \hline 91 \end{array}$	$\begin{array}{r} 2 \\ + \text{....} \\ \hline 35 \end{array}$
---	--	--	--

Adı: Soyadı:	<b>2.SINIF MATEMATİK DERSİ</b> <b>TOPLAMA İŞLEMİ</b>		
<p>Sevgili öğrenciler; Aşağıdaki toplama işlemlerinde toplanan sayılardan biri verilmemiştir. Verilmeyen toplananı bulmak için toplamdan verilen toplanan sayıyı çıkartınız.</p>			
$\begin{array}{r} \text{....} \\ + \quad 9 \\ \hline 49 \end{array}$	$\begin{array}{r} 11 \\ + \quad \text{....} \\ \hline 14 \end{array}$	$\begin{array}{r} \text{....} \\ + \quad 34 \\ \hline 47 \end{array}$	$\begin{array}{r} \text{....} \\ + \quad \text{....} \\ \hline 53 \end{array}$
$\begin{array}{r} \text{....} \\ + \quad 1 \\ \hline 82 \end{array}$	$\begin{array}{r} 14 \\ + \quad \text{....} \\ \hline 78 \end{array}$	$\begin{array}{r} \text{....} \\ + \quad 21 \\ \hline 86 \end{array}$	$\begin{array}{r} 67 \\ + \quad \text{....} \\ \hline 83 \end{array}$
$\begin{array}{r} \text{....} \\ + \quad 9 \\ \hline 11 \end{array}$	$\begin{array}{r} 78 \\ + \quad \text{....} \\ \hline 91 \end{array}$	$\begin{array}{r} \text{....} \\ + \quad 3 \\ \hline 23 \end{array}$	$\begin{array}{r} 1 \\ + \quad \text{....} \\ \hline 15 \end{array}$
$\begin{array}{r} \text{....} \\ + \quad 27 \\ \hline 59 \end{array}$	$\begin{array}{r} 20 \\ + \quad \text{....} \\ \hline 46 \end{array}$	$\begin{array}{r} \text{....} \\ + \quad 15 \\ \hline 42 \end{array}$	$\begin{array}{r} 37 \\ + \quad \text{....} \\ \hline 59 \end{array}$
$\begin{array}{r} \text{....} \\ + \quad 10 \\ \hline 83 \end{array}$	$\begin{array}{r} 36 \\ + \quad \text{....} \\ \hline 61 \end{array}$	$\begin{array}{r} \text{....} \\ + \quad 5 \\ \hline 28 \end{array}$	$\begin{array}{r} 8 \\ + \quad \text{....} \\ \hline 12 \end{array}$

Adı: Soyadı:	<b>2.SINIF MATEMATİK DERSİ</b> <b>TOPLAMA İŞLEMİ</b>		
<p>Sevgili öğrenciler; Aşağıdaki toplama işlemlerinde toplanan sayılardan biri verilmemiştir. Verilmeyen toplananı bulmak için toplamdan verilen toplanan sayıyı çıkartınız.</p>			
$\begin{array}{r} \text{....} \\ + \quad 9 \\ \hline 49 \end{array}$	$\begin{array}{r} 11 \\ + \quad \text{....} \\ \hline 14 \end{array}$	$\begin{array}{r} \text{....} \\ + \quad 34 \\ \hline 47 \end{array}$	$\begin{array}{r} \text{....} \\ + \quad \text{....} \\ \hline 53 \end{array}$
$\begin{array}{r} \text{....} \\ + \quad 1 \\ \hline 82 \end{array}$	$\begin{array}{r} 14 \\ + \quad \text{....} \\ \hline 78 \end{array}$	$\begin{array}{r} \text{....} \\ + \quad 21 \\ \hline 86 \end{array}$	$\begin{array}{r} 67 \\ + \quad \text{....} \\ \hline 83 \end{array}$
$\begin{array}{r} \text{....} \\ + \quad 9 \\ \hline 11 \end{array}$	$\begin{array}{r} 78 \\ + \quad \text{....} \\ \hline 91 \end{array}$	$\begin{array}{r} \text{....} \\ + \quad 3 \\ \hline 23 \end{array}$	$\begin{array}{r} 1 \\ + \quad \text{....} \\ \hline 15 \end{array}$
$\begin{array}{r} \text{....} \\ + \quad 27 \\ \hline 59 \end{array}$	$\begin{array}{r} 20 \\ + \quad \text{....} \\ \hline 46 \end{array}$	$\begin{array}{r} \text{....} \\ + \quad 15 \\ \hline 42 \end{array}$	$\begin{array}{r} 37 \\ + \quad \text{....} \\ \hline 59 \end{array}$
$\begin{array}{r} \text{....} \\ + \quad 10 \\ \hline 83 \end{array}$	$\begin{array}{r} 36 \\ + \quad \text{....} \\ \hline 61 \end{array}$	$\begin{array}{r} \text{....} \\ + \quad 5 \\ \hline 28 \end{array}$	$\begin{array}{r} 8 \\ + \quad \text{....} \\ \hline 12 \end{array}$

Adı: Soyadı:	<b>2.SINIF MATEMATİK DERSİ</b> <b>TOPLAMA İŞLEMİ</b>		
<p>Sevgili öğrenciler; Aşağıdaki toplama işlemlerinde toplanan sayılardan biri verilmemiştir. Verilmeyen toplananı bulmak için toplamdan verilen toplanan sayıyı çıkartınız.</p>			
$\begin{array}{r} \text{....} \\ + 48 \\ \hline 53 \end{array}$	$\begin{array}{r} 21 \\ + \text{....} \\ \hline 26 \end{array}$	$\begin{array}{r} \text{....} \\ + 17 \\ \hline 43 \end{array}$	$\begin{array}{r} 19 \\ + \text{....} \\ \hline 38 \end{array}$
$\begin{array}{r} \text{....} \\ + 19 \\ \hline 39 \end{array}$	$\begin{array}{r} 4 \\ + \text{....} \\ \hline 14 \end{array}$	$\begin{array}{r} \text{....} \\ + 62 \\ \hline 84 \end{array}$	$\begin{array}{r} 11 \\ + \text{....} \\ \hline 13 \end{array}$
$\begin{array}{r} \text{....} \\ + 52 \\ \hline 55 \end{array}$	$\begin{array}{r} 33 \\ + \text{....} \\ \hline 86 \end{array}$	$\begin{array}{r} \text{....} \\ + 61 \\ \hline 63 \end{array}$	$\begin{array}{r} 70 \\ + \text{....} \\ \hline 83 \end{array}$
$\begin{array}{r} \text{....} \\ + 63 \\ \hline 69 \end{array}$	$\begin{array}{r} 31 \\ + \text{....} \\ \hline 90 \end{array}$	$\begin{array}{r} \text{....} \\ + 6 \\ \hline 23 \end{array}$	$\begin{array}{r} 42 \\ + \text{....} \\ \hline 47 \end{array}$
$\begin{array}{r} \text{....} \\ + 39 \\ \hline 93 \end{array}$	$\begin{array}{r} 65 \\ + \text{....} \\ \hline 77 \end{array}$	$\begin{array}{r} \text{....} \\ + 3 \\ \hline 77 \end{array}$	$\begin{array}{r} 72 \\ + \text{....} \\ \hline 88 \end{array}$

Adı: Soyadı:	<b>2.SINIF MATEMATİK DERSİ</b> <b>TOPLAMA İŞLEMİ</b>		
<p>Sevgili öğrenciler; Aşağıdaki toplama işlemlerinde toplanan sayılardan biri verilmemiştir. Verilmeyen toplananı bulmak için toplamdan verilen toplanan sayıyı çıkartınız.</p>			
$\begin{array}{r} \text{....} \\ + 48 \\ \hline 53 \end{array}$	$\begin{array}{r} 21 \\ + \text{....} \\ \hline 26 \end{array}$	$\begin{array}{r} \text{....} \\ + 17 \\ \hline 43 \end{array}$	$\begin{array}{r} 19 \\ + \text{....} \\ \hline 38 \end{array}$
$\begin{array}{r} \text{....} \\ + 19 \\ \hline 39 \end{array}$	$\begin{array}{r} 4 \\ + \text{....} \\ \hline 14 \end{array}$	$\begin{array}{r} \text{....} \\ + 62 \\ \hline 84 \end{array}$	$\begin{array}{r} 11 \\ + \text{....} \\ \hline 13 \end{array}$
$\begin{array}{r} \text{....} \\ + 52 \\ \hline 55 \end{array}$	$\begin{array}{r} 33 \\ + \text{....} \\ \hline 86 \end{array}$	$\begin{array}{r} \text{....} \\ + 61 \\ \hline 63 \end{array}$	$\begin{array}{r} 70 \\ + \text{....} \\ \hline 83 \end{array}$
$\begin{array}{r} \text{....} \\ + 63 \\ \hline 69 \end{array}$	$\begin{array}{r} 31 \\ + \text{....} \\ \hline 90 \end{array}$	$\begin{array}{r} \text{....} \\ + 6 \\ \hline 23 \end{array}$	$\begin{array}{r} 42 \\ + \text{....} \\ \hline 47 \end{array}$
$\begin{array}{r} \text{....} \\ + 39 \\ \hline 93 \end{array}$	$\begin{array}{r} 65 \\ + \text{....} \\ \hline 77 \end{array}$	$\begin{array}{r} \text{....} \\ + 3 \\ \hline 77 \end{array}$	$\begin{array}{r} 72 \\ + \text{....} \\ \hline 88 \end{array}$

Sevgili öğrenciler; Aşağıdaki toplama işlemlerinde toplanan sayılardan biri verilmemiştir. Verilmeyen toplananı bulmak için toplamdan verilen toplanan sayıyı çıkartınız.

$\begin{array}{r} \text{....} \\ + 18 \\ \hline 35 \end{array}$	$\begin{array}{r} 26 \\ + \text{....} \\ \hline 77 \end{array}$	$\begin{array}{r} \text{....} \\ + 78 \\ \hline 95 \end{array}$	$\begin{array}{r} 29 \\ + \text{....} \\ \hline 33 \end{array}$
---	---	---	---

$\begin{array}{r} \text{....} \\ + 27 \\ \hline 51 \end{array}$	$\begin{array}{r} 52 \\ + \text{....} \\ \hline 97 \end{array}$	$\begin{array}{r} \text{....} \\ + 9 \\ \hline 60 \end{array}$	$\begin{array}{r} 9 \\ + \text{....} \\ \hline 34 \end{array}$
---	---	--	--

$\begin{array}{r} \text{....} \\ + 1 \\ \hline 51 \end{array}$	$\begin{array}{r} 13 \\ + \text{....} \\ \hline 21 \end{array}$	$\begin{array}{r} \text{....} \\ + 13 \\ \hline 73 \end{array}$	$\begin{array}{r} 32 \\ + \text{....} \\ \hline 33 \end{array}$
--	---	---	---

$\begin{array}{r} \text{....} \\ + 37 \\ \hline 62 \end{array}$	$\begin{array}{r} 37 \\ + \text{....} \\ \hline 71 \end{array}$	$\begin{array}{r} \text{....} \\ + 57 \\ \hline 74 \end{array}$	$\begin{array}{r} 52 \\ + \text{....} \\ \hline 64 \end{array}$
---	---	---	---

$\begin{array}{r} \text{....} \\ + 70 \\ \hline 84 \end{array}$	$\begin{array}{r} 18 \\ + \text{....} \\ \hline 43 \end{array}$	$\begin{array}{r} \text{....} \\ + 53 \\ \hline 67 \end{array}$	$\begin{array}{r} 4 \\ + \text{....} \\ \hline 36 \end{array}$
---	---	---	--

Sevgili öğrenciler; Aşağıdaki toplama işlemlerinde toplanan sayılardan biri verilmemiştir. Verilmeyen toplananı bulmak için toplamdan verilen toplanan sayıyı çıkartınız.

$\begin{array}{r} \text{....} \\ + 18 \\ \hline 35 \end{array}$	$\begin{array}{r} 26 \\ + \text{....} \\ \hline 77 \end{array}$	$\begin{array}{r} \text{....} \\ + 78 \\ \hline 95 \end{array}$	$\begin{array}{r} 29 \\ + \text{....} \\ \hline 33 \end{array}$
---	---	---	---

$\begin{array}{r} \text{....} \\ + 27 \\ \hline 51 \end{array}$	$\begin{array}{r} 52 \\ + \text{....} \\ \hline 97 \end{array}$	$\begin{array}{r} \text{....} \\ + 9 \\ \hline 60 \end{array}$	$\begin{array}{r} 9 \\ + \text{....} \\ \hline 34 \end{array}$
---	---	--	--

$\begin{array}{r} \text{....} \\ + 1 \\ \hline 51 \end{array}$	$\begin{array}{r} 13 \\ + \text{....} \\ \hline 21 \end{array}$	$\begin{array}{r} \text{....} \\ + 13 \\ \hline 73 \end{array}$	$\begin{array}{r} 32 \\ + \text{....} \\ \hline 33 \end{array}$
--	---	---	---

$\begin{array}{r} \text{....} \\ + 37 \\ \hline 62 \end{array}$	$\begin{array}{r} 37 \\ + \text{....} \\ \hline 71 \end{array}$	$\begin{array}{r} \text{....} \\ + 57 \\ \hline 74 \end{array}$	$\begin{array}{r} 52 \\ + \text{....} \\ \hline 64 \end{array}$
---	---	---	---

$\begin{array}{r} \text{....} \\ + 70 \\ \hline 84 \end{array}$	$\begin{array}{r} 18 \\ + \text{....} \\ \hline 43 \end{array}$	$\begin{array}{r} \text{....} \\ + 53 \\ \hline 67 \end{array}$	$\begin{array}{r} 4 \\ + \text{....} \\ \hline 36 \end{array}$
---	---	---	--

Adı: Soyadı:	<b>2.SINIF MATEMATİK DERSİ</b> <b>TOPLAMA İŞLEMİ</b>		
<p>Sevgili öğrenciler; Aşağıdaki toplama işlemlerinde toplanan sayılardan biri verilmemiştir. Verilmeyen toplananı bulmak için toplamdan verilen toplanan sayıyı çıkartınız.</p>			
$\begin{array}{r} \text{....} \\ + 72 \\ \hline 95 \end{array}$	$\begin{array}{r} 17 \\ + \text{....} \\ \hline 40 \end{array}$	$\begin{array}{r} \text{....} \\ + 23 \\ \hline 93 \end{array}$	$\begin{array}{r} \text{....} \\ + \text{....} \\ \hline 97 \end{array}$
$\begin{array}{r} \text{....} \\ + 20 \\ \hline 43 \end{array}$	$\begin{array}{r} 28 \\ + \text{....} \\ \hline 39 \end{array}$	$\begin{array}{r} \text{....} \\ + 15 \\ \hline 23 \end{array}$	$\begin{array}{r} 8 \\ + \text{....} \\ \hline 37 \end{array}$
$\begin{array}{r} \text{....} \\ + 25 \\ \hline 30 \end{array}$	$\begin{array}{r} 53 \\ + \text{....} \\ \hline 58 \end{array}$	$\begin{array}{r} \text{....} \\ + 10 \\ \hline 35 \end{array}$	$\begin{array}{r} 90 \\ + \text{....} \\ \hline 96 \end{array}$
$\begin{array}{r} \text{....} \\ + 35 \\ \hline 80 \end{array}$	$\begin{array}{r} 28 \\ + \text{....} \\ \hline 86 \end{array}$	$\begin{array}{r} \text{....} \\ + 68 \\ \hline 92 \end{array}$	$\begin{array}{r} 7 \\ + \text{....} \\ \hline 60 \end{array}$
$\begin{array}{r} \text{....} \\ + 45 \\ \hline 47 \end{array}$	$\begin{array}{r} 60 \\ + \text{....} \\ \hline 97 \end{array}$	$\begin{array}{r} \text{....} \\ + 67 \\ \hline 79 \end{array}$	$\begin{array}{r} 17 \\ + \text{....} \\ \hline 18 \end{array}$

Adı: Soyadı:	<b>2.SINIF MATEMATİK DERSİ</b> <b>TOPLAMA İŞLEMİ</b>		
<p>Sevgili öğrenciler; Aşağıdaki toplama işlemlerinde toplanan sayılardan biri verilmemiştir. Verilmeyen toplananı bulmak için toplamdan verilen toplanan sayıyı çıkartınız.</p>			
$\begin{array}{r} \text{....} \\ + 72 \\ \hline 95 \end{array}$	$\begin{array}{r} 17 \\ + \text{....} \\ \hline 40 \end{array}$	$\begin{array}{r} \text{....} \\ + 23 \\ \hline 93 \end{array}$	$\begin{array}{r} \text{....} \\ + \text{....} \\ \hline 97 \end{array}$
$\begin{array}{r} \text{....} \\ + 20 \\ \hline 43 \end{array}$	$\begin{array}{r} 28 \\ + \text{....} \\ \hline 39 \end{array}$	$\begin{array}{r} \text{....} \\ + 15 \\ \hline 23 \end{array}$	$\begin{array}{r} 8 \\ + \text{....} \\ \hline 37 \end{array}$
$\begin{array}{r} \text{....} \\ + 25 \\ \hline 30 \end{array}$	$\begin{array}{r} 53 \\ + \text{....} \\ \hline 58 \end{array}$	$\begin{array}{r} \text{....} \\ + 10 \\ \hline 35 \end{array}$	$\begin{array}{r} 90 \\ + \text{....} \\ \hline 96 \end{array}$
$\begin{array}{r} \text{....} \\ + 35 \\ \hline 80 \end{array}$	$\begin{array}{r} 28 \\ + \text{....} \\ \hline 86 \end{array}$	$\begin{array}{r} \text{....} \\ + 68 \\ \hline 92 \end{array}$	$\begin{array}{r} 7 \\ + \text{....} \\ \hline 60 \end{array}$
$\begin{array}{r} \text{....} \\ + 45 \\ \hline 47 \end{array}$	$\begin{array}{r} 60 \\ + \text{....} \\ \hline 97 \end{array}$	$\begin{array}{r} \text{....} \\ + 67 \\ \hline 79 \end{array}$	$\begin{array}{r} 17 \\ + \text{....} \\ \hline 18 \end{array}$

Sevgili öğrenciler; Aşağıdaki toplama işlemlerini yapınız.

$\begin{array}{r} 70 \\ + 57 \\ \hline \end{array}$	$\begin{array}{r} 27 \\ + 22 \\ \hline \end{array}$	$\begin{array}{r} 33 \\ + 28 \\ \hline \end{array}$	$\begin{array}{r} 54 \\ + 26 \\ \hline \end{array}$
---	---	---	---

$\begin{array}{r} 71 \\ + 24 \\ \hline \end{array}$	$\begin{array}{r} 46 \\ + 31 \\ \hline \end{array}$	$\begin{array}{r} 91 \\ + 71 \\ \hline \end{array}$	$\begin{array}{r} 90 \\ + 22 \\ \hline \end{array}$
---	---	---	---

$\begin{array}{r} 97 \\ + 21 \\ \hline \end{array}$	$\begin{array}{r} 78 \\ + 74 \\ \hline \end{array}$	$\begin{array}{r} 26 \\ + 25 \\ \hline \end{array}$	$\begin{array}{r} 81 \\ + 70 \\ \hline \end{array}$
---	---	---	---

$\begin{array}{r} 27 \\ + 14 \\ \hline \end{array}$	$\begin{array}{r} 32 \\ + 6 \\ \hline \end{array}$	$\begin{array}{r} 47 \\ + 46 \\ \hline \end{array}$	$\begin{array}{r} 10 \\ + 3 \\ \hline \end{array}$
---	--	---	--

$\begin{array}{r} 94 \\ + 39 \\ \hline \end{array}$	$\begin{array}{r} 28 \\ + 17 \\ \hline \end{array}$	$\begin{array}{r} 47 \\ + 17 \\ \hline \end{array}$	$\begin{array}{r} 71 \\ + 18 \\ \hline \end{array}$
---	---	---	---

Sevgili öğrenciler; Aşağıdaki toplama işlemlerini yapınız.

$\begin{array}{r} 70 \\ + 57 \\ \hline \end{array}$	$\begin{array}{r} 27 \\ + 22 \\ \hline \end{array}$	$\begin{array}{r} 33 \\ + 28 \\ \hline \end{array}$	$\begin{array}{r} 54 \\ + 26 \\ \hline \end{array}$
---	---	---	---

$\begin{array}{r} 71 \\ + 24 \\ \hline \end{array}$	$\begin{array}{r} 46 \\ + 31 \\ \hline \end{array}$	$\begin{array}{r} 91 \\ + 71 \\ \hline \end{array}$	$\begin{array}{r} 90 \\ + 22 \\ \hline \end{array}$
---	---	---	---

$\begin{array}{r} 97 \\ + 21 \\ \hline \end{array}$	$\begin{array}{r} 78 \\ + 74 \\ \hline \end{array}$	$\begin{array}{r} 26 \\ + 25 \\ \hline \end{array}$	$\begin{array}{r} 81 \\ + 70 \\ \hline \end{array}$
---	---	---	---

$\begin{array}{r} 27 \\ + 14 \\ \hline \end{array}$	$\begin{array}{r} 32 \\ + 6 \\ \hline \end{array}$	$\begin{array}{r} 47 \\ + 46 \\ \hline \end{array}$	$\begin{array}{r} 10 \\ + 3 \\ \hline \end{array}$
---	--	---	--

$\begin{array}{r} 94 \\ + 39 \\ \hline \end{array}$	$\begin{array}{r} 28 \\ + 17 \\ \hline \end{array}$	$\begin{array}{r} 47 \\ + 17 \\ \hline \end{array}$	$\begin{array}{r} 71 \\ + 18 \\ \hline \end{array}$
---	---	---	---

Sevgili öğrenciler; Aşağıdaki toplama işlemlerini yapınız.

$\begin{array}{r} 43 \\ + 42 \\ \hline \end{array}$	$\begin{array}{r} 24 \\ + 13 \\ \hline \end{array}$	$\begin{array}{r} 44 \\ + 17 \\ \hline \end{array}$	$\begin{array}{r} 69 \\ + 23 \\ \hline \end{array}$
---	---	---	---

$\begin{array}{r} 60 \\ + 56 \\ \hline \end{array}$	$\begin{array}{r} 37 \\ + 20 \\ \hline \end{array}$	$\begin{array}{r} 95 \\ + 84 \\ \hline \end{array}$	$\begin{array}{r} 21 \\ + 11 \\ \hline \end{array}$
---	---	---	---

$\begin{array}{r} 60 \\ + 43 \\ \hline \end{array}$	$\begin{array}{r} 59 \\ + 4 \\ \hline \end{array}$	$\begin{array}{r} 79 \\ + 76 \\ \hline \end{array}$	$\begin{array}{r} 72 \\ + 68 \\ \hline \end{array}$
---	--	---	---

$\begin{array}{r} 44 \\ + 9 \\ \hline \end{array}$	$\begin{array}{r} 25 \\ + 18 \\ \hline \end{array}$	$\begin{array}{r} 95 \\ + 68 \\ \hline \end{array}$	$\begin{array}{r} 97 \\ + 59 \\ \hline \end{array}$
--	---	---	---

$\begin{array}{r} 79 \\ + 36 \\ \hline \end{array}$	$\begin{array}{r} 49 \\ + 14 \\ \hline \end{array}$	$\begin{array}{r} 92 \\ + 3 \\ \hline \end{array}$	$\begin{array}{r} 48 \\ + 2 \\ \hline \end{array}$
---	---	--	--

Sevgili öğrenciler; Aşağıdaki toplama işlemlerini yapınız.

$\begin{array}{r} 43 \\ + 42 \\ \hline \end{array}$	$\begin{array}{r} 24 \\ + 13 \\ \hline \end{array}$	$\begin{array}{r} 44 \\ + 17 \\ \hline \end{array}$	$\begin{array}{r} 69 \\ + 23 \\ \hline \end{array}$
---	---	---	---

$\begin{array}{r} 60 \\ + 56 \\ \hline \end{array}$	$\begin{array}{r} 37 \\ + 20 \\ \hline \end{array}$	$\begin{array}{r} 95 \\ + 84 \\ \hline \end{array}$	$\begin{array}{r} 21 \\ + 11 \\ \hline \end{array}$
---	---	---	---

$\begin{array}{r} 60 \\ + 43 \\ \hline \end{array}$	$\begin{array}{r} 59 \\ + 4 \\ \hline \end{array}$	$\begin{array}{r} 79 \\ + 76 \\ \hline \end{array}$	$\begin{array}{r} 72 \\ + 68 \\ \hline \end{array}$
---	--	---	---

$\begin{array}{r} 44 \\ + 9 \\ \hline \end{array}$	$\begin{array}{r} 25 \\ + 18 \\ \hline \end{array}$	$\begin{array}{r} 95 \\ + 68 \\ \hline \end{array}$	$\begin{array}{r} 97 \\ + 59 \\ \hline \end{array}$
--	---	---	---

$\begin{array}{r} 79 \\ + 36 \\ \hline \end{array}$	$\begin{array}{r} 49 \\ + 14 \\ \hline \end{array}$	$\begin{array}{r} 92 \\ + 3 \\ \hline \end{array}$	$\begin{array}{r} 48 \\ + 2 \\ \hline \end{array}$
---	---	--	--



Adı: Soyadı:	<b>2.SINIF MATEMATİK DERSİ</b> <b>TOPLAMA İŞLEMİ</b>	
-----------------	---	---

Sevgili öğrenciler; Aşağıdaki toplama işlemlerini yapınız.

$\begin{array}{r} 61 \\ + 49 \\ \hline \end{array}$	$\begin{array}{r} 58 \\ + 47 \\ \hline \end{array}$	$\begin{array}{r} 40 \\ + 10 \\ \hline \end{array}$	$\begin{array}{r} 11 \\ + 6 \\ \hline \end{array}$
---	---	---	--

$\begin{array}{r} 86 \\ + 61 \\ \hline \end{array}$	$\begin{array}{r} 26 \\ + 4 \\ \hline \end{array}$	$\begin{array}{r} 62 \\ + 24 \\ \hline \end{array}$	$\begin{array}{r} 47 \\ + 31 \\ \hline \end{array}$
---	--	---	---

$\begin{array}{r} 68 \\ + 63 \\ \hline \end{array}$	$\begin{array}{r} 84 \\ + 38 \\ \hline \end{array}$	$\begin{array}{r} 55 \\ + 41 \\ \hline \end{array}$	$\begin{array}{r} 99 \\ + 80 \\ \hline \end{array}$
---	---	---	---

$\begin{array}{r} 26 \\ + 8 \\ \hline \end{array}$	$\begin{array}{r} 17 \\ + 5 \\ \hline \end{array}$	$\begin{array}{r} 57 \\ + 45 \\ \hline \end{array}$	$\begin{array}{r} 61 \\ + 12 \\ \hline \end{array}$
--	--	---	---

$\begin{array}{r} 87 \\ + 64 \\ \hline \end{array}$	$\begin{array}{r} 81 \\ + 28 \\ \hline \end{array}$	$\begin{array}{r} 86 \\ + 80 \\ \hline \end{array}$	$\begin{array}{r} 13 \\ + 11 \\ \hline \end{array}$
---	---	---	---

Adı: Soyadı:	<b>2.SINIF MATEMATİK DERSİ</b> <b>TOPLAMA İŞLEMİ</b>	
-----------------	---	--

Sevgili öğrenciler; Aşağıdaki toplama işlemlerini yapınız.

$\begin{array}{r} 61 \\ + 49 \\ \hline \end{array}$	$\begin{array}{r} 58 \\ + 47 \\ \hline \end{array}$	$\begin{array}{r} 40 \\ + 10 \\ \hline \end{array}$	$\begin{array}{r} 11 \\ + 6 \\ \hline \end{array}$
---	---	---	--

$\begin{array}{r} 86 \\ + 61 \\ \hline \end{array}$	$\begin{array}{r} 26 \\ + 4 \\ \hline \end{array}$	$\begin{array}{r} 62 \\ + 24 \\ \hline \end{array}$	$\begin{array}{r} 47 \\ + 31 \\ \hline \end{array}$
---	--	---	---

$\begin{array}{r} 68 \\ + 63 \\ \hline \end{array}$	$\begin{array}{r} 84 \\ + 38 \\ \hline \end{array}$	$\begin{array}{r} 55 \\ + 41 \\ \hline \end{array}$	$\begin{array}{r} 99 \\ + 80 \\ \hline \end{array}$
---	---	---	---

$\begin{array}{r} 26 \\ + 8 \\ \hline \end{array}$	$\begin{array}{r} 17 \\ + 5 \\ \hline \end{array}$	$\begin{array}{r} 57 \\ + 45 \\ \hline \end{array}$	$\begin{array}{r} 61 \\ + 12 \\ \hline \end{array}$
--	--	---	---

$\begin{array}{r} 87 \\ + 64 \\ \hline \end{array}$	$\begin{array}{r} 81 \\ + 28 \\ \hline \end{array}$	$\begin{array}{r} 86 \\ + 80 \\ \hline \end{array}$	$\begin{array}{r} 13 \\ + 11 \\ \hline \end{array}$
---	---	---	---

Sevgili öğrenciler; Aşağıdaki toplama işlemlerini yapınız.

$\begin{array}{r} 79 \\ + 51 \\ \hline \end{array}$	$\begin{array}{r} 77 \\ + 10 \\ \hline \end{array}$	$\begin{array}{r} 97 \\ + 69 \\ \hline \end{array}$	$\begin{array}{r} 78 \\ + 30 \\ \hline \end{array}$
---	---	---	---

$\begin{array}{r} 28 \\ + 21 \\ \hline \end{array}$	$\begin{array}{r} 45 \\ + 44 \\ \hline \end{array}$	$\begin{array}{r} 26 \\ + 17 \\ \hline \end{array}$	$\begin{array}{r} 90 \\ + 44 \\ \hline \end{array}$
---	---	---	---

$\begin{array}{r} 62 \\ + 54 \\ \hline \end{array}$	$\begin{array}{r} 85 \\ + 6 \\ \hline \end{array}$	$\begin{array}{r} 53 \\ + 46 \\ \hline \end{array}$	$\begin{array}{r} 63 \\ + 36 \\ \hline \end{array}$
---	--	---	---

$\begin{array}{r} 37 \\ + 21 \\ \hline \end{array}$	$\begin{array}{r} 62 \\ + 61 \\ \hline \end{array}$	$\begin{array}{r} 54 \\ + 37 \\ \hline \end{array}$	$\begin{array}{r} 95 \\ + 84 \\ \hline \end{array}$
---	---	---	---

$\begin{array}{r} 47 \\ + 31 \\ \hline \end{array}$	$\begin{array}{r} 26 \\ + 25 \\ \hline \end{array}$	$\begin{array}{r} 36 \\ + 9 \\ \hline \end{array}$	$\begin{array}{r} 38 \\ + 18 \\ \hline \end{array}$
---	---	--	---

Sevgili öğrenciler; Aşağıdaki toplama işlemlerini yapınız.

$\begin{array}{r} 79 \\ + 51 \\ \hline \end{array}$	$\begin{array}{r} 77 \\ + 10 \\ \hline \end{array}$	$\begin{array}{r} 97 \\ + 69 \\ \hline \end{array}$	$\begin{array}{r} 78 \\ + 30 \\ \hline \end{array}$
---	---	---	---

$\begin{array}{r} 28 \\ + 21 \\ \hline \end{array}$	$\begin{array}{r} 45 \\ + 44 \\ \hline \end{array}$	$\begin{array}{r} 26 \\ + 17 \\ \hline \end{array}$	$\begin{array}{r} 90 \\ + 44 \\ \hline \end{array}$
---	---	---	---

$\begin{array}{r} 62 \\ + 54 \\ \hline \end{array}$	$\begin{array}{r} 85 \\ + 6 \\ \hline \end{array}$	$\begin{array}{r} 53 \\ + 46 \\ \hline \end{array}$	$\begin{array}{r} 63 \\ + 36 \\ \hline \end{array}$
---	--	---	---

$\begin{array}{r} 37 \\ + 21 \\ \hline \end{array}$	$\begin{array}{r} 62 \\ + 61 \\ \hline \end{array}$	$\begin{array}{r} 54 \\ + 37 \\ \hline \end{array}$	$\begin{array}{r} 95 \\ + 84 \\ \hline \end{array}$
---	---	---	---

$\begin{array}{r} 47 \\ + 31 \\ \hline \end{array}$	$\begin{array}{r} 26 \\ + 25 \\ \hline \end{array}$	$\begin{array}{r} 36 \\ + 9 \\ \hline \end{array}$	$\begin{array}{r} 38 \\ + 18 \\ \hline \end{array}$
---	---	--	---

Adı: Soyadı:	<b>2.SINIF MATEMATİK DERSİ</b> <b>TOPLAMA İŞLEMİ</b>	
-----------------	---	---


Sevgili öğrenciler; Aşağıdaki toplama işlemlerini yapınız.


$\begin{array}{r} 96 \\ + 19 \\ \hline \end{array}$	$\begin{array}{r} 16 \\ + 15 \\ \hline \end{array}$	$\begin{array}{r} 52 \\ + 47 \\ \hline \end{array}$	$\begin{array}{r} 67 \\ + 28 \\ \hline \end{array}$
$\begin{array}{r} 85 \\ + 32 \\ \hline \end{array}$	$\begin{array}{r} 31 \\ + 20 \\ \hline \end{array}$	$\begin{array}{r} 45 \\ + 41 \\ \hline \end{array}$	$\begin{array}{r} 80 \\ + 58 \\ \hline \end{array}$
$\begin{array}{r} 32 \\ + 4 \\ \hline \end{array}$	$\begin{array}{r} 14 \\ + 3 \\ \hline \end{array}$	$\begin{array}{r} 67 \\ + 5 \\ \hline \end{array}$	$\begin{array}{r} 42 \\ + 25 \\ \hline \end{array}$
$\begin{array}{r} 60 \\ + 29 \\ \hline \end{array}$	$\begin{array}{r} 30 \\ + 11 \\ \hline \end{array}$	$\begin{array}{r} 80 \\ + 30 \\ \hline \end{array}$	$\begin{array}{r} 82 \\ + 62 \\ \hline \end{array}$
$\begin{array}{r} 96 \\ + 91 \\ \hline \end{array}$	$\begin{array}{r} 37 \\ + 10 \\ \hline \end{array}$	$\begin{array}{r} 28 \\ + 26 \\ \hline \end{array}$	$\begin{array}{r} 91 \\ + 64 \\ \hline \end{array}$


Adı: Soyadı:	<b>2.SINIF MATEMATİK DERSİ</b> <b>TOPLAMA İŞLEMİ</b>	
-----------------	---	--


Sevgili öğrenciler; Aşağıdaki toplama işlemlerini yapınız.


$\begin{array}{r} 96 \\ + 19 \\ \hline \end{array}$	$\begin{array}{r} 16 \\ + 15 \\ \hline \end{array}$	$\begin{array}{r} 52 \\ + 47 \\ \hline \end{array}$	$\begin{array}{r} 67 \\ + 28 \\ \hline \end{array}$
$\begin{array}{r} 85 \\ + 32 \\ \hline \end{array}$	$\begin{array}{r} 31 \\ + 20 \\ \hline \end{array}$	$\begin{array}{r} 45 \\ + 41 \\ \hline \end{array}$	$\begin{array}{r} 80 \\ + 58 \\ \hline \end{array}$
$\begin{array}{r} 32 \\ + 4 \\ \hline \end{array}$	$\begin{array}{r} 14 \\ + 3 \\ \hline \end{array}$	$\begin{array}{r} 67 \\ + 5 \\ \hline \end{array}$	$\begin{array}{r} 42 \\ + 25 \\ \hline \end{array}$
$\begin{array}{r} 60 \\ + 29 \\ \hline \end{array}$	$\begin{array}{r} 30 \\ + 11 \\ \hline \end{array}$	$\begin{array}{r} 80 \\ + 30 \\ \hline \end{array}$	$\begin{array}{r} 82 \\ + 62 \\ \hline \end{array}$
$\begin{array}{r} 96 \\ + 91 \\ \hline \end{array}$	$\begin{array}{r} 37 \\ + 10 \\ \hline \end{array}$	$\begin{array}{r} 28 \\ + 26 \\ \hline \end{array}$	$\begin{array}{r} 91 \\ + 64 \\ \hline \end{array}$


Adı: Soyadı:	2.SINIF MATEMATİK DERSİ TOPLAMA İŞLEMİ	
Sevgili öğrenciler; Aşağıdaki toplama işlemlerini yapınız.		
76+18 =	82+26 =	
90+8 =	49+10 =	
53+13 =	61+16 =	
38+3 =	18+13 =	
81+35 =	67+2 =	
28+3 =	17+12 =	
24+13 =	35+14 =	
72+16 =	45+9 =	
18+10 =	15+4 =	
41+8 =	82+55 =	


Adı: Soyadı:	2.SINIF MATEMATİK DERSİ TOPLAMA İŞLEMİ	
Sevgili öğrenciler; Aşağıdaki toplama işlemlerini yapınız.		
76+18 =	82+26 =	
90+8 =	49+10 =	
53+13 =	61+16 =	
38+3 =	18+13 =	
81+35 =	67+2 =	
28+3 =	17+12 =	
24+13 =	35+14 =	
72+16 =	45+9 =	
18+10 =	15+4 =	
41+8 =	82+55 =	


Adı: Soyadı:	<b>2.SINIF MATEMATİK DERSİ</b> <b>TOPLAMA İŞLEMİ</b>	
Sevgili öğrenciler; Aşağıdaki toplama işlemlerini yapınız.		
35+11 =	96+50 =	
58+25 =	68+60 =	
77+27 =	93+14 =	
58+51 =	26+4 =	
42+2 =	15+3 =	
87+63 =	25+17 =	
84+16 =	22+9 =	
91+8 =	56+52 =	
65+37 =	43+42 =	
92+2 =	63+2 =	


Adı: Soyadı:	<b>2.SINIF MATEMATİK DERSİ</b> <b>TOPLAMA İŞLEMİ</b>	
Sevgili öğrenciler; Aşağıdaki toplama işlemlerini yapınız.		
35+11 =	96+50 =	
58+25 =	68+60 =	
77+27 =	93+14 =	
58+51 =	26+4 =	
42+2 =	15+3 =	
87+63 =	25+17 =	
84+16 =	22+9 =	
91+8 =	56+52 =	
65+37 =	43+42 =	
92+2 =	63+2 =	


Adı: Soyadı:	<b>2.SINIF MATEMATİK DERSİ</b> <b>TOPLAMA İŞLEMİ</b>	
Sevgili öğrenciler; Aşağıdaki toplama işlemlerini yapınız.		
11+6 =	99+73 =	
25+20 =	45+37 =	
47+40 =	54+38 =	
47+32 =	84+16 =	
97+68 =	44+40 =	
45+22 =	57+31 =	
69+13 =	64+9 =	
68+21 =	53+24 =	
35+11 =	64+12 =	
39+21 =	81+60 =	

Adı: Soyadı:	<b>2.SINIF MATEMATİK DERSİ</b> <b>TOPLAMA İŞLEMİ</b>	
Sevgili öğrenciler; Aşağıdaki toplama işlemlerini yapınız.		
11+6 =	99+73 =	
25+20 =	45+37 =	
47+40 =	54+38 =	
47+32 =	84+16 =	
97+68 =	44+40 =	
45+22 =	57+31 =	
69+13 =	64+9 =	
68+21 =	53+24 =	
35+11 =	64+12 =	
39+21 =	81+60 =	


Adı: Soyadı:	<b>2.SINIF MATEMATİK DERSİ</b> <b>TOPLAMA İŞLEMİ</b>	
Sevgili öğrenciler; Aşağıdaki toplama işlemlerini yapınız.		
98+85 =	85+84 =	
85+13 =	23+17 =	
56+45 =	72+58 =	
11+10 =	97+11 =	
11+4 =	96+53 =	
14+13 =	10+5 =	
40+31 =	33+18 =	
99+14 =	83+32 =	
37+7 =	41+9 =	
46+9 =	31+23 =	


Adı: Soyadı:	<b>2.SINIF MATEMATİK DERSİ</b> <b>TOPLAMA İŞLEMİ</b>	
Sevgili öğrenciler; Aşağıdaki toplama işlemlerini yapınız.		
98+85 =	85+84 =	
85+13 =	23+17 =	
56+45 =	72+58 =	
11+10 =	97+11 =	
11+4 =	96+53 =	
14+13 =	10+5 =	
40+31 =	33+18 =	
99+14 =	83+32 =	
37+7 =	41+9 =	
46+9 =	31+23 =	


Adı: Soyadı:	<b>2.SINIF MATEMATİK DERSİ</b> <b>TOPLAMA İŞLEMİ</b>	
Sevgili öğrenciler; Aşağıdaki toplama işlemlerini yapınız.		
55+23 =	83+17 =	
99+39 =	57+17 =	
97+17 =	12+8 =	
87+31 =	73+43 =	
64+55 =	44+23 =	
90+42 =	70+21 =	
93+77 =	30+21 =	
31+28 =	28+25 =	
78+35 =	19+2 =	
43+5 =	38+26 =	


Adı: Soyadı:	<b>2.SINIF MATEMATİK DERSİ</b> <b>TOPLAMA İŞLEMİ</b>	
Sevgili öğrenciler; Aşağıdaki toplama işlemlerini yapınız.		
55+23 =	83+17 =	
99+39 =	57+17 =	
97+17 =	12+8 =	
87+31 =	73+43 =	
64+55 =	44+23 =	
90+42 =	70+21 =	
93+77 =	30+21 =	
31+28 =	28+25 =	
78+35 =	19+2 =	
43+5 =	38+26 =	





Adı: Soyadı:	<b>2.SINIF MATEMATİK DERSİ</b> <b>TOPLAMA İŞLEMİ</b>	
Sevgili öğrenciler; Aşağıdaki toplama işlemlerini yapınız.		
96+84 =	50+26 =	
72+59 =	76+54 =	
20+11 =	30+9 =	
44+9 =	93+33 =	
12+4 =	16+1 =	
21+3 =	99+56 =	
13+8 =	86+53 =	
31+16 =	63+18 =	
70+4 =	85+50 =	
43+15 =	17+3 =	


Adı: Soyadı:	<b>2.SINIF MATEMATİK DERSİ</b> <b>TOPLAMA İŞLEMİ</b>	
Sevgili öğrenciler; Aşağıdaki toplama işlemlerini yapınız.		
96+84 =	50+26 =	
72+59 =	76+54 =	
20+11 =	30+9 =	
44+9 =	93+33 =	
12+4 =	16+1 =	
21+3 =	99+56 =	
13+8 =	86+53 =	
31+16 =	63+18 =	
70+4 =	85+50 =	
43+15 =	17+3 =	


Adı: Soyadı:	<b>2.SINIF MATEMATİK DERSİ</b> <b>TOPLAMA İŞLEMİ</b>	
Sevgili öğrenciler; Aşağıdaki toplama işlemlerini yapınız.		
70+26 =	15+1 =	
36+19 =	15+10 =	
10+1 =	91+47 =	
84+42 =	78+62 =	
36+33 =	47+35 =	
62+5 =	76+47 =	
80+61 =	30+16 =	
62+28 =	42+37 =	
76+61 =	71+50 =	
44+4 =	27+15 =	

Adı: Soyadı:	<b>2.SINIF MATEMATİK DERSİ</b> <b>TOPLAMA İŞLEMİ</b>	
Sevgili öğrenciler; Aşağıdaki toplama işlemlerini yapınız.		
70+26 =	15+1 =	
36+19 =	15+10 =	
10+1 =	91+47 =	
84+42 =	78+62 =	
36+33 =	47+35 =	
62+5 =	76+47 =	
80+61 =	30+16 =	
62+28 =	42+37 =	
76+61 =	71+50 =	
44+4 =	27+15 =	

Adı: Soyadı:	<b>2.SINIF MATEMATİK DERSİ</b> <b>TOPLAMA İŞLEMİ</b>	
Sevgili öğrenciler; Aşağıdaki toplama işlemlerini yapınız.		
50+41 =	73+48 =	
15+3 =	59+45 =	
77+16 =	97+95 =	
72+49 =	81+18 =	
50+22 =	64+4 =	
62+48 =	28+14 =	
14+13 =	14+1 =	
79+39 =	17+11 =	
43+4 =	37+26 =	
42+8 =	94+83 =	

Adı: Soyadı:	<b>2.SINIF MATEMATİK DERSİ</b> <b>TOPLAMA İŞLEMİ</b>	
Sevgili öğrenciler; Aşağıdaki toplama işlemlerini yapınız.		
50+41 =	73+48 =	
15+3 =	59+45 =	
77+16 =	97+95 =	
72+49 =	81+18 =	
50+22 =	64+4 =	
62+48 =	28+14 =	
14+13 =	14+1 =	
79+39 =	17+11 =	
43+4 =	37+26 =	
42+8 =	94+83 =	

Adı: Soyadı:	<b>2.SINIF MATEMATİK DERSİ</b> <b>TOPLAMA İŞLEMİ</b>	
Sevgili öğrenciler; Aşağıdaki toplama işlemlerini yapınız.		
14+8 =	79+74 =	
51+38 =	74+6 =	
90+15 =	45+35 =	
63+13 =	87+48 =	
80+30 =	97+59 =	
48+8 =	12+7 =	
92+57 =	92+49 =	
58+42 =	81+63 =	
79+12 =	10+7 =	
69+22 =	59+28 =	

Adı: Soyadı:	<b>2.SINIF MATEMATİK DERSİ</b> <b>TOPLAMA İŞLEMİ</b>	
Sevgili öğrenciler; Aşağıdaki toplama işlemlerini yapınız.		
14+8 =	79+74 =	
51+38 =	74+6 =	
90+15 =	45+35 =	
63+13 =	87+48 =	
80+30 =	97+59 =	
48+8 =	12+7 =	
92+57 =	92+49 =	
58+42 =	81+63 =	
79+12 =	10+7 =	
69+22 =	59+28 =	

Adı: Soyadı:	<b>2.SINIF MATEMATİK DERSİ</b> <b>ÇIKARMA İŞLEMİ</b>	
-----------------	---	---

Sevgili öğrenciler; Aşağıdaki çıkarma işlemlerini yapınız.

$\begin{array}{r} 93 \\ - 60 \\ \hline \end{array}$	$\begin{array}{r} 76 \\ - 15 \\ \hline \end{array}$	$\begin{array}{r} 63 \\ - 57 \\ \hline \end{array}$	$\begin{array}{r} 67 \\ - 65 \\ \hline \end{array}$
---	---	---	---

$\begin{array}{r} 82 \\ - 80 \\ \hline \end{array}$	$\begin{array}{r} 93 \\ - 20 \\ \hline \end{array}$	$\begin{array}{r} 72 \\ - 15 \\ \hline \end{array}$	$\begin{array}{r} 38 \\ - 17 \\ \hline \end{array}$
---	---	---	---

$\begin{array}{r} 78 \\ - 13 \\ \hline \end{array}$	$\begin{array}{r} 23 \\ - 1 \\ \hline \end{array}$	$\begin{array}{r} 74 \\ - 13 \\ \hline \end{array}$	$\begin{array}{r} 25 \\ - 22 \\ \hline \end{array}$
---	--	---	---

$\begin{array}{r} 17 \\ - 2 \\ \hline \end{array}$	$\begin{array}{r} 34 \\ - 12 \\ \hline \end{array}$	$\begin{array}{r} 34 \\ - 17 \\ \hline \end{array}$	$\begin{array}{r} 51 \\ - 18 \\ \hline \end{array}$
--	---	---	---

$\begin{array}{r} 15 \\ - 3 \\ \hline \end{array}$	$\begin{array}{r} 43 \\ - 18 \\ \hline \end{array}$	$\begin{array}{r} 94 \\ - 53 \\ \hline \end{array}$	$\begin{array}{r} 10 \\ - 4 \\ \hline \end{array}$
--	---	---	--

Adı: Soyadı:	<b>2.SINIF MATEMATİK DERSİ</b> <b>ÇIKARMA İŞLEMİ</b>	
-----------------	---	--

Sevgili öğrenciler; Aşağıdaki çıkarma işlemlerini yapınız.

$\begin{array}{r} 93 \\ - 60 \\ \hline \end{array}$	$\begin{array}{r} 76 \\ - 15 \\ \hline \end{array}$	$\begin{array}{r} 63 \\ - 57 \\ \hline \end{array}$	$\begin{array}{r} 67 \\ - 65 \\ \hline \end{array}$
---	---	---	---

$\begin{array}{r} 82 \\ - 80 \\ \hline \end{array}$	$\begin{array}{r} 93 \\ - 20 \\ \hline \end{array}$	$\begin{array}{r} 72 \\ - 15 \\ \hline \end{array}$	$\begin{array}{r} 38 \\ - 17 \\ \hline \end{array}$
---	---	---	---

$\begin{array}{r} 78 \\ - 13 \\ \hline \end{array}$	$\begin{array}{r} 23 \\ - 1 \\ \hline \end{array}$	$\begin{array}{r} 74 \\ - 13 \\ \hline \end{array}$	$\begin{array}{r} 25 \\ - 22 \\ \hline \end{array}$
---	--	---	---

$\begin{array}{r} 17 \\ - 2 \\ \hline \end{array}$	$\begin{array}{r} 34 \\ - 12 \\ \hline \end{array}$	$\begin{array}{r} 34 \\ - 17 \\ \hline \end{array}$	$\begin{array}{r} 51 \\ - 18 \\ \hline \end{array}$
--	---	---	---

$\begin{array}{r} 15 \\ - 3 \\ \hline \end{array}$	$\begin{array}{r} 43 \\ - 18 \\ \hline \end{array}$	$\begin{array}{r} 94 \\ - 53 \\ \hline \end{array}$	$\begin{array}{r} 10 \\ - 4 \\ \hline \end{array}$
--	---	---	--

Adı: Soyadı:	<b>2.SINIF MATEMATİK DERSİ</b> <b>ÇIKARMA İŞLEMİ</b>	
-----------------	---	---

Sevgili öğrenciler; Aşağıdaki çıkarma işlemlerini yapınız.

$\begin{array}{r} 29 \\ - 27 \\ \hline \end{array}$	$\begin{array}{r} 60 \\ - 15 \\ \hline \end{array}$	$\begin{array}{r} 48 \\ - 7 \\ \hline \end{array}$	$\begin{array}{r} 87 \\ - 81 \\ \hline \end{array}$
---	---	--	---

$\begin{array}{r} 41 \\ - 23 \\ \hline \end{array}$	$\begin{array}{r} 26 \\ - 22 \\ \hline \end{array}$	$\begin{array}{r} 99 \\ - 58 \\ \hline \end{array}$	$\begin{array}{r} 93 \\ - 24 \\ \hline \end{array}$
---	---	---	---

$\begin{array}{r} 55 \\ - 54 \\ \hline \end{array}$	$\begin{array}{r} 88 \\ - 62 \\ \hline \end{array}$	$\begin{array}{r} 35 \\ - 22 \\ \hline \end{array}$	$\begin{array}{r} 83 \\ - 78 \\ \hline \end{array}$
---	---	---	---

$\begin{array}{r} 58 \\ - 26 \\ \hline \end{array}$	$\begin{array}{r} 61 \\ - 54 \\ \hline \end{array}$	$\begin{array}{r} 60 \\ - 59 \\ \hline \end{array}$	$\begin{array}{r} 55 \\ - 14 \\ \hline \end{array}$
---	---	---	---

$\begin{array}{r} 66 \\ - 34 \\ \hline \end{array}$	$\begin{array}{r} 45 \\ - 19 \\ \hline \end{array}$	$\begin{array}{r} 95 \\ - 80 \\ \hline \end{array}$	$\begin{array}{r} 84 \\ - 70 \\ \hline \end{array}$
---	---	---	---

Adı: Soyadı:	<b>2.SINIF MATEMATİK DERSİ</b> <b>ÇIKARMA İŞLEMİ</b>	
-----------------	---	--

Sevgili öğrenciler; Aşağıdaki çıkarma işlemlerini yapınız.

$\begin{array}{r} 29 \\ - 27 \\ \hline \end{array}$	$\begin{array}{r} 60 \\ - 15 \\ \hline \end{array}$	$\begin{array}{r} 48 \\ - 7 \\ \hline \end{array}$	$\begin{array}{r} 87 \\ - 81 \\ \hline \end{array}$
---	---	--	---

$\begin{array}{r} 41 \\ - 23 \\ \hline \end{array}$	$\begin{array}{r} 26 \\ - 22 \\ \hline \end{array}$	$\begin{array}{r} 99 \\ - 58 \\ \hline \end{array}$	$\begin{array}{r} 93 \\ - 24 \\ \hline \end{array}$
---	---	---	---

$\begin{array}{r} 55 \\ - 54 \\ \hline \end{array}$	$\begin{array}{r} 88 \\ - 62 \\ \hline \end{array}$	$\begin{array}{r} 35 \\ - 22 \\ \hline \end{array}$	$\begin{array}{r} 83 \\ - 78 \\ \hline \end{array}$
---	---	---	---

$\begin{array}{r} 58 \\ - 26 \\ \hline \end{array}$	$\begin{array}{r} 61 \\ - 54 \\ \hline \end{array}$	$\begin{array}{r} 60 \\ - 59 \\ \hline \end{array}$	$\begin{array}{r} 55 \\ - 14 \\ \hline \end{array}$
---	---	---	---

$\begin{array}{r} 66 \\ - 34 \\ \hline \end{array}$	$\begin{array}{r} 45 \\ - 19 \\ \hline \end{array}$	$\begin{array}{r} 95 \\ - 80 \\ \hline \end{array}$	$\begin{array}{r} 84 \\ - 70 \\ \hline \end{array}$
---	---	---	---

Sevgili öğrenciler; Aşağıdaki çıkarma işlemlerini yapınız.

$\begin{array}{r} 50 \\ - 11 \\ \hline \end{array}$	$\begin{array}{r} 39 \\ - 17 \\ \hline \end{array}$	$\begin{array}{r} 42 \\ - 17 \\ \hline \end{array}$	$\begin{array}{r} 82 \\ - 48 \\ \hline \end{array}$
---	---	---	---

$\begin{array}{r} 75 \\ - 21 \\ \hline \end{array}$	$\begin{array}{r} 18 \\ - 11 \\ \hline \end{array}$	$\begin{array}{r} 52 \\ - 29 \\ \hline \end{array}$	$\begin{array}{r} 56 \\ - 46 \\ \hline \end{array}$
---	---	---	---

$\begin{array}{r} 59 \\ - 43 \\ \hline \end{array}$	$\begin{array}{r} 85 \\ - 63 \\ \hline \end{array}$	$\begin{array}{r} 63 \\ - 5 \\ \hline \end{array}$	$\begin{array}{r} 18 \\ - 12 \\ \hline \end{array}$
---	---	--	---

$\begin{array}{r} 51 \\ - 37 \\ \hline \end{array}$	$\begin{array}{r} 63 \\ - 61 \\ \hline \end{array}$	$\begin{array}{r} 97 \\ - 9 \\ \hline \end{array}$	$\begin{array}{r} 43 \\ - 26 \\ \hline \end{array}$
---	---	--	---

$\begin{array}{r} 79 \\ - 9 \\ \hline \end{array}$	$\begin{array}{r} 94 \\ - 71 \\ \hline \end{array}$	$\begin{array}{r} 79 \\ - 33 \\ \hline \end{array}$	$\begin{array}{r} 10 \\ - 7 \\ \hline \end{array}$
--	---	---	--

Sevgili öğrenciler; Aşağıdaki çıkarma işlemlerini yapınız.

$\begin{array}{r} 50 \\ - 11 \\ \hline \end{array}$	$\begin{array}{r} 39 \\ - 17 \\ \hline \end{array}$	$\begin{array}{r} 42 \\ - 17 \\ \hline \end{array}$	$\begin{array}{r} 82 \\ - 48 \\ \hline \end{array}$
---	---	---	---

$\begin{array}{r} 75 \\ - 21 \\ \hline \end{array}$	$\begin{array}{r} 18 \\ - 11 \\ \hline \end{array}$	$\begin{array}{r} 52 \\ - 29 \\ \hline \end{array}$	$\begin{array}{r} 56 \\ - 46 \\ \hline \end{array}$
---	---	---	---

$\begin{array}{r} 59 \\ - 43 \\ \hline \end{array}$	$\begin{array}{r} 85 \\ - 63 \\ \hline \end{array}$	$\begin{array}{r} 63 \\ - 5 \\ \hline \end{array}$	$\begin{array}{r} 18 \\ - 12 \\ \hline \end{array}$
---	---	--	---

$\begin{array}{r} 51 \\ - 37 \\ \hline \end{array}$	$\begin{array}{r} 63 \\ - 61 \\ \hline \end{array}$	$\begin{array}{r} 97 \\ - 9 \\ \hline \end{array}$	$\begin{array}{r} 43 \\ - 26 \\ \hline \end{array}$
---	---	--	---

$\begin{array}{r} 79 \\ - 9 \\ \hline \end{array}$	$\begin{array}{r} 94 \\ - 71 \\ \hline \end{array}$	$\begin{array}{r} 79 \\ - 33 \\ \hline \end{array}$	$\begin{array}{r} 10 \\ - 7 \\ \hline \end{array}$
--	---	---	--

Adı: Soyadı:	<b>2.SINIF MATEMATİK DERSİ</b> <b>ÇIKARMA İŞLEMİ</b>	
-----------------	---	---

Sevgili öğrenciler; Aşağıdaki çıkarma işlemlerini yapınız.

$\begin{array}{r} 35 \\ - 26 \\ \hline \end{array}$	$\begin{array}{r} 17 \\ - 2 \\ \hline \end{array}$	$\begin{array}{r} 27 \\ - 22 \\ \hline \end{array}$	$\begin{array}{r} 64 \\ - 6 \\ \hline \end{array}$
---	--	---	--

$\begin{array}{r} 31 \\ - 8 \\ \hline \end{array}$	$\begin{array}{r} 90 \\ - 29 \\ \hline \end{array}$	$\begin{array}{r} 14 \\ - 10 \\ \hline \end{array}$	$\begin{array}{r} 44 \\ - 16 \\ \hline \end{array}$
--	---	---	---

$\begin{array}{r} 22 \\ - 8 \\ \hline \end{array}$	$\begin{array}{r} 58 \\ - 49 \\ \hline \end{array}$	$\begin{array}{r} 30 \\ - 15 \\ \hline \end{array}$	$\begin{array}{r} 67 \\ - 26 \\ \hline \end{array}$
--	---	---	---

$\begin{array}{r} 41 \\ - 23 \\ \hline \end{array}$	$\begin{array}{r} 31 \\ - 5 \\ \hline \end{array}$	$\begin{array}{r} 40 \\ - 29 \\ \hline \end{array}$	$\begin{array}{r} 39 \\ - 1 \\ \hline \end{array}$
---	--	---	--

$\begin{array}{r} 76 \\ - 34 \\ \hline \end{array}$	$\begin{array}{r} 75 \\ - 58 \\ \hline \end{array}$	$\begin{array}{r} 17 \\ - 2 \\ \hline \end{array}$	$\begin{array}{r} 60 \\ - 35 \\ \hline \end{array}$
---	---	--	---

Adı: Soyadı:	<b>2.SINIF MATEMATİK DERSİ</b> <b>ÇIKARMA İŞLEMİ</b>	
-----------------	---	--

Sevgili öğrenciler; Aşağıdaki çıkarma işlemlerini yapınız.

$\begin{array}{r} 35 \\ - 26 \\ \hline \end{array}$	$\begin{array}{r} 17 \\ - 2 \\ \hline \end{array}$	$\begin{array}{r} 27 \\ - 22 \\ \hline \end{array}$	$\begin{array}{r} 64 \\ - 6 \\ \hline \end{array}$
---	--	---	--

$\begin{array}{r} 31 \\ - 8 \\ \hline \end{array}$	$\begin{array}{r} 90 \\ - 29 \\ \hline \end{array}$	$\begin{array}{r} 14 \\ - 10 \\ \hline \end{array}$	$\begin{array}{r} 44 \\ - 16 \\ \hline \end{array}$
--	---	---	---

$\begin{array}{r} 22 \\ - 8 \\ \hline \end{array}$	$\begin{array}{r} 58 \\ - 49 \\ \hline \end{array}$	$\begin{array}{r} 30 \\ - 15 \\ \hline \end{array}$	$\begin{array}{r} 67 \\ - 26 \\ \hline \end{array}$
--	---	---	---

$\begin{array}{r} 41 \\ - 23 \\ \hline \end{array}$	$\begin{array}{r} 31 \\ - 5 \\ \hline \end{array}$	$\begin{array}{r} 40 \\ - 29 \\ \hline \end{array}$	$\begin{array}{r} 39 \\ - 1 \\ \hline \end{array}$
---	--	---	--

$\begin{array}{r} 76 \\ - 34 \\ \hline \end{array}$	$\begin{array}{r} 75 \\ - 58 \\ \hline \end{array}$	$\begin{array}{r} 17 \\ - 2 \\ \hline \end{array}$	$\begin{array}{r} 60 \\ - 35 \\ \hline \end{array}$
---	---	--	---



Adı: Soyadı:	<b>2.SINIF MATEMATİK DERSİ</b> <b>ÇIKARMA İŞLEMİ</b>	
-----------------	---	---

Sevgili öğrenciler; Aşağıdaki çıkarma işlemlerini yapınız.

$\begin{array}{r} 31 \\ - 28 \\ \hline \end{array}$	$\begin{array}{r} 86 \\ - 70 \\ \hline \end{array}$	$\begin{array}{r} 51 \\ - 20 \\ \hline \end{array}$	$\begin{array}{r} 69 \\ - 25 \\ \hline \end{array}$
---	---	---	---

$\begin{array}{r} 46 \\ - 22 \\ \hline \end{array}$	$\begin{array}{r} 31 \\ - 30 \\ \hline \end{array}$	$\begin{array}{r} 72 \\ - 68 \\ \hline \end{array}$	$\begin{array}{r} 16 \\ - 6 \\ \hline \end{array}$
---	---	---	--

$\begin{array}{r} 36 \\ - 32 \\ \hline \end{array}$	$\begin{array}{r} 61 \\ - 51 \\ \hline \end{array}$	$\begin{array}{r} 19 \\ - 1 \\ \hline \end{array}$	$\begin{array}{r} 38 \\ - 7 \\ \hline \end{array}$
---	---	--	--

$\begin{array}{r} 48 \\ - 46 \\ \hline \end{array}$	$\begin{array}{r} 73 \\ - 5 \\ \hline \end{array}$	$\begin{array}{r} 27 \\ - 12 \\ \hline \end{array}$	$\begin{array}{r} 33 \\ - 19 \\ \hline \end{array}$
---	--	---	---

$\begin{array}{r} 88 \\ - 53 \\ \hline \end{array}$	$\begin{array}{r} 32 \\ - 13 \\ \hline \end{array}$	$\begin{array}{r} 38 \\ - 16 \\ \hline \end{array}$	$\begin{array}{r} 26 \\ - 22 \\ \hline \end{array}$
---	---	---	---

Adı: Soyadı:	<b>2.SINIF MATEMATİK DERSİ</b> <b>ÇIKARMA İŞLEMİ</b>	
-----------------	---	--

Sevgili öğrenciler; Aşağıdaki çıkarma işlemlerini yapınız.

$\begin{array}{r} 31 \\ - 28 \\ \hline \end{array}$	$\begin{array}{r} 86 \\ - 70 \\ \hline \end{array}$	$\begin{array}{r} 51 \\ - 20 \\ \hline \end{array}$	$\begin{array}{r} 69 \\ - 25 \\ \hline \end{array}$
---	---	---	---

$\begin{array}{r} 46 \\ - 22 \\ \hline \end{array}$	$\begin{array}{r} 31 \\ - 30 \\ \hline \end{array}$	$\begin{array}{r} 72 \\ - 68 \\ \hline \end{array}$	$\begin{array}{r} 16 \\ - 6 \\ \hline \end{array}$
---	---	---	--

$\begin{array}{r} 36 \\ - 32 \\ \hline \end{array}$	$\begin{array}{r} 61 \\ - 51 \\ \hline \end{array}$	$\begin{array}{r} 19 \\ - 1 \\ \hline \end{array}$	$\begin{array}{r} 38 \\ - 7 \\ \hline \end{array}$
---	---	--	--

$\begin{array}{r} 48 \\ - 46 \\ \hline \end{array}$	$\begin{array}{r} 73 \\ - 5 \\ \hline \end{array}$	$\begin{array}{r} 27 \\ - 12 \\ \hline \end{array}$	$\begin{array}{r} 33 \\ - 19 \\ \hline \end{array}$
---	--	---	---

$\begin{array}{r} 88 \\ - 53 \\ \hline \end{array}$	$\begin{array}{r} 32 \\ - 13 \\ \hline \end{array}$	$\begin{array}{r} 38 \\ - 16 \\ \hline \end{array}$	$\begin{array}{r} 26 \\ - 22 \\ \hline \end{array}$
---	---	---	---

Adı: Soyadı:	<b>2.SINIF MATEMATİK DERSİ</b> <b>ÇIKARMA İŞLEMİ</b>	
-----------------	---	---

Sevgili öğrenciler; Aşağıdaki çıkarma işlemlerini yapınız.

$\begin{array}{r} 17 \\ - 4 \\ \hline \end{array}$	$\begin{array}{r} 99 \\ - 70 \\ \hline \end{array}$	$\begin{array}{r} 12 \\ - 4 \\ \hline \end{array}$	$\begin{array}{r} 94 \\ - 69 \\ \hline \end{array}$
--	---	--	---

$\begin{array}{r} 93 \\ - 33 \\ \hline \end{array}$	$\begin{array}{r} 90 \\ - 22 \\ \hline \end{array}$	$\begin{array}{r} 86 \\ - 67 \\ \hline \end{array}$	$\begin{array}{r} 57 \\ - 48 \\ \hline \end{array}$
---	---	---	---

$\begin{array}{r} 34 \\ - 22 \\ \hline \end{array}$	$\begin{array}{r} 26 \\ - 25 \\ \hline \end{array}$	$\begin{array}{r} 65 \\ - 11 \\ \hline \end{array}$	$\begin{array}{r} 66 \\ - 62 \\ \hline \end{array}$
---	---	---	---

$\begin{array}{r} 22 \\ - 11 \\ \hline \end{array}$	$\begin{array}{r} 47 \\ - 30 \\ \hline \end{array}$	$\begin{array}{r} 36 \\ - 28 \\ \hline \end{array}$	$\begin{array}{r} 83 \\ - 33 \\ \hline \end{array}$
---	---	---	---

$\begin{array}{r} 56 \\ - 17 \\ \hline \end{array}$	$\begin{array}{r} 35 \\ - 31 \\ \hline \end{array}$	$\begin{array}{r} 22 \\ - 13 \\ \hline \end{array}$	$\begin{array}{r} 61 \\ - 60 \\ \hline \end{array}$
---	---	---	---

Adı: Soyadı:	<b>2.SINIF MATEMATİK DERSİ</b> <b>ÇIKARMA İŞLEMİ</b>	
-----------------	---	--

Sevgili öğrenciler; Aşağıdaki çıkarma işlemlerini yapınız.

$\begin{array}{r} 17 \\ - 4 \\ \hline \end{array}$	$\begin{array}{r} 99 \\ - 70 \\ \hline \end{array}$	$\begin{array}{r} 12 \\ - 4 \\ \hline \end{array}$	$\begin{array}{r} 94 \\ - 69 \\ \hline \end{array}$
--	---	--	---

$\begin{array}{r} 93 \\ - 33 \\ \hline \end{array}$	$\begin{array}{r} 90 \\ - 22 \\ \hline \end{array}$	$\begin{array}{r} 86 \\ - 67 \\ \hline \end{array}$	$\begin{array}{r} 57 \\ - 48 \\ \hline \end{array}$
---	---	---	---

$\begin{array}{r} 34 \\ - 22 \\ \hline \end{array}$	$\begin{array}{r} 26 \\ - 25 \\ \hline \end{array}$	$\begin{array}{r} 65 \\ - 11 \\ \hline \end{array}$	$\begin{array}{r} 66 \\ - 62 \\ \hline \end{array}$
---	---	---	---

$\begin{array}{r} 22 \\ - 11 \\ \hline \end{array}$	$\begin{array}{r} 47 \\ - 30 \\ \hline \end{array}$	$\begin{array}{r} 36 \\ - 28 \\ \hline \end{array}$	$\begin{array}{r} 83 \\ - 33 \\ \hline \end{array}$
---	---	---	---

$\begin{array}{r} 56 \\ - 17 \\ \hline \end{array}$	$\begin{array}{r} 35 \\ - 31 \\ \hline \end{array}$	$\begin{array}{r} 22 \\ - 13 \\ \hline \end{array}$	$\begin{array}{r} 61 \\ - 60 \\ \hline \end{array}$
---	---	---	---

Sevgili öğrenciler; Aşağıdaki çıkarma işlemlerini yapınız.

$\begin{array}{r} 42 \\ - 35 \\ \hline \end{array}$	$\begin{array}{r} 26 \\ - 11 \\ \hline \end{array}$	$\begin{array}{r} 58 \\ - 8 \\ \hline \end{array}$	$\begin{array}{r} 80 \\ - 72 \\ \hline \end{array}$
---	---	--	---

$\begin{array}{r} 29 \\ - 25 \\ \hline \end{array}$	$\begin{array}{r} 26 \\ - 12 \\ \hline \end{array}$	$\begin{array}{r} 74 \\ - 65 \\ \hline \end{array}$	$\begin{array}{r} 25 \\ - 4 \\ \hline \end{array}$
---	---	---	--

$\begin{array}{r} 39 \\ - 32 \\ \hline \end{array}$	$\begin{array}{r} 19 \\ - 14 \\ \hline \end{array}$	$\begin{array}{r} 12 \\ - 11 \\ \hline \end{array}$	$\begin{array}{r} 22 \\ - 17 \\ \hline \end{array}$
---	---	---	---

$\begin{array}{r} 74 \\ - 19 \\ \hline \end{array}$	$\begin{array}{r} 86 \\ - 58 \\ \hline \end{array}$	$\begin{array}{r} 42 \\ - 14 \\ \hline \end{array}$	$\begin{array}{r} 61 \\ - 28 \\ \hline \end{array}$
---	---	---	---

$\begin{array}{r} 96 \\ - 58 \\ \hline \end{array}$	$\begin{array}{r} 32 \\ - 25 \\ \hline \end{array}$	$\begin{array}{r} 10 \\ - 3 \\ \hline \end{array}$	$\begin{array}{r} 76 \\ - 57 \\ \hline \end{array}$
---	---	--	---

Sevgili öğrenciler; Aşağıdaki çıkarma işlemlerini yapınız.

$\begin{array}{r} 42 \\ - 35 \\ \hline \end{array}$	$\begin{array}{r} 26 \\ - 11 \\ \hline \end{array}$	$\begin{array}{r} 58 \\ - 8 \\ \hline \end{array}$	$\begin{array}{r} 80 \\ - 72 \\ \hline \end{array}$
---	---	--	---

$\begin{array}{r} 29 \\ - 25 \\ \hline \end{array}$	$\begin{array}{r} 26 \\ - 12 \\ \hline \end{array}$	$\begin{array}{r} 74 \\ - 65 \\ \hline \end{array}$	$\begin{array}{r} 25 \\ - 4 \\ \hline \end{array}$
---	---	---	--

$\begin{array}{r} 39 \\ - 32 \\ \hline \end{array}$	$\begin{array}{r} 19 \\ - 14 \\ \hline \end{array}$	$\begin{array}{r} 12 \\ - 11 \\ \hline \end{array}$	$\begin{array}{r} 22 \\ - 17 \\ \hline \end{array}$
---	---	---	---

$\begin{array}{r} 74 \\ - 19 \\ \hline \end{array}$	$\begin{array}{r} 86 \\ - 58 \\ \hline \end{array}$	$\begin{array}{r} 42 \\ - 14 \\ \hline \end{array}$	$\begin{array}{r} 61 \\ - 28 \\ \hline \end{array}$
---	---	---	---

$\begin{array}{r} 96 \\ - 58 \\ \hline \end{array}$	$\begin{array}{r} 32 \\ - 25 \\ \hline \end{array}$	$\begin{array}{r} 10 \\ - 3 \\ \hline \end{array}$	$\begin{array}{r} 76 \\ - 57 \\ \hline \end{array}$
---	---	--	---

Adı: Soyadı:	<b>2.SINIF MATEMATİK DERSİ</b> <b>ÇIKARMA İŞLEMİ</b>	
-----------------	---	---

Sevgili öğrenciler; Aşağıdaki çıkarma işlemlerini yapınız.

$\begin{array}{r} 79 \\ - 33 \\ \hline \end{array}$	$\begin{array}{r} 39 \\ - 2 \\ \hline \end{array}$	$\begin{array}{r} 85 \\ - 29 \\ \hline \end{array}$	$\begin{array}{r} 15 \\ - 12 \\ \hline \end{array}$
$\begin{array}{r} 30 \\ - 10 \\ \hline \end{array}$	$\begin{array}{r} 84 \\ - 72 \\ \hline \end{array}$	$\begin{array}{r} 90 \\ - 50 \\ \hline \end{array}$	$\begin{array}{r} 60 \\ - 37 \\ \hline \end{array}$
$\begin{array}{r} 97 \\ - 80 \\ \hline \end{array}$	$\begin{array}{r} 55 \\ - 32 \\ \hline \end{array}$	$\begin{array}{r} 62 \\ - 13 \\ \hline \end{array}$	$\begin{array}{r} 23 \\ - 16 \\ \hline \end{array}$
$\begin{array}{r} 43 \\ - 20 \\ \hline \end{array}$	$\begin{array}{r} 86 \\ - 36 \\ \hline \end{array}$	$\begin{array}{r} 61 \\ - 19 \\ \hline \end{array}$	$\begin{array}{r} 60 \\ - 54 \\ \hline \end{array}$
$\begin{array}{r} 15 \\ - 10 \\ \hline \end{array}$	$\begin{array}{r} 24 \\ - 20 \\ \hline \end{array}$	$\begin{array}{r} 64 \\ - 56 \\ \hline \end{array}$	$\begin{array}{r} 65 \\ - 47 \\ \hline \end{array}$

Adı: Soyadı:	<b>2.SINIF MATEMATİK DERSİ</b> <b>ÇIKARMA İŞLEMİ</b>	
-----------------	---	--

Sevgili öğrenciler; Aşağıdaki çıkarma işlemlerini yapınız.

$\begin{array}{r} 79 \\ - 33 \\ \hline \end{array}$	$\begin{array}{r} 39 \\ - 2 \\ \hline \end{array}$	$\begin{array}{r} 85 \\ - 29 \\ \hline \end{array}$	$\begin{array}{r} 15 \\ - 12 \\ \hline \end{array}$
$\begin{array}{r} 30 \\ - 10 \\ \hline \end{array}$	$\begin{array}{r} 84 \\ - 72 \\ \hline \end{array}$	$\begin{array}{r} 90 \\ - 50 \\ \hline \end{array}$	$\begin{array}{r} 60 \\ - 37 \\ \hline \end{array}$
$\begin{array}{r} 97 \\ - 80 \\ \hline \end{array}$	$\begin{array}{r} 55 \\ - 32 \\ \hline \end{array}$	$\begin{array}{r} 62 \\ - 13 \\ \hline \end{array}$	$\begin{array}{r} 23 \\ - 16 \\ \hline \end{array}$
$\begin{array}{r} 43 \\ - 20 \\ \hline \end{array}$	$\begin{array}{r} 86 \\ - 36 \\ \hline \end{array}$	$\begin{array}{r} 61 \\ - 19 \\ \hline \end{array}$	$\begin{array}{r} 60 \\ - 54 \\ \hline \end{array}$
$\begin{array}{r} 15 \\ - 10 \\ \hline \end{array}$	$\begin{array}{r} 24 \\ - 20 \\ \hline \end{array}$	$\begin{array}{r} 64 \\ - 56 \\ \hline \end{array}$	$\begin{array}{r} 65 \\ - 47 \\ \hline \end{array}$

Adı: Soyadı:	<b>2.SINIF MATEMATİK DERSİ</b> <b>ÇIKARMA İŞLEMİ</b>	
-----------------	---	---

Sevgili öğrenciler; Aşağıdaki çıkarma işlemlerini yapınız.

$\begin{array}{r} 89 \\ - 60 \\ \hline \end{array}$	$\begin{array}{r} 93 \\ - 86 \\ \hline \end{array}$	$\begin{array}{r} 36 \\ - 29 \\ \hline \end{array}$	$\begin{array}{r} 63 \\ - 53 \\ \hline \end{array}$
---	---	---	---

$\begin{array}{r} 55 \\ - 13 \\ \hline \end{array}$	$\begin{array}{r} 31 \\ - 13 \\ \hline \end{array}$	$\begin{array}{r} 62 \\ - 11 \\ \hline \end{array}$	$\begin{array}{r} 11 \\ - 9 \\ \hline \end{array}$
---	---	---	--

$\begin{array}{r} 61 \\ - 42 \\ \hline \end{array}$	$\begin{array}{r} 82 \\ - 54 \\ \hline \end{array}$	$\begin{array}{r} 12 \\ - 10 \\ \hline \end{array}$	$\begin{array}{r} 59 \\ - 37 \\ \hline \end{array}$
---	---	---	---

$\begin{array}{r} 25 \\ - 11 \\ \hline \end{array}$	$\begin{array}{r} 68 \\ - 17 \\ \hline \end{array}$	$\begin{array}{r} 13 \\ - 4 \\ \hline \end{array}$	$\begin{array}{r} 49 \\ - 36 \\ \hline \end{array}$
---	---	--	---

$\begin{array}{r} 10 \\ - 8 \\ \hline \end{array}$	$\begin{array}{r} 86 \\ - 27 \\ \hline \end{array}$	$\begin{array}{r} 66 \\ - 21 \\ \hline \end{array}$	$\begin{array}{r} 81 \\ - 51 \\ \hline \end{array}$
--	---	---	---

Adı: Soyadı:	<b>2.SINIF MATEMATİK DERSİ</b> <b>ÇIKARMA İŞLEMİ</b>	
-----------------	---	--

Sevgili öğrenciler; Aşağıdaki çıkarma işlemlerini yapınız.

$\begin{array}{r} 89 \\ - 60 \\ \hline \end{array}$	$\begin{array}{r} 93 \\ - 86 \\ \hline \end{array}$	$\begin{array}{r} 36 \\ - 29 \\ \hline \end{array}$	$\begin{array}{r} 63 \\ - 53 \\ \hline \end{array}$
---	---	---	---

$\begin{array}{r} 55 \\ - 13 \\ \hline \end{array}$	$\begin{array}{r} 31 \\ - 13 \\ \hline \end{array}$	$\begin{array}{r} 62 \\ - 11 \\ \hline \end{array}$	$\begin{array}{r} 11 \\ - 9 \\ \hline \end{array}$
---	---	---	--

$\begin{array}{r} 61 \\ - 42 \\ \hline \end{array}$	$\begin{array}{r} 82 \\ - 54 \\ \hline \end{array}$	$\begin{array}{r} 12 \\ - 10 \\ \hline \end{array}$	$\begin{array}{r} 59 \\ - 37 \\ \hline \end{array}$
---	---	---	---

$\begin{array}{r} 25 \\ - 11 \\ \hline \end{array}$	$\begin{array}{r} 68 \\ - 17 \\ \hline \end{array}$	$\begin{array}{r} 13 \\ - 4 \\ \hline \end{array}$	$\begin{array}{r} 49 \\ - 36 \\ \hline \end{array}$
---	---	--	---

$\begin{array}{r} 10 \\ - 8 \\ \hline \end{array}$	$\begin{array}{r} 86 \\ - 27 \\ \hline \end{array}$	$\begin{array}{r} 66 \\ - 21 \\ \hline \end{array}$	$\begin{array}{r} 81 \\ - 51 \\ \hline \end{array}$
--	---	---	---

Adı: Soyadı:	<b>2.SINIF MATEMATİK DERSİ</b> <b>ÇIKARMA İŞLEMİ</b>	
-----------------	---	---

Sevgili öğrenciler; Aşağıdaki çıkarma işlemlerini yapınız.

$\begin{array}{r} 53 \\ - 24 \\ \hline \end{array}$	$\begin{array}{r} 10 \\ - 2 \\ \hline \end{array}$	$\begin{array}{r} 57 \\ - 17 \\ \hline \end{array}$	$\begin{array}{r} 38 \\ - 27 \\ \hline \end{array}$
---	--	---	---

$\begin{array}{r} 85 \\ - 2 \\ \hline \end{array}$	$\begin{array}{r} 24 \\ - 5 \\ \hline \end{array}$	$\begin{array}{r} 75 \\ - 70 \\ \hline \end{array}$	$\begin{array}{r} 90 \\ - 36 \\ \hline \end{array}$
--	--	---	---

$\begin{array}{r} 27 \\ - 1 \\ \hline \end{array}$	$\begin{array}{r} 88 \\ - 30 \\ \hline \end{array}$	$\begin{array}{r} 79 \\ - 64 \\ \hline \end{array}$	$\begin{array}{r} 54 \\ - 33 \\ \hline \end{array}$
--	---	---	---

$\begin{array}{r} 14 \\ - 5 \\ \hline \end{array}$	$\begin{array}{r} 64 \\ - 1 \\ \hline \end{array}$	$\begin{array}{r} 64 \\ - 42 \\ \hline \end{array}$	$\begin{array}{r} 51 \\ - 49 \\ \hline \end{array}$
--	--	---	---

$\begin{array}{r} 22 \\ - 3 \\ \hline \end{array}$	$\begin{array}{r} 44 \\ - 25 \\ \hline \end{array}$	$\begin{array}{r} 15 \\ - 1 \\ \hline \end{array}$	$\begin{array}{r} 12 \\ - 2 \\ \hline \end{array}$
--	---	--	--

Adı: Soyadı:	<b>2.SINIF MATEMATİK DERSİ</b> <b>ÇIKARMA İŞLEMİ</b>	
-----------------	---	--

Sevgili öğrenciler; Aşağıdaki çıkarma işlemlerini yapınız.

$\begin{array}{r} 53 \\ - 24 \\ \hline \end{array}$	$\begin{array}{r} 10 \\ - 2 \\ \hline \end{array}$	$\begin{array}{r} 57 \\ - 17 \\ \hline \end{array}$	$\begin{array}{r} 38 \\ - 27 \\ \hline \end{array}$
---	--	---	---

$\begin{array}{r} 85 \\ - 2 \\ \hline \end{array}$	$\begin{array}{r} 24 \\ - 5 \\ \hline \end{array}$	$\begin{array}{r} 75 \\ - 70 \\ \hline \end{array}$	$\begin{array}{r} 90 \\ - 36 \\ \hline \end{array}$
--	--	---	---

$\begin{array}{r} 27 \\ - 1 \\ \hline \end{array}$	$\begin{array}{r} 88 \\ - 30 \\ \hline \end{array}$	$\begin{array}{r} 79 \\ - 64 \\ \hline \end{array}$	$\begin{array}{r} 54 \\ - 33 \\ \hline \end{array}$
--	---	---	---

$\begin{array}{r} 14 \\ - 5 \\ \hline \end{array}$	$\begin{array}{r} 64 \\ - 1 \\ \hline \end{array}$	$\begin{array}{r} 64 \\ - 42 \\ \hline \end{array}$	$\begin{array}{r} 51 \\ - 49 \\ \hline \end{array}$
--	--	---	---

$\begin{array}{r} 22 \\ - 3 \\ \hline \end{array}$	$\begin{array}{r} 44 \\ - 25 \\ \hline \end{array}$	$\begin{array}{r} 15 \\ - 1 \\ \hline \end{array}$	$\begin{array}{r} 12 \\ - 2 \\ \hline \end{array}$
--	---	--	--

Adı: Soyadı:	<b>2.SINIF MATEMATİK DERSİ</b> <b>ÇIKARMA İŞLEMİ</b>	
-----------------	---	---

Sevgili öğrenciler; Aşağıdaki çıkarma işlemlerini yapınız.

$\begin{array}{r} 77 \\ - 20 \\ \hline \end{array}$	$\begin{array}{r} 77 \\ - 59 \\ \hline \end{array}$	$\begin{array}{r} 24 \\ - 16 \\ \hline \end{array}$	$\begin{array}{r} 83 \\ - 5 \\ \hline \end{array}$
---	---	---	--

$\begin{array}{r} 75 \\ - 6 \\ \hline \end{array}$	$\begin{array}{r} 71 \\ - 8 \\ \hline \end{array}$	$\begin{array}{r} 25 \\ - 6 \\ \hline \end{array}$	$\begin{array}{r} 50 \\ - 36 \\ \hline \end{array}$
--	--	--	---

$\begin{array}{r} 41 \\ - 2 \\ \hline \end{array}$	$\begin{array}{r} 32 \\ - 6 \\ \hline \end{array}$	$\begin{array}{r} 88 \\ - 55 \\ \hline \end{array}$	$\begin{array}{r} 60 \\ - 59 \\ \hline \end{array}$
--	--	---	---

$\begin{array}{r} 31 \\ - 8 \\ \hline \end{array}$	$\begin{array}{r} 70 \\ - 12 \\ \hline \end{array}$	$\begin{array}{r} 19 \\ - 12 \\ \hline \end{array}$	$\begin{array}{r} 43 \\ - 2 \\ \hline \end{array}$
--	---	---	--

$\begin{array}{r} 73 \\ - 54 \\ \hline \end{array}$	$\begin{array}{r} 16 \\ - 8 \\ \hline \end{array}$	$\begin{array}{r} 72 \\ - 54 \\ \hline \end{array}$	$\begin{array}{r} 59 \\ - 43 \\ \hline \end{array}$
---	--	---	---

Adı: Soyadı:	<b>2.SINIF MATEMATİK DERSİ</b> <b>ÇIKARMA İŞLEMİ</b>	
-----------------	---	--

Sevgili öğrenciler; Aşağıdaki çıkarma işlemlerini yapınız.


$\begin{array}{r} 77 \\ - 20 \\ \hline \end{array}$	$\begin{array}{r} 77 \\ - 59 \\ \hline \end{array}$	$\begin{array}{r} 24 \\ - 16 \\ \hline \end{array}$	$\begin{array}{r} 83 \\ - 5 \\ \hline \end{array}$
---	---	---	--


$\begin{array}{r} 75 \\ - 6 \\ \hline \end{array}$	$\begin{array}{r} 71 \\ - 8 \\ \hline \end{array}$	$\begin{array}{r} 25 \\ - 6 \\ \hline \end{array}$	$\begin{array}{r} 50 \\ - 36 \\ \hline \end{array}$
--	--	--	---

$\begin{array}{r} 41 \\ - 2 \\ \hline \end{array}$	$\begin{array}{r} 32 \\ - 6 \\ \hline \end{array}$	$\begin{array}{r} 88 \\ - 55 \\ \hline \end{array}$	$\begin{array}{r} 60 \\ - 59 \\ \hline \end{array}$
--	--	---	---


$\begin{array}{r} 31 \\ - 8 \\ \hline \end{array}$	$\begin{array}{r} 70 \\ - 12 \\ \hline \end{array}$	$\begin{array}{r} 19 \\ - 12 \\ \hline \end{array}$	$\begin{array}{r} 43 \\ - 2 \\ \hline \end{array}$
--	---	---	--


$\begin{array}{r} 73 \\ - 54 \\ \hline \end{array}$	$\begin{array}{r} 16 \\ - 8 \\ \hline \end{array}$	$\begin{array}{r} 72 \\ - 54 \\ \hline \end{array}$	$\begin{array}{r} 59 \\ - 43 \\ \hline \end{array}$
---	--	---	---


Adı: Soyadı:	<b>2.SINIF MATEMATİK DERSİ</b> <b>ÇIKARMA İŞLEMİ</b>	
Sevgili öğrenciler; Aşağıdaki çıkarma işlemlerini yapınız.		
96-19 =	20-1 =	
42-14 =	87-49 =	
88-46 =	86-41 =	
33-7 =	42-12 =	
89-23 =	73-45 =	
93-79 =	82-31 =	
78-59 =	21-19 =	
63-35 =	94-74 =	
45-31 =	38-19 =	
37-23 =	58-44 =	


Adı: Soyadı:	<b>2.SINIF MATEMATİK DERSİ</b> <b>ÇIKARMA İŞLEMİ</b>	
Sevgili öğrenciler; Aşağıdaki çıkarma işlemlerini yapınız.		
96-19 =	20-1 =	
42-14 =	87-49 =	
88-46 =	86-41 =	
33-7 =	42-12 =	
89-23 =	73-45 =	
93-79 =	82-31 =	
78-59 =	21-19 =	
63-35 =	94-74 =	
45-31 =	38-19 =	
37-23 =	58-44 =	





Adı: Soyadı:	<b>2.SINIF MATEMATİK DERSİ</b> <b>ÇIKARMA İŞLEMİ</b>	
Sevgili öğrenciler; Aşağıdaki çıkarma işlemlerini yapınız.		
65-27 =	89-4 =	
46-1 =	84-58 =	
25-16 =	76-45 =	
69-65 =	34-24 =	
12-1 =	96-4 =	
91-78 =	93-46 =	
79-48 =	28-1 =	
24-18 =	73-50 =	
63-9 =	48-34 =	
98-22 =	53-6 =	


Adı: Soyadı:	<b>2.SINIF MATEMATİK DERSİ</b> <b>ÇIKARMA İŞLEMİ</b>	
Sevgili öğrenciler; Aşağıdaki çıkarma işlemlerini yapınız.		
65-27 =	89-4 =	
46-1 =	84-58 =	
25-16 =	76-45 =	
69-65 =	34-24 =	
12-1 =	96-4 =	
91-78 =	93-46 =	
79-48 =	28-1 =	
24-18 =	73-50 =	
63-9 =	48-34 =	
98-22 =	53-6 =	


Adı: Soyadı:	<b>2.SINIF MATEMATİK DERSİ</b> <b>ÇIKARMA İŞLEMİ</b>	
Sevgili öğrenciler; Aşağıdaki çıkarma işlemlerini yapınız.		
62-58 =	85-77 =	
92-19 =	39-9 =	
61-19 =	94-64 =	
84-30 =	73-47 =	
63-28 =	16-15 =	
58-11 =	28-8 =	
36-10 =	11-6 =	
94-73 =	98-77 =	
58-56 =	57-20 =	
70-21 =	15-5 =	


Adı: Soyadı:	<b>2.SINIF MATEMATİK DERSİ</b> <b>ÇIKARMA İŞLEMİ</b>	
Sevgili öğrenciler; Aşağıdaki çıkarma işlemlerini yapınız.		
62-58 =	85-77 =	
92-19 =	39-9 =	
61-19 =	94-64 =	
84-30 =	73-47 =	
63-28 =	16-15 =	
58-11 =	28-8 =	
36-10 =	11-6 =	
94-73 =	98-77 =	
58-56 =	57-20 =	
70-21 =	15-5 =	


Adı: Soyadı:	<b>2.SINIF MATEMATİK DERSİ</b> <b>ÇIKARMA İŞLEMİ</b>	
Sevgili öğrenciler; Aşağıdaki çıkarma işlemlerini yapınız.		
73-38 =	67-60 =	
65-54 =	28-18 =	
39-34 =	28-24 =	
54-37 =	92-53 =	
87-73 =	97-3 =	
10-9 =	47-45 =	
93-29 =	67-38 =	
98-90 =	39-14 =	
94-40 =	16-4 =	
40-36 =	68-47 =	


Adı: Soyadı:	<b>2.SINIF MATEMATİK DERSİ</b> <b>ÇIKARMA İŞLEMİ</b>	
Sevgili öğrenciler; Aşağıdaki çıkarma işlemlerini yapınız.		
73-38 =	67-60 =	
65-54 =	28-18 =	
39-34 =	28-24 =	
54-37 =	92-53 =	
87-73 =	97-3 =	
10-9 =	47-45 =	
93-29 =	67-38 =	
98-90 =	39-14 =	
94-40 =	16-4 =	
40-36 =	68-47 =	


Adı: Soyadı:	<b>2.SINIF MATEMATİK DERSİ</b> <b>ÇIKARMA İŞLEMİ</b>	
Sevgili öğrenciler; Aşağıdaki çıkarma işlemlerini yapınız.		
13-6 =	96-48 =	
50-35 =	15-3 =	
67-30 =	27-11 =	
64-54 =	89-39 =	
10-7 =	21-18 =	
23-2 =	54-10 =	
35-13 =	91-83 =	
43-24 =	64-45 =	
43-14 =	54-40 =	
53-22 =	44-8 =	


Adı: Soyadı:	<b>2.SINIF MATEMATİK DERSİ</b> <b>ÇIKARMA İŞLEMİ</b>	
Sevgili öğrenciler; Aşağıdaki çıkarma işlemlerini yapınız.		
13-6 =	96-48 =	
50-35 =	15-3 =	
67-30 =	27-11 =	
64-54 =	89-39 =	
10-7 =	21-18 =	
23-2 =	54-10 =	
35-13 =	91-83 =	
43-24 =	64-45 =	
43-14 =	54-40 =	
53-22 =	44-8 =	


Adı: Soyadı:	<b>2.SINIF MATEMATİK DERSİ</b> <b>ÇIKARMA İŞLEMİ</b>	
Sevgili öğrenciler; Aşağıdaki çıkarma işlemlerini yapınız.		
27-22 =	68-50 =	
75-18 =	71-14 =	
98-8 =	92-83 =	
25-5 =	45-2 =	
91-53 =	97-6 =	
25-12 =	86-12 =	
10-8 =	54-15 =	
43-32 =	35-10 =	
31-2 =	11-9 =	
54-49 =	95-42 =	


Adı: Soyadı:	<b>2.SINIF MATEMATİK DERSİ</b> <b>ÇIKARMA İŞLEMİ</b>	
Sevgili öğrenciler; Aşağıdaki çıkarma işlemlerini yapınız.		
27-22 =	68-50 =	
75-18 =	71-14 =	
98-8 =	92-83 =	
25-5 =	45-2 =	
91-53 =	97-6 =	
25-12 =	86-12 =	
10-8 =	54-15 =	
43-32 =	35-10 =	
31-2 =	11-9 =	
54-49 =	95-42 =	


Adı: Soyadı:	<b>2.SINIF MATEMATİK DERSİ</b> <b>ÇIKARMA İŞLEMİ</b>	
Sevgili öğrenciler; Aşağıdaki çıkarma işlemlerini yapınız.		
18-10 =	56-14 =	
97-12 =	94-19 =	
11-8 =	38-30 =	
59-28 =	76-71 =	
96-16 =	19-14 =	
96-95 =	65-43 =	
54-31 =	50-41 =	
16-12 =	91-22 =	
86-57 =	79-27 =	
63-61 =	33-13 =	

Adı: Soyadı:	<b>2.SINIF MATEMATİK DERSİ</b> <b>ÇIKARMA İŞLEMİ</b>	
Sevgili öğrenciler; Aşağıdaki çıkarma işlemlerini yapınız.		
18-10 =	56-14 =	
97-12 =	94-19 =	
11-8 =	38-30 =	
59-28 =	76-71 =	
96-16 =	19-14 =	
96-95 =	65-43 =	
54-31 =	50-41 =	
16-12 =	91-22 =	
86-57 =	79-27 =	
63-61 =	33-13 =	

Adı: Soyadı:	<b>2.SINIF MATEMATİK DERSİ</b> <b>ÇIKARMA İŞLEMİ</b>	
Sevgili öğrenciler; Aşağıdaki çıkarma işlemlerini yapınız.		
81-17 =	41-15 =	
83-32 =	48-13 =	
80-66 =	34-26 =	
86-68 =	29-20 =	
95-31 =	29-15 =	
52-18 =	42-15 =	
20-10 =	13-3 =	
80-7 =	41-2 =	
32-9 =	37-4 =	
40-6 =	30-5 =	

Adı: Soyadı:	<b>2.SINIF MATEMATİK DERSİ</b> <b>ÇIKARMA İŞLEMİ</b>	
Sevgili öğrenciler; Aşağıdaki çıkarma işlemlerini yapınız.		
81-17 =	41-15 =	
83-32 =	48-13 =	
80-66 =	34-26 =	
86-68 =	29-20 =	
95-31 =	29-15 =	
52-18 =	42-15 =	
20-10 =	13-3 =	
80-7 =	41-2 =	
32-9 =	37-4 =	
40-6 =	30-5 =	

Adı: Soyadı:	<b>2.SINIF MATEMATİK DERSİ</b> <b>ÇIKARMA İŞLEMİ</b>	
Sevgili öğrenciler; Aşağıdaki çıkarma işleminde eksilen sayı verilmemiştir. Eksilen sayıyı bulmak için çıkan sayı ile farkı toplamalıyız.		
....-35 = 19	....-60 = 50	
....-56 = 42	....-37 = 7	
....-41 = 26	....-30 = 17	
....-47 = 26	....-11 = 7	
....-24 = 14	....-72 = 41	
....-27 = 9	....-40 = 11	
....-73 = 45	....-43 = 17	
....-48 = 14	....-22 = 11	
....-49 = 38	....-33 = 4	
....-62 = 27	....-49 = 3	

Adı: Soyadı:	<b>2.SINIF MATEMATİK DERSİ</b> <b>ÇIKARMA İŞLEMİ</b>	
Sevgili öğrenciler; Aşağıdaki çıkarma işleminde eksilen sayı verilmemiştir. Eksilen sayıyı bulmak için çıkan sayı ile farkı toplamalıyız.		
....-35 = 19	....-60 = 50	
....-56 = 42	....-37 = 7	
....-41 = 26	....-30 = 17	
....-47 = 26	....-11 = 7	
....-24 = 14	....-72 = 41	
....-27 = 9	....-40 = 11	
....-73 = 45	....-43 = 17	
....-48 = 14	....-22 = 11	
....-49 = 38	....-33 = 4	
....-62 = 27	....-49 = 3	