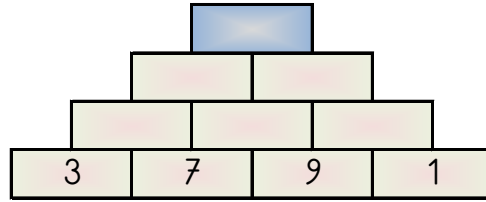
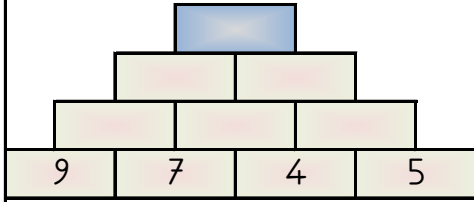
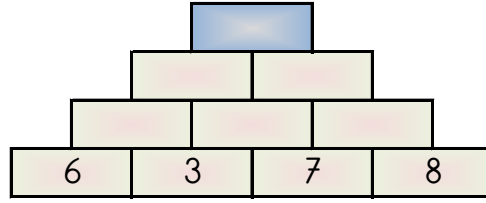
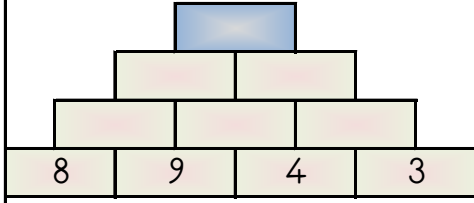


PİRAMİT TOPLAMA

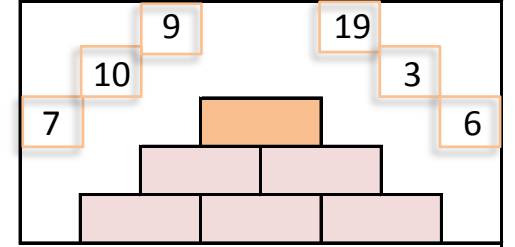
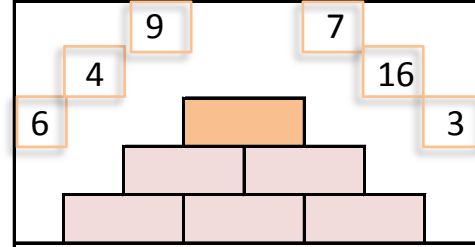
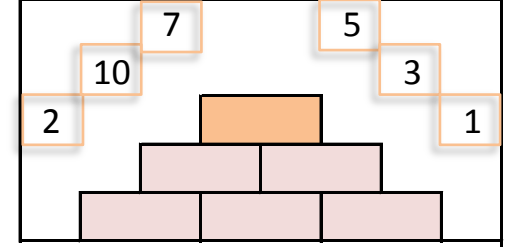
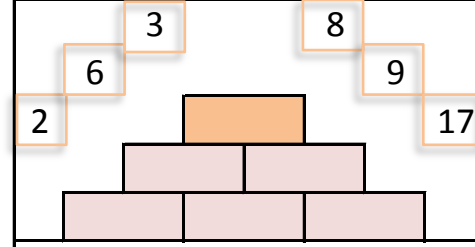
Piramitin altındaki sayıları toplayarak tepedeki sayıya ulaşın ve bu sayıyı işaretleyin.



44 50 52 39 47

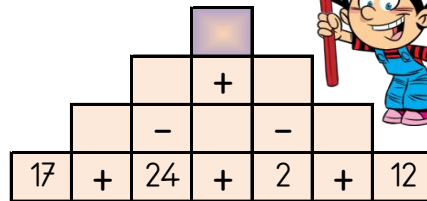
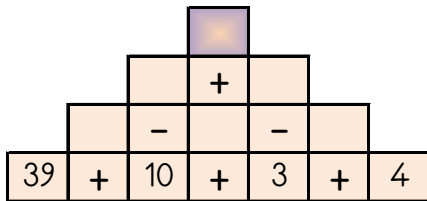
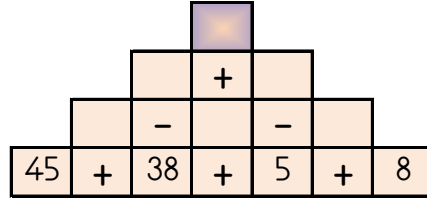
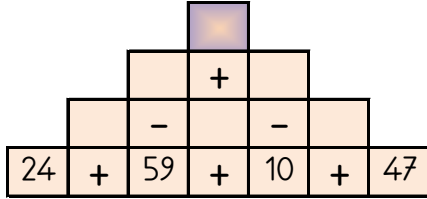
SAYILARI YERLEŞTİR (TOPLAMA PİRAMİDİ)

Toplama piramidi üzerindeki sayılar yerlerinden çıkmış. Sayıları yerlerine yazabilir misiniz?



PİRAMİT TOPLAMA ÇIKARMA

Sayılar arasındaki işlemleri yaparak piramitin tepesindeki sayıya ulaşın.



70 27 26 88 42

TOPLAMA PİRAMİDİNDE VERİLMEYEN SAYILAR

Toplama piramidi üzerinde bazı sayılar verilmemiştir. Bunları bulabilir misin?

