


10 İÇİNDE ÇIKARMA

ÖRNEK:

$$8 - 3 = 5$$



1)

$$8 - 3 = 5$$



2)

$$7 - 4 = \dots\dots\dots$$



3)

$$6 - 4 = \dots\dots\dots$$



4)

$$9 - 5 = \dots\dots\dots$$



5)

$$5 - 5 = \dots\dots\dots$$



6)

$$8 - 5 = \dots\dots\dots$$



7)

$$9 - 3 = \dots\dots\dots$$



8)

$$8 - 6 = \dots\dots\dots$$



9)

$$9 - 4 = \dots\dots\dots$$



10)

$$10 - 4 = \dots\dots\dots$$



11)

$$6 - 3 = \dots\dots\dots$$



12)

$$8 - 7 = \dots\dots\dots$$

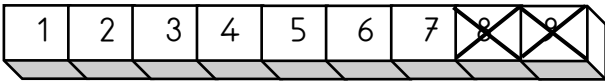


13)

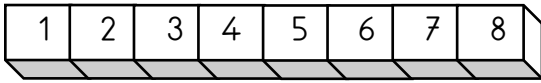
$$10 - 6 = \dots\dots\dots$$



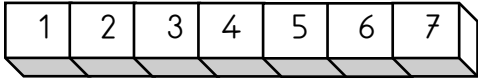
ÖRNEK: $9 - 2 = 7$



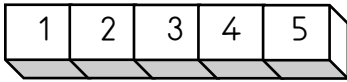
1) $8 - 4 = \dots\dots\dots$



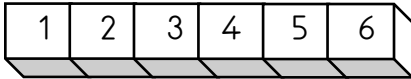
2) $7 - 3 = \dots\dots\dots$



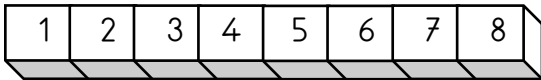
3) $5 - 2 = \dots\dots\dots$



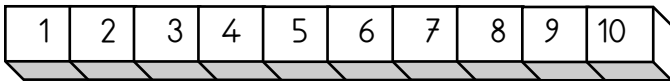
4) $6 - 5 = \dots\dots\dots$



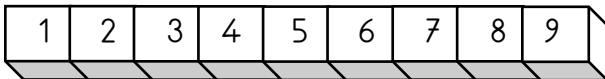
5) $8 - 6 = \dots\dots\dots$



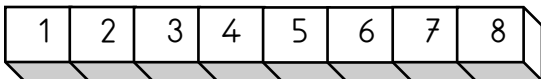
6) $10 - 4 = \dots\dots\dots$



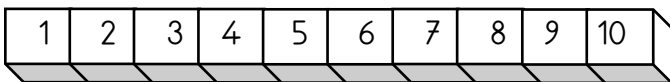
7) $9 - 5 = \dots\dots\dots$



8) $8 - 5 = \dots\dots\dots$



9) $10 - 6 = \dots\dots\dots$



10) $9 - 7 = \dots\dots\dots$



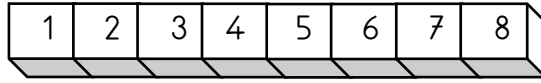
11) $5 - 5 = \dots\dots\dots$



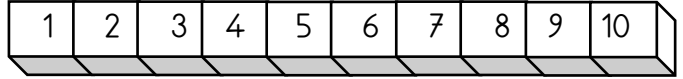
12) $7 - 5 = \dots\dots\dots$



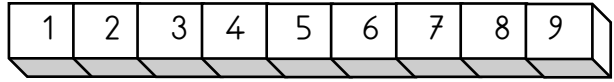
13) $8 - 7 = \dots\dots\dots$



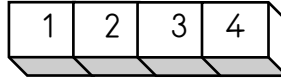
14) $10 - 2 = \dots\dots\dots$



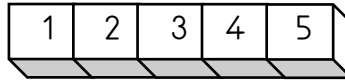
15) $9 - 8 = \dots\dots\dots$



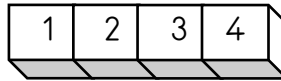
16) $4 - 2 = \dots\dots\dots$



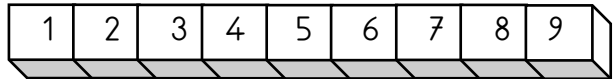
17) $5 - 3 = \dots\dots\dots$



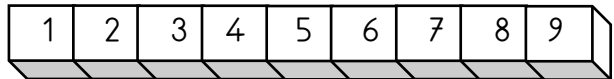
18) $4 - 3 = \dots\dots\dots$



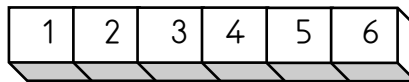
19) $9 - 9 = \dots\dots\dots$



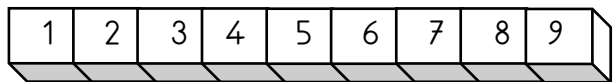
20) $9 - 3 = \dots\dots\dots$



21) $6 - 4 = \dots\dots\dots$



22) $9 - 1 = \dots\dots\dots$



23) $10 - 8 = \dots\dots\dots$

