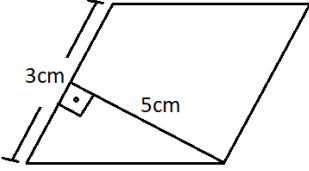
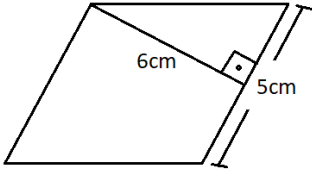
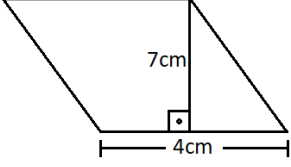
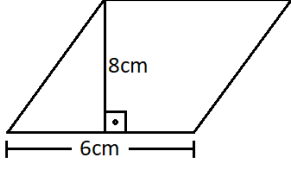
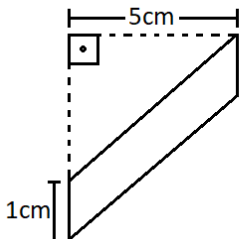
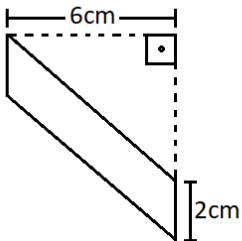
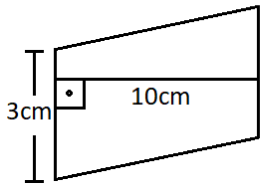
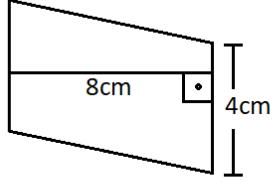


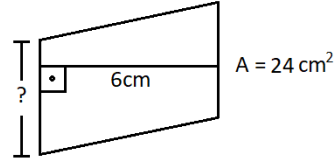
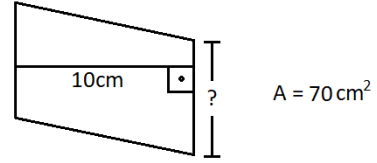
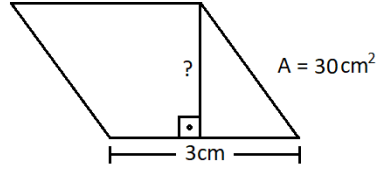
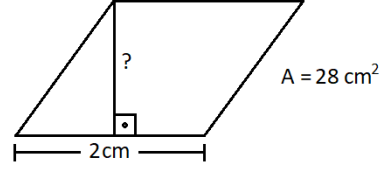
1) Aşağıda tabanları ve tabanlara ait yükseklikleri verilen paralel kenarların alanlarını bulunuz.



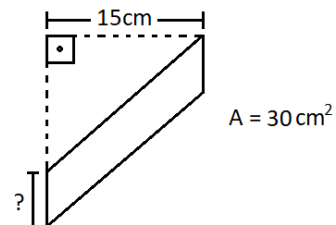
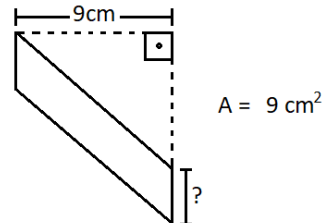
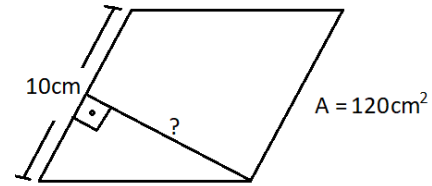
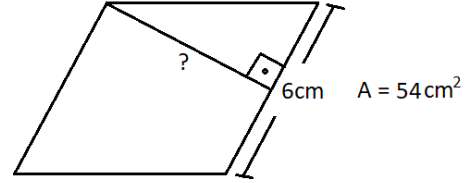
2) Aşağıda tabanları ve tabanlara ait yükseklikleri verilen paralel kenarların alanlarını bulunuz.



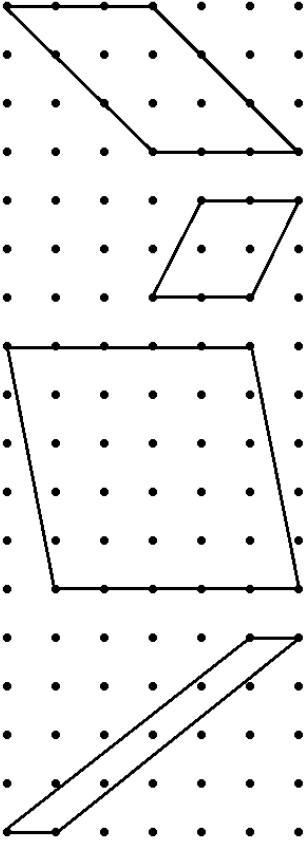
3) Aşağıda verilenlere göre, soru işaretlerine karşılık gelen değerleri bulunuz.



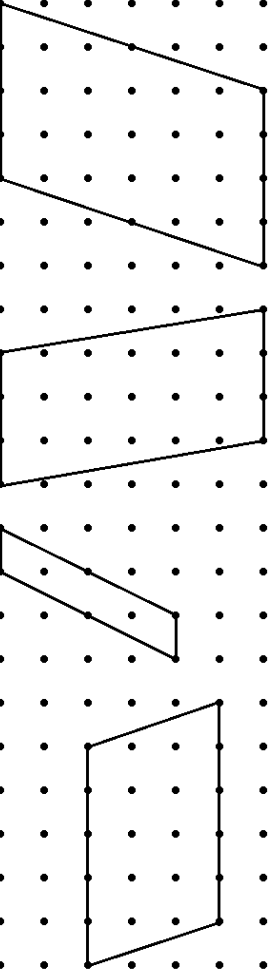
4) Aşağıda verilenlere göre, soru işaretlerine karşılık gelen değerleri bulunuz.



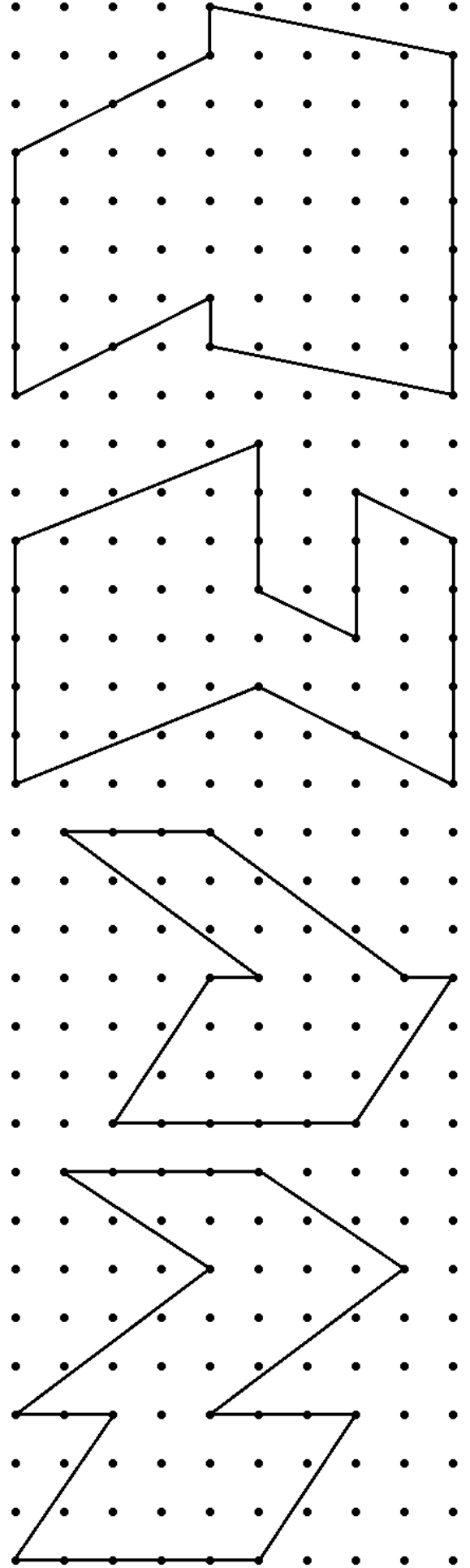
5) Aşağıdaki noktalı kağıtlarda verilen paralel kenarların alanlarını bulunuz.



6) Aşağıdaki noktalı kağıtlarda verilen paralel kenarların alanlarını bulunuz.



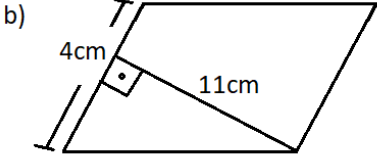
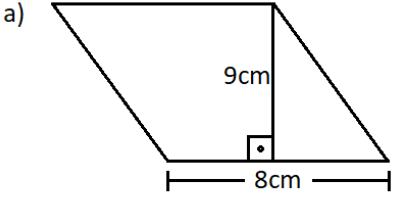
7) Aşağıdaki şekillerin alanlarını bulunuz.



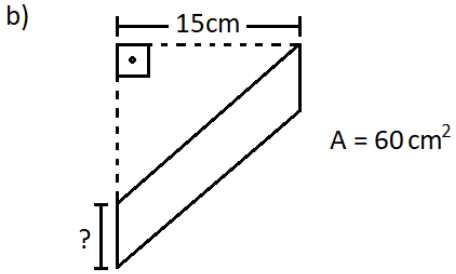
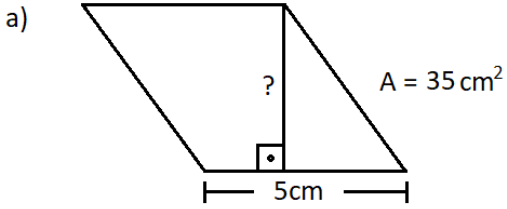
ADI SOYADI:

KENDİMİZİ DEĞERLENDİRELİM

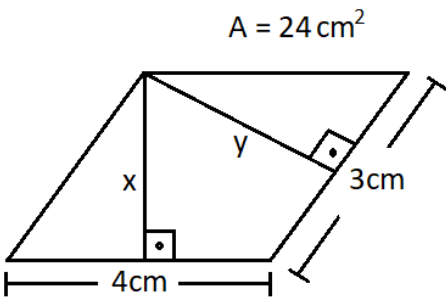
1) Aşağıdaki paralelkenarların alanlarını bulunuz.



2) Aşağıda alanları verilen paralelkenarların verilmeyen yükseklik ve taban uzunluklarını bulunuz.



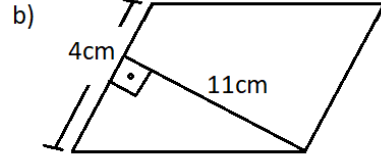
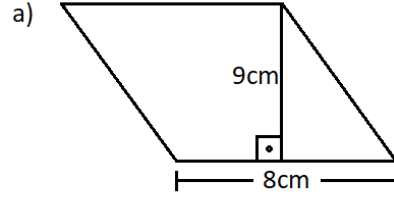
3) Aşağıda alanı verilen paralelkenarın tabanlarına ait yükseklikleri bulunuz.



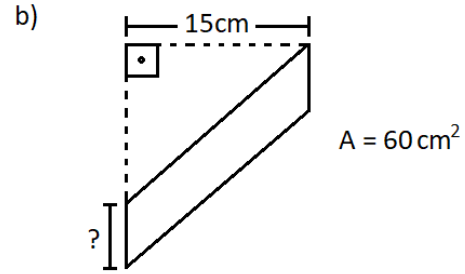
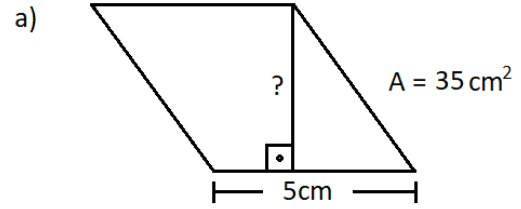
ADI SOYADI:

KENDİMİZİ DEĞERLENDİRELİM

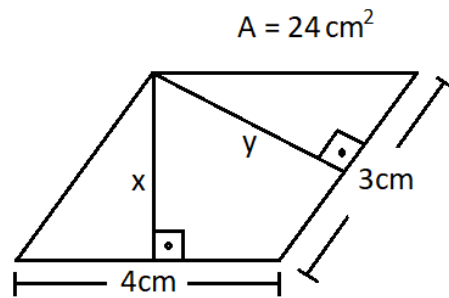
1) Aşağıdaki paralelkenarların alanlarını bulunuz.



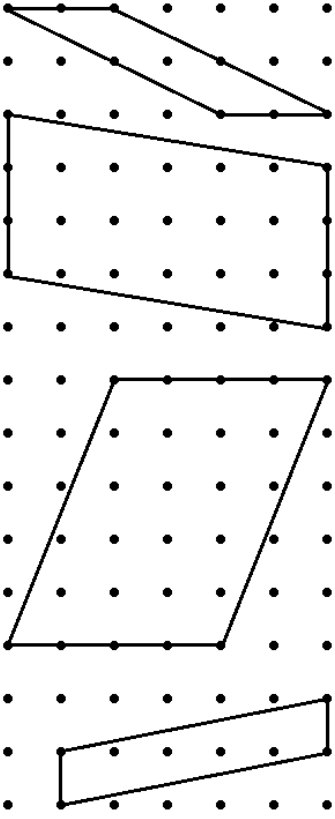
2) Aşağıda alanları verilen paralelkenarların verilmeyen yükseklik ve taban uzunluklarını bulunuz.



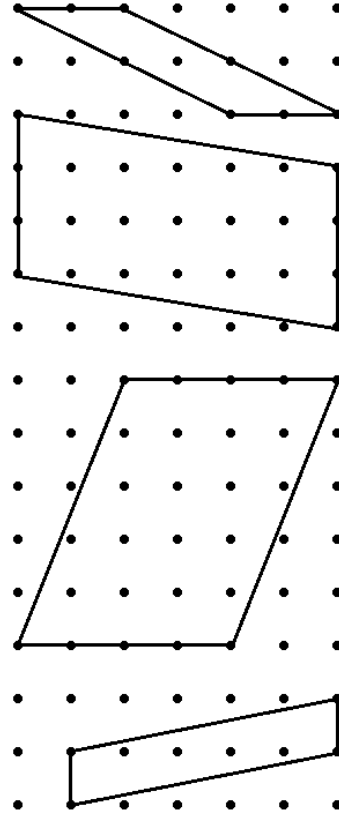
3) Aşağıda alanı verilen paralelkenarın tabanlarına ait yükseklikleri bulunuz.



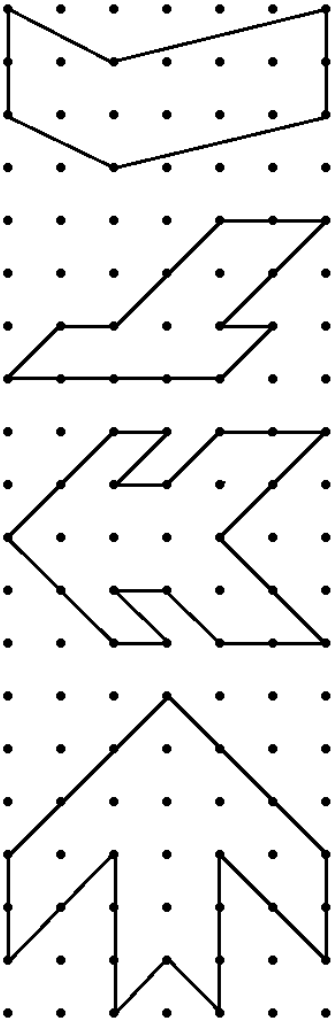
4) Aşağıdaki paralelkenarların alanlarını bulunuz.



4) Aşağıdaki paralelkenarların alanlarını bulunuz.



5) Aşağıdaki şekillerin alanlarını bulunuz.



5) Aşağıdaki şekillerin alanlarını bulunuz.

