


# Boyama & Kesirleri Karşılaştırma

Belirtilen kesirleri önce boyayınız sonra sembol kullanarak karşılaştırınız.


$$\frac{1}{3}$$



$$\frac{2}{3}$$



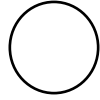
$$\frac{3}{5}$$



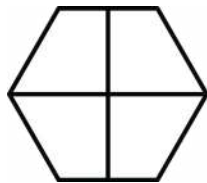
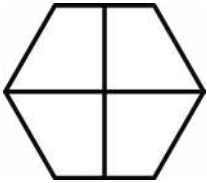
$$\frac{2}{5}$$




$$\frac{2}{4}$$



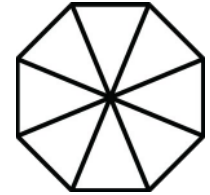
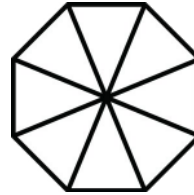
$$\frac{3}{4}$$




$$\frac{1}{8}$$





$$\frac{4}{8}$$



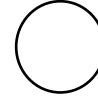
$$\frac{4}{5}$$



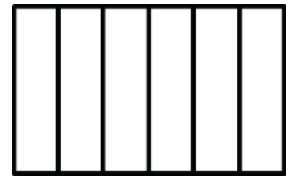
$$\frac{2}{5}$$



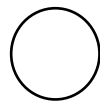
$$\frac{4}{6}$$





$$\frac{2}{6}$$



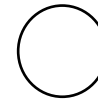
$$\frac{3}{5}$$



$$\frac{1}{5}$$



$$\frac{2}{7}$$



$$\frac{4}{7}$$

